

**O‘ZBEKISTON RESPUBLIKASI OLIY VA O‘RTA  
MAXSUS TA‘LIM VAZIRLIGI**

**ISLOM KARIMOV nomidagi  
TOSHKENT DAVLAT TEXNIKA UNIVERSITETI**

**Oliy matematika**  
**sirtqi ta‘lim talabalari uchun**  
**uslubiy ko‘rsatmalar**  
**1-qism**

**Toshkent–2019**

**Tuzuvchilar: Abdukarimov A., Abduraxmonov G., Esonov E.E., Kuralov B. A.,  
«Oliy matematika» sirtqi ta'lim talabalari uchun uslubiy ko'rsatmalar 1-qism.  
Toshkent: ToshDTU, 2019. 158 b.**

Ushbu uslubiy ko'rsatmalar "Oliy matematika" fanining matritsalar algebrasi, chiziqli tenglamalar sistemasi va determinantlar nazariyasi, analitik geometriya, matematik analizga kirish bo'limlarini o'z ichiga olgan.

Mazkur uslubiy ko'rsatma oliy texnika o'quv yurtlari sirtqi ta'lim yo'nalishlari uchun tasdiqlangan o'quv rejasi asosida tayyorlangan.

Uslubiy ko'rsatmada matritsalar ustida amallar, determinantlarni hisoblash, bir jinsli va bir jinsli bo'lmagan tenglamalar sistemasini yechishning asosiy usullari, vektorlar tushunchasi, ikki vektorning skalyar, vektor va aralash ko'paytmalari, tekislikda to'g'ri chiziqlar, tekislik, fazoda to'g'ri chiziqlar va to'g'ri chiziq va tekislik orasidagi munosabatlar keltirilgan.

Uslubiy ko'rsatmalar, universitetning barcha mutaxassislikdagi sirtqi ta'lim 1-bosqich talabalari foydalanishlari uchun mo'ljallab tayyorlangan.

Har bir bo'limda shu bo'limga tegishli nazariyaning asosiy tushunchalari va formulalari keltirilgan bo'lib, har biri 30 ta variantdan iborat bo'lgan 10 ta mustaqil ish topshiriqlari berilgan.

Har bir topshiriq uchun namunaviy variant olinib, ya'ni shu topshiriqqa mos misollar olinib ularning to'liq yechimlari keltirilgan.

Uslubiy ko'rsatmalar Islom Karimov nomidagi Toshkent davlat texnika universiteti ilmiy-uslubiy kengashi tomonidan nashrga tavsiya etilgan.

**Taqrizchilar:**

**O'zMU "Geometriya va topologiya" kafedrası  
professori f.-m.f.d. M.SH.Mamatov**

**ToshDTU "Oliy matematika" kafedrası  
f.-m.f.n., dotsent Z.I.Sadritdinova**

## I. Chiziqli algebra

### 1.1. Matritsa va ular ustida amallar

**Matritsa** deb sonlarning to‘g‘ri burchakli jadvaliga aytiladi.

$$A = \begin{pmatrix} a_{11} & a_{12} & \dots & a_{1n} \\ a_{21} & a_{22} & \dots & a_{2n} \\ \dots & \dots & \dots & \dots \\ a_{m1} & a_{m2} & \dots & a_{mn} \end{pmatrix}$$

Belgilashlar:  $A$  - matritsa;  $a_{ij}$  - matritsa elementlari;  $i$  - berilgan element joylashgan satr raqami;  $j$  - unga mos ustun raqami;  $m$  - matritsada satrlar soni;  $n$  - undagi ustunlar soni.

Agar  $m = n$  bo‘lsa matritsa kvadrat matritsa deb ataladi.  $n$  - soni matritsaning tartibi deyiladi.

Bir xil o‘lchamga ega bo‘lgan matritsalarining mos elementlari o‘zaro teng bo‘lsa, bunday matritsalar o‘zaro teng matritsalar deb ataladi.

Agar matritsaning barcha elementlari nollardan iborat bo‘lsa, bunday matritsa nolli matritsa deb ataladi.

Agar kvadrat matritsaning asosiy diagonalidagi barcha elementlari 1, qolganlari 0 bo‘lsa, bunday matritsa birlik matritsa deb ataladi.

### Matritsalar ustida chiziqli amallar

#### Matritsalarini qo‘shish

Bir hil  $m \times n$  o‘lchamli  $A$  va  $B$  matritsalarining yig‘indisi deb, huddi Shunday o‘lchamli  $C$  matritsaga aytiladiki, bu matritsaning har bir elementi  $A$  va  $B$  matritsalarining mos elementlarining yig‘indisidan iborat bo‘ladi:

$$c_{ij} = a_{ij} + b_{ij}, i = 1, \bar{m}, j = 1, \bar{n}$$

**1-misol.**  $A = \begin{pmatrix} 2 & -3 & 1 & 1 \\ 0 & 4 & -2 & 8 \end{pmatrix}$  va  $B = \begin{pmatrix} -1 & 4 & 0 & -1 \\ 2 & -2 & 5 & 7 \end{pmatrix}$  matritsalarining

yig'indisini toping.

**Yechish.** Berilgan matritsalarining bir xil joyda turgan elementlarini qo'shib,  $C = A + B$  matritsa elementlarini hisoblaymiz.

$$c_{11} = a_{11} + b_{11} = 2 - 1 = 1; c_{12} = -3 + 4 = 1; c_{13} = 1 + 0 = 1; c_{14} = 1 - 1 = 0;$$

$$c_{21} = 0 + 2 = 2; c_{22} = 4 - 2 = 2; c_{23} = -2 + 5 = 3; c_{24} = 8 + 7 = 15.$$

Shunday qilib,  $C = A + B = \begin{pmatrix} 1 & 1 & 1 & 0 \\ 2 & 2 & 3 & 15 \end{pmatrix}$ .

### Matritsani songa ko'paytirish

Matritsani songa ko'paytirish deb, o'lchami berilgan matritsa o'lchamiga teng bo'lgan, har bir elementi berilgan matritsa elementini berilgan songa ko'paytirishdan hosil bo'lgan matritsaga aytiladi.

**2-misol.** Agar  $A = \begin{pmatrix} 2 & -3 & 1 \\ -1 & 0 & -2 \end{pmatrix}$ ,  $B = \begin{pmatrix} 4 & 3 & 2 \\ -3 & 1 & -4 \end{pmatrix}$  bo'lsa,  $5A - 2B$  matritsani

toping.

**Yechish.**  $5A = \begin{pmatrix} 10 & -15 & 5 \\ -5 & 0 & -10 \end{pmatrix}$ ,  $2B = \begin{pmatrix} 8 & 6 & 4 \\ -6 & 2 & -8 \end{pmatrix}$ ,

$$5A - 2B = \begin{pmatrix} 10 - 8 & -15 - 6 & 5 - 4 \\ -5 + 6 & 0 - 2 & -10 + 8 \end{pmatrix} = \begin{pmatrix} 2 & -21 & 1 \\ 1 & -2 & -2 \end{pmatrix}$$

Shunday qilib,  $5A - 2B = \begin{pmatrix} 2 & -21 & 1 \\ 1 & -2 & -2 \end{pmatrix}$ .

### Matritsalarini ko'paytirish

O'lchami  $m \times p$  bo'lgan  $A$  matritsa va ulchami  $p \times n$  bo'lgan  $B$  matritsalarining ko'paytmasi deb o'lchami  $m \times n$  bo'lgan  $C$  matritsaga aytiladiki, uning har bir elementi  $C_{ij}$  quyidagi formula bilan

aniqlanadi: 
$$c_{ij} = \sum_{k=1}^p a_{ik} b_{kj}, \quad i = 1, \dots, m, j = 1, \dots, n.$$

Shunday qilib,  $c_{ij}$  element  $A$  matritsaning  $i$  - satrini  $B$  matritsaning unga mos  $j$  - ustuniga ko'paytmasining yig'indisidan iborat ekan.

Matritsalarini ko'paytirish amali kommutativ emas, ya'ni  $AB \neq BA$ . Haqiqatdan ham,  $AB$  ko'paytma mavjud bo'lsa, o'lchamlari to'g'ri kelmasligi sababli  $BA$  ko'paytma umuman mavjud bo'lmasligi mumkin. Agar  $AB$  va  $BA$  lar mavjud bo'lsa ham, ularning o'lchamlari har hil bo'lishi mumkin.

Bir hil o'lchamli kvadrat matritsalar uchun  $AB$  va  $BA$  ko'paytmalar mavjud va ular bir hil o'lchamga ega bo'ladi, ammo umuman olganda mos elementlari teng bo'lmaydi.

**3-misol.** Quyidagi matritsalarini bir-biriga ko'paytirish mumkinmi yoki yo'qmi? Shuni aniqlang. Agar ko'paytma mavjud bo'lsa, uni hisoblang.

$$A = \begin{pmatrix} 0 & 3 \\ 4 & -2 \\ 1 & -1 \end{pmatrix} \text{ va } B = \begin{pmatrix} 5 & 6 \\ 7 & 8 \end{pmatrix}.$$

**Yechish.**  $A$  va  $B$  matritsalarining o'lchamlarini taqqoslaymiz.  $A[3 \times 2]$ ,  $B[2 \times 2]$ . Bundan  $n = l$ ,  $m \neq k$ , shuning uchun  $AB[3 \times 2]$  mavjud, ko'paytma  $BA$  esa mavjud emas.

$AB$  ko'paytma elementlarini topamiz:

$$(ab)_{11} = 0 \cdot 5 + 3 \cdot 7 = 21; (ab)_{12} = 0 \cdot 6 + 3 \cdot 8 = 24; (ab)_{21} = 4 \cdot 5 - 2 \cdot 7 = 6;$$

$$(ab)_{22} = 4 \cdot 6 - 2 \cdot 8 = 8; (ab)_{31} = 1 \cdot 5 - 1 \cdot 7 = -2; (ab)_{32} = 1 \cdot 6 - 1 \cdot 8 = -2.$$

Shundayqilib,  $AB = \begin{pmatrix} 21 & 24 \\ 6 & 8 \\ -2 & -2 \end{pmatrix}$ ,  $BA$  mavjud emas.

**4-misol.** Agar  $A = \begin{pmatrix} 2 & -2 & 1 & 0 \\ -3 & 1 & -1 & 1 \end{pmatrix}$ ,  $B = \begin{pmatrix} 3 & 2 \\ -1 & 0 \\ 1 & 1 \\ 2 & 4 \end{pmatrix}$  bo'lsa,  $AB$  va  $BA$  ni

toping.

**Yechish.** Matritsalarini ko‘paytirish mumkinmi yoki yo‘qligini bilish uchun ularning o‘lchamlarini aniqlaymiz.

$A[2 \times 4]$ ,  $B[4 \times 2]$ . Bundan  $n = l = 4$ ,  $m = k = 2$ , shuning uchun  $AB$  va  $BA$  matritsalar mavjud, hamda  $AB[2 \times 2]$ ,  $BA[4 \times 4]$ .

$C = AB$  matritsaning elementlarini hisoblash uchun  $A$  matritsaning satr elementlarini unga mos bulgan  $B$  matritsaning ustun elementlariga ko‘paytiriladi.

$$c_{11} = 2 \cdot 2 + (-2)(-1) + 1 \cdot 1 + 0 \cdot 2 = 9$$

( $A$  ning birinchi satr elementlarining  $B$  ning birinchi ustun elementlariga ko‘paytmasining yig‘indisi; hisoblanayotgan elementning birinchi indeksi  $A$  matritsaning satrini, ikkinchi indeksi esa  $B$  matritsa ustunini bildiradi).

$$c_{12} = 2 \cdot 2 + (-2) \cdot 0 + 1 \cdot 1 + 0 \cdot 4 = 5;$$

$$c_{21} = -3 \cdot 3 + 1 \cdot (-1) + (-1) \cdot 1 + 1 \cdot 2 = -9;$$

$$c_{22} = -3 \cdot 2 + 1 \cdot 0 + (-1) \cdot 1 + 1 \cdot 4 = -3.$$

$$\text{Shunday qilib, } C = AB = \begin{pmatrix} 9 & 5 \\ -9 & -3 \end{pmatrix}.$$

$D = BA$  matritsa elementlarini hisoblayotganda  $B$  ning satr elementlari  $A$  ning ustun elementlariga ko‘paytiriladi.

$$d_{11} = 3 \cdot 2 + 2 \cdot (-3) = 0; \quad d_{12} = 3 \cdot (-2) + 2 \cdot 1 = -4; \quad d_{13} = 3 \cdot 1 + 2 \cdot (-1) = 1;$$

$$d_{14} = 3 \cdot 0 + 2 \cdot 1 = 2; \quad d_{21} = -1 \cdot 2 + 0 \cdot (-3) = -2; \quad d_{22} = -1 \cdot (-2) + 0 \cdot 1 = 2;$$

$$d_{23} = -1 \cdot 1 + 0 \cdot (-1) = -1; \quad d_{24} = -1 \cdot 0 + 0 \cdot 1 = 0; \quad d_{31} = 1 \cdot 2 + 1 \cdot (-3) = -1;$$

$$d_{32} = 1 \cdot (-2) + 1 \cdot 1 = -1; \quad d_{33} = 1 \cdot 1 + 1 \cdot (-1) = 0; \quad d_{34} = 1 \cdot 0 + 1 \cdot 1 = 1;$$

$$d_{41} = 2 \cdot 2 + 4 \cdot (-3) = -8; \quad d_{42} = 2 \cdot (-2) + 4 \cdot 1 = 0; \quad d_{43} = 2 \cdot 1 + 4 \cdot (-1) = -2;$$

$$d_{44} = 2 \cdot 0 + 4 \cdot 1 = 4.$$

Shunday qilib,  $D = BA = \begin{pmatrix} 0 & -4 & 1 & 2 \\ -2 & 2 & -1 & 0 \\ -1 & -1 & 0 & 1 \\ -8 & 0 & -2 & 4 \end{pmatrix}$ .

## 1.2. Determinantlar

**Ikkinchi tartibli determinant** deb, ikkinchi tartibli kvadrat matritsa elementlari yordamida aniqlanuvchi quyidagi songa aytiladi.

$$\Delta = \begin{vmatrix} a_{11} & a_{12} \\ a_{21} & a_{22} \end{vmatrix} = a_{11}a_{22} - a_{12}a_{21}.$$

Determinantning bosh diagonalida joylashgan elementlar ko‘paytmasidan, yordamchi diagonalda joylashgan elementlar ko‘paytmasi ayiriladi.

**5-misol.**  $\begin{vmatrix} 1 & -3 \\ 5 & 8 \end{vmatrix} = 1 \cdot 8 - 5 \cdot (-3) = 8 + 15 = 23.$

**Uchinchi tartibli determinant** deb, uchinchi tartibli kvadrat matritsa elementlari yordamida quyidagicha aniqlanuvchi songa aytiladi.

$$\Delta = \begin{vmatrix} a_{11} & a_{12} & a_{13} \\ a_{21} & a_{22} & a_{23} \\ a_{31} & a_{32} & a_{33} \end{vmatrix} = a_{11}a_{22}a_{33} + a_{13}a_{21}a_{32} + a_{12}a_{23}a_{31} - a_{13}a_{22}a_{31} - a_{12}a_{21}a_{33} - a_{11}a_{23}a_{32}.$$

Bu formulani eslab qolish uchun uchburchaklar qoidasidan foydalanish mumkin. U quyidagilardan iborat:

ko‘paytmasi determinantga «+» belgisi bilan kiruvchi elementlar quyidagicha joylashadi:

$$\begin{vmatrix} a_{11} & a_{12} & a_{13} \\ a_{21} & a_{22} & a_{23} \\ a_{31} & a_{32} & a_{33} \end{vmatrix}$$

Bosh diagonalga simmetrik boʻlgan ikkita uchburchak hosil qilinadi. Koʻpaytmasi determinantga «-» belgisi bilan kiruvchi elementlar ham, huddi shu kabi, yordamchi diagonalga nisbatan joylashadi.

$$\begin{vmatrix} a_{11} & a_{12} & a_{13} \\ a_{21} & a_{22} & a_{23} \\ a_{31} & a_{32} & a_{33} \end{vmatrix}$$

**6-misol.** Determinantni hisoblang.

$$\Delta = \begin{vmatrix} 2 & -3 & 5 \\ 1 & 0 & -4 \\ 2 & 1 & -1 \end{vmatrix}$$

**Yechish.** 3-chi tartibli determinantni uning qoidasidan foydalanib hisoblaymiz.

$$\begin{aligned} \Delta &= 2 \cdot 0 \cdot (-1) + (-3) \cdot (-4) \cdot 2 + 5 \cdot 1 \cdot 1 - 2 \cdot 0 \cdot 5 - 1 \cdot (-4) \cdot 2 - (-1) \cdot 1 \cdot (-3) = \\ &= 0 + 24 + 5 - 0 + 8 - 3 = 34. \end{aligned}$$

Determinantlarning asosiy xossalarini berishdan oldin transponirlangan matritsa tushunchasining taʼrifini keltiramiz.

**Transponirlangan matritsa** deb, ularning joylanishlari saqlangan holda satr va ustunlarini almashtirishdan hosil boʻlgan matritsaga aytiladi. Natijada  $A$  matritsaga nisbatan transponirlangan  $A'$  matritsa hosil boʻladi, uning elementlari  $A$  matritsa elementlari bilan quyidagi munosabatda bogʻlanadi:  $a'_{ij} = a_{ji}$ .

### Determinantlarning asosiy xossalari

1. Transponirlash natijasida determinant oʻzgarmaydi, yaʼni

$$\begin{vmatrix} a_{11} & a_{12} & a_{13} \\ a_{21} & a_{22} & a_{23} \\ a_{31} & a_{32} & a_{33} \end{vmatrix} = \begin{vmatrix} a_{11} & a_{21} & a_{31} \\ a_{12} & a_{22} & a_{32} \\ a_{13} & a_{23} & a_{33} \end{vmatrix}$$

2. Determinantning satr(yoki ustun) elementlari biror songa koʻpaytirilsa, determinantning qiymati shu songa koʻpaytiriladi, yaʼni



$$\begin{vmatrix} ka_{11} & ka_{12} & ka_{13} \\ a_{21} & a_{22} & a_{23} \\ a_{31} & a_{32} & a_{33} \end{vmatrix} = k \begin{vmatrix} a_{11} & a_{12} & a_{13} \\ a_{21} & a_{22} & a_{23} \\ a_{31} & a_{32} & a_{33} \end{vmatrix}.$$

3. Nollı satr(yoki ustun)ga ega bo‘lgan determinant nolga teng

$$\begin{vmatrix} a_{11} & a_{12} & a_{13} \\ 0 & 0 & 0 \\ a_{31} & a_{32} & a_{33} \end{vmatrix} = 0.$$

4. Ikkita bir hil satr(yoki ustun)ga ega bo‘lgan determinant nolga teng

$$\begin{vmatrix} a_{11} & a_{12} & a_{13} \\ a_{11} & a_{12} & a_{13} \\ a_{31} & a_{32} & a_{33} \end{vmatrix} = 0.$$

5. Ikkita satr(yoki ustun)i o‘zaro proporsional bo‘lgan determinant nolga teng

$$\begin{vmatrix} a_{11} & a_{12} & a_{13} \\ ka_{11} & ka_{12} & ka_{13} \\ a_{31} & a_{32} & a_{33} \end{vmatrix} = 0.$$

6. Determinantda ikkita satr(yoki ustun)i o‘zaro almashtirilsa, uning qiymati (-1)ga ko‘paytiriladi.

$$\begin{vmatrix} a_{21} & a_{22} & a_{23} \\ a_{11} & a_{12} & a_{13} \\ a_{31} & a_{32} & a_{33} \end{vmatrix} = - \begin{vmatrix} a_{11} & a_{12} & a_{13} \\ a_{21} & a_{22} & a_{23} \\ a_{31} & a_{32} & a_{33} \end{vmatrix}.$$

$$7. \begin{vmatrix} b_1 + c_1 & b_2 + c_2 & b_3 + c_3 \\ a_{21} & a_{22} & a_{23} \\ a_{31} & a_{32} & a_{33} \end{vmatrix} = \begin{vmatrix} b_1 & b_2 & b_3 \\ a_{21} & a_{22} & a_{23} \\ a_{31} & a_{32} & a_{33} \end{vmatrix} + \begin{vmatrix} c_1 & c_2 & c_3 \\ a_{21} & a_{22} & a_{23} \\ a_{31} & a_{32} & a_{33} \end{vmatrix}.$$

8. Determinantning biror satr(yoki ustun) elementlarini biror songa ko‘paytirib, ikkinchi satr(yoki ustun)ning mos elementlariga qo‘shilsa, determinantning qiymati o‘zgarmaydi.

$$\begin{vmatrix} a_{11} + ka_{21} & a_{12} + ka_{22} & a_{13} + ka_{23} \\ a_{21} & a_{22} & a_{23} \\ a_{31} & a_{32} & a_{33} \end{vmatrix} = \begin{vmatrix} a_{11} & a_{12} & a_{13} \\ a_{21} & a_{22} & a_{23} \\ a_{31} & a_{32} & a_{33} \end{vmatrix}.$$

## Determinatni satr yoki ustun bo'yicha yoyish

Determinantning biror elementining **minori** deb, shu element turgan satr va ustunni o'chirishdan hosil bo'lgan determinantga aytiladi va  $M_{ij}$  bilan belgilanadi.

**7- misol.**  $\begin{vmatrix} 1 & 2 & 3 \\ -5 & 1 & 1 \\ 2 & -1 & 4 \end{vmatrix}$  uchun  $a_{21} = -5$ ,  $M_{21} = \begin{vmatrix} 2 & 3 \\ -1 & 4 \end{vmatrix} = 8 + 3 = 11$ .

Determinantning  $a_{ji}$  elementining algebraik to'ldiruvchisi deb Shunday minorga aytiladiki, agar  $i + j$  juft bo'lsa, u minorning o'ziga teng,  $i + j$  toq bo'lsa, minorga qarama-qarshi bo'lgan songa teng, ya'ni  $A_{ij} = (-1)^{i+j} M_{ij}$ .

Shu bilan birga quyidagi tasdiq o'rinlidir: Determinatning qiymati uning ixtiyoriy satr yoki ustun elementlarining ularga mos algebraik to'ldiruvchilarga ko'paytmasining yig'indisiga teng, ya'ni

$$\begin{vmatrix} a_{11} & a_{12} & a_{13} \\ a_{21} & a_{22} & a_{23} \\ a_{31} & a_{32} & a_{33} \end{vmatrix} = \sum_{j=1}^3 a_{ij} A_{ij}, \text{ bu erda } i=1,2,3.$$

Shunday qilib, determinatni hisoblash uchun qandaydir ustun yoki satr elementlarining algebraik to'ldiruvchilarini topib, ularni determinantning mos elementlariga ko'paytmasining yig'indisini hisoblash etarlidir.

**8-misol.** 6 misoldagi determinantni satrga yoyish yordamida hisoblaymiz. Qulaylik uchun 2-satrni tanlaymiz, chunki  $a_{22} = 0$  bo'lganligidan  $a_{22} \cdot A_{22} = 0$ .

Shunday qilib,

$$A_{21} = (-1)^{2+1} \cdot \begin{vmatrix} -3 & 5 \\ 1 & -1 \end{vmatrix} = -1 \cdot (-3 \cdot (-1) - 5 \cdot 1) = 2;$$
$$A_{23} = (-1)^{2+3} \cdot \begin{vmatrix} 2 & -3 \\ 2 & 1 \end{vmatrix} = -1 \cdot (2 \cdot 1 - (-3) \cdot 2) = -8$$

U holda  $\Delta = a_{21}A_{21} + a_{23}A_{23} = 1 \cdot 2 + (-4)(-8) = 34$ .

## Yuqori tartibli determinantlar

$n$  - tartibli determinant deb  $n$  – ta satr va  $n$  – ta ustundan iborat bo‘lgan quyidagi determinantga aytiladi.

$$\begin{vmatrix} a_{11} & a_{12} & \dots & a_{1n} \\ a_{21} & a_{22} & \dots & a_{2n} \\ \dots & \dots & \dots & \dots \\ a_{n1} & a_{n2} & \dots & a_{nn} \end{vmatrix}$$

Uchinchi tartibli determinantning barcha xossalari  $n$ - tartibli determinant uchun ham o‘rinlidir.

Amaliyotda yuqori tartibli determinantlarni satr yoki ustun bo‘yicha yoyishdan foydalanib xisoblanadi. Ustun yoki satr bo‘yicha yoyish natijasida determinantning tartibi pasaytiriladi va natijada uni uchinchi tartibli determinantga olib kelish mumkin.

**9-Misol.** 4- tartibli determinantni hisoblang.

$$\Delta = \begin{vmatrix} 2 & -5 & 1 & 2 \\ -3 & 7 & -1 & 4 \\ 5 & -9 & 2 & 7 \\ 4 & -6 & 1 & 2 \end{vmatrix}$$

**Yechish.** Determinantni Shunday almashtiramizki, natijada bir ustun yoki satrda to‘rtta elementdan uchtasi nolga aylansin. Buning uchun 8-xossadan foydalanamiz. Agar determinantda  $\pm 1$ ga teng element bo‘lsa, bu xossani qo‘llash juda o‘rinli bo‘ladi. Shunday element sifatida  $a_{13} = 1$  elementni tanlaymiz va uning yordamida 3- ustunning qolgan barcha elementlarini nolga aylantiramiz.

Shu maqsadda:

- a) 2- satr elementlariga ularga mos 1- satr elementlarini qo‘shamiz;
- b) 1- star elementlarini 2 ga ko‘paytirib 3- satr elementlaridan ayiramiz.
- v) 4-satr elementlaridan 1-satr elementlarini ayiramiz.

Natijada quyidagi determinantni hosil qilamiz.

$$\Delta = \begin{vmatrix} 2 & -5 & 1 & 2 \\ -1 & 2 & 0 & 6 \\ 1 & 1 & 0 & 3 \\ 2 & -1 & 0 & 0 \end{vmatrix}$$

Hosil qilingan determinantni 3- ustun bo'yicha yoyamiz.

$$\Delta = 1 \cdot (-1)^{1+3} \cdot \begin{vmatrix} -1 & 2 & 6 \\ 1 & 1 & 3 \\ 2 & -1 & 0 \end{vmatrix} = \begin{vmatrix} -1 & 2 & 6 \\ 1 & 1 & 3 \\ 2 & -1 & 0 \end{vmatrix}$$

Bu determinantning 2-satr elementlarini 2-ga ko'paytirib, 1- satr elementlaridan ayiramiz.

$$\Delta = \begin{vmatrix} -3 & 0 & 0 \\ 1 & 1 & 3 \\ 2 & -1 & 0 \end{vmatrix}$$

Bu determinantni 1-satr elementlari bo'yicha yoyib natijani hosil qilamiz.

$$\Delta = -3 \cdot (-1)^{1+1} \cdot \begin{vmatrix} 1 & 3 \\ -1 & 0 \end{vmatrix} = -3 \cdot (1 \cdot 0 - 3 \cdot (-1)) = -9.$$

### 1.3. Teskari matritsa

Agar  $\Delta_A = 0$  bo'lsa  $A$  kvadrat matritsa xos matritsa,  $\Delta_A \neq 0$  bo'lsa, xosmas matritsa deyiladi.

Agar  $A \cdot A^{-1} = A^{-1} \cdot A = E$  kabi bo'lsa,  $A^{-1}$  kvadrat matritsa, o'shanday tartibli  $A$  kvadrat matritsaga teskari matritsa deyiladi. Berilgan matritsaga teskari matritsa mavjud bo'lishi uchun, berilgan matritsaning xosmas bo'lishi zarur va etarlidir. Teskari matritsa quyidagi formuladan topiladi:

$$A^{-1} = \begin{pmatrix} \frac{A_{11}}{\Delta_A} & \frac{A_{21}}{\Delta_A} & \dots & \frac{A_{n1}}{\Delta_A} \\ \frac{A_{12}}{\Delta_A} & \frac{A_{22}}{\Delta_A} & \dots & \frac{A_{n2}}{\Delta_A} \\ \dots & \dots & \dots & \dots \\ \frac{A_{1n}}{\Delta_A} & \frac{A_{2n}}{\Delta_A} & \dots & \frac{A_{nn}}{\Delta_A} \end{pmatrix}.$$

**10-misol.**  $A = \begin{pmatrix} 1 & 3 & -5 \\ 0 & 1 & 2 \\ 0 & 0 & 1 \end{pmatrix}$  matritsaga teskari matritsani toping.

**Yechish.** Birinchi ustun bo'yicha yoyib  $A$  matritsaning determinantini hisoblaymiz.

$$\Delta_A = 1 \cdot \begin{vmatrix} 1 & 2 \\ 0 & 1 \end{vmatrix} = 1 \neq 0$$

Demak,  $A$  matritsaga teskari matritsa mavjud.

$A$  matritsaning algebraik to'ldiruvchilarini topamiz:

$$\begin{aligned} A_{11} &= \begin{vmatrix} 1 & 2 \\ 0 & 1 \end{vmatrix} = 1 & A_{21} &= -\begin{vmatrix} 3 & -5 \\ 0 & 1 \end{vmatrix} = -3 & A_{31} &= \begin{vmatrix} 3 & -5 \\ 1 & 2 \end{vmatrix} = 11 \\ A_{12} &= -\begin{vmatrix} 0 & 2 \\ 0 & 1 \end{vmatrix} = 0 & A_{22} &= \begin{vmatrix} 1 & -5 \\ 0 & 1 \end{vmatrix} = 1 & A_{32} &= -\begin{vmatrix} 1 & -5 \\ 0 & 2 \end{vmatrix} = -2 \\ A_{13} &= \begin{vmatrix} 0 & 0 \\ 0 & 1 \end{vmatrix} = 0 & A_{23} &= -\begin{vmatrix} 1 & 3 \\ 0 & 0 \end{vmatrix} = 0 & A_{33} &= \begin{vmatrix} 1 & 3 \\ 0 & 1 \end{vmatrix} = 1 \end{aligned}$$

Natijada:

$$A^{-1} = \frac{1}{1} \cdot \begin{pmatrix} 1 & -3 & 11 \\ 0 & 1 & -2 \\ 0 & 0 & 1 \end{pmatrix} = \begin{pmatrix} 1 & -3 & 11 \\ 0 & 1 & -2 \\ 0 & 0 & 1 \end{pmatrix}.$$

#### 1.4. Chiziqli algebraik tenglamalar tizimi

**Chiziqli tenglama** deb,

$$a_1x_1 + a_2x_2 + \dots + a_nx_n = b,$$

ko'rinishdagi tenglamaga aytiladi, bu yerda  $a_i$  va  $b$  – sonlar,  $x_i$  – noma'lumlar. Shunday qilib, chiziqli tenglamaning chap tomonida no'malumlarining chiziqli kombinatsiyasi, o'ng tomonida esa son turadi.

Agar  $b=0$  bo'lsa, chiziqli tenglama **bir jinsli**, aks holda, ya'ni  $b \neq 0$  bo'lsa, **bir jinsli bo'lmagan** tenglama deyiladi.









determinantda  $x_j$  noma'lumlar oldidagi koeffitsiyentlardan tuzilgan ustunni ozod hadlardan iborat ustun bilan almashtirishdan hosil bo'lgan determinantni  $\Delta_{x_j}$  bilan belgilaymiz.

U holda: Agar  $\Delta \neq 0$  bo'lsa, (3) tizim quyidagi formulalar bilan aniqlanuvchi yagona yechimga ega:  $x_1 = \frac{\Delta_{x_1}}{\Delta}, x_2 = \frac{\Delta_{x_2}}{\Delta}, \dots, x_n = \frac{\Delta_{x_n}}{\Delta}$ .

1) Agar  $\Delta = \Delta_{x_j} = 0$  bo'lsa, tizim cheksiz ko'p yechimga ega.

2) Agar  $\Delta = 0$ , va  $\Delta_{x_j}$  lardan hech bo'lmaganda bittasi noldan farqli bo'lsa, tizim yechimga ega emas.

### 12-misol.

Tenglamalar tizimini Kramer usulida yeching:

$$\begin{cases} 4x - y + z = 2 \\ x + y - 2z = 1 \\ 2x + 3y - 4z = 6 \end{cases}$$

**Yechish.** Asosiy determinantni hisoblaymiz:

$$\Delta = \begin{vmatrix} 4 & -1 & 1 \\ 1 & 1 & -2 \\ 2 & 3 & -4 \end{vmatrix} = 9 \neq 0,$$

demak, tenglamalar tizimi yagona yechimga ega.

$\Delta_x, \Delta_y$  va  $\Delta_z$ — larni topamiz.

$$\Delta_x = \begin{vmatrix} 2 & -1 & 1 \\ 1 & 1 & -2 \\ 6 & 3 & -4 \end{vmatrix} = 9, \quad \Delta_y = \begin{vmatrix} 4 & 2 & 1 \\ 1 & 1 & -2 \\ 2 & 6 & -4 \end{vmatrix} = 36, \quad \Delta_z = \begin{vmatrix} 4 & -1 & 2 \\ 1 & 1 & 1 \\ 2 & 3 & 6 \end{vmatrix} = 18.$$

Bundan

$$x = \frac{\Delta_x}{\Delta} = \frac{9}{9} = 1, \quad y = \frac{\Delta_y}{\Delta} = \frac{36}{9} = 4, \quad \Delta_z = \frac{\Delta_z}{\Delta} = \frac{18}{9} = 2.$$

### Chiziqli tenglamalar tizimini teskari matritsa yordamida yechish

Chiziqli tenglamalar tizimi (3)-ni qaraylik va quyidagicha belgilashlar kiritaylik:

$$A = \begin{pmatrix} a_{11} & a_{12} & \dots & a_{1n} \\ a_{21} & a_{22} & \dots & a_{2n} \\ \dots & \dots & \dots & \dots \\ a_{n1} & a_{n2} & \dots & a_{nn} \end{pmatrix} - \text{tizimning matritsasi,}$$

$$X = \begin{pmatrix} x_1 \\ x_2 \\ \dots \\ x_n \end{pmatrix} - \text{noma'lumlar ustuni,}$$

$$B = \begin{pmatrix} b_1 \\ b_2 \\ \dots \\ b_n \end{pmatrix} - \text{ozod hadlar ustuni. U holda (3) tizimni matritsaviy tenglama}$$

ko'rinishida quyidagicha yozish mumkin:

$$AX = B. \quad (5)$$

Faraz qilaylik  $A$  - xosmas matritsa bo'lsin, u holda unga teskari  $A^{-1}$  matritsa mavjud bo'ladi. (5) tenglamaning har ikki tomonini  $A^{-1}$  ga chapdan ko'paytiraylik.

$$A^{-1}AX = A^{-1}B.$$

Ma'lumki  $A^{-1}A = E$ , u holda  $EX = A^{-1}B$ ,  $EX = X$  ekanligidan  $X = A^{-1}B$ .

Shunday qilib, (5) – matritsaviy tenglamaning yechimi,  $A$  matritsaga teskari matritsaning (3) tizimning ozod hadlaridan iborat ustun matritsaga ko'paytmasiga teng ekan.

### 13-misol.

Tenglamalar tizimini teskari matritsa yordamida yeching.

$$\begin{cases} x - 3y + z = 1 \\ 2x + y - z = 6 \\ 5x - 4y - 7z = 4 \end{cases}$$

**Yechish.** Tizimning matritsasini tuzamiz.

$$A = \begin{pmatrix} 1 & -3 & 1 \\ 2 & 1 & -1 \\ 5 & -4 & -7 \end{pmatrix}$$

$\Delta_A = -51 \neq 0$ , demak, tenglamalar tizimi yagona yechimga ega.

$A^{-1}$  matritsani topamiz:

$$A_{11} = -11 \quad A_{21} = -25 \quad A_{31} = 2$$

$$A_{12} = 9 \quad A_{22} = -12 \quad A_{32} = 3$$

$$A_{13} = -13 \quad A_{23} = -11 \quad A_{33} = 7$$

U xolda  $A^{-1} = -\frac{1}{51} \begin{pmatrix} -11 & -25 & 2 \\ 9 & -12 & 3 \\ -13 & -11 & 7 \end{pmatrix}$ .

Agar  $B = \begin{pmatrix} 1 \\ 6 \\ 4 \end{pmatrix}$ ,  $X = \begin{pmatrix} x \\ y \\ z \end{pmatrix}$  'ekanligini e'tiborga olsak, berilgan tenglamalar

tizimi yechimi  $X = A^{-1}B$  bo'lgan  $AX = B$  matritsaviy tenglamaga aylanadi.

Shunday qilib,

$$X = -\frac{1}{51} \begin{pmatrix} -11 & -25 & 2 \\ 9 & -12 & 3 \\ -13 & -11 & 7 \end{pmatrix} \begin{pmatrix} 1 \\ 6 \\ 4 \end{pmatrix} = -\frac{1}{51} \begin{pmatrix} -11 - 150 + 8 \\ 9 - 72 + 12 \\ -13 - 66 + 28 \end{pmatrix} = -\frac{1}{51} \begin{pmatrix} -153 \\ -51 \\ -51 \end{pmatrix} = \begin{pmatrix} 3 \\ 1 \\ 1 \end{pmatrix},$$

ya'ni  $x = 3$ ,  $y = 1$ ,  $z = 1$ .

**Topshiriq variantlari**

### **Hisob topshiriqlarini qabul qilishda beriladigan nazariy savollar:**

1. Ikkinchi va uchinchi tartibli determinantlar.
2. Determinantlarning xossalari.
3. Minorlar va algebraik to'ldiruvchilar
4. Yuqori tartibli determinantlar.
5. Chiziqli tnglamalar sistemasini yechish uchun Kramer usuli.
6. Matritsa tushunchasi.
7. Matritsalar ustida amallar. Matritsalarini qo'shish va ayirish.
8. Matritsalarini ko'paytirish
9. Teskari matritsa.
10. Chiziqli tnglamalar sistemasini teskari matritsa usulida yechish.

### **Chiziqli algebra bo'limidan topshiriq variantlari**

## 1-variant

1. Determinantni hisoblang:  $\begin{vmatrix} 8 & 1 & 9 & 0 \\ 6 & -1 & 4 & 1 \\ 0 & 1 & 0 & 1 \\ 1 & -1 & 2 & -2 \end{vmatrix}$ .

2.  $A = \begin{pmatrix} 3 & 0 & 4 \\ -2 & 2 & -3 \\ 1 & 1 & 2 \end{pmatrix}$  va  $B = \begin{pmatrix} -1 & 1 & 2 \\ 0 & 1 & -2 \\ 5 & 3 & 1 \end{pmatrix}$  matritsalar uchun  $A^2 - BA + 3A$

matritsali ko'phadni hisoblang.

3.  $\begin{pmatrix} 1 & -1 & 3 \\ 3 & -5 & 1 \\ 4 & -7 & 1 \end{pmatrix}$  matritsaga teskari matritsani toping.

4. Tenglamalar tizimini Gauss usulida yeching:

$$\begin{cases} 2x - y + 5t = 6 \\ 3x + 2y - z = 3 \\ -x + 2y + 4z + t = 10 \\ -y - z + 3t = 0 \end{cases}$$

5. Tenglamalar tizimini matritsalar usulida yeching:

$$\begin{cases} x + 2y - 2z = 5 \\ 4x - y + 10z = 11. \\ 5x + 3y - 5z = 9 \end{cases}$$

## 2-variant

1. Determinantni hisoblang:  $\begin{vmatrix} 1 & 2 & 3 & 4 \\ 2 & 2 & 3 & 4 \\ 3 & 3 & 3 & 4 \\ 4 & 4 & 4 & 4 \end{vmatrix}$ .

2.  $A = \begin{pmatrix} 1 & 0 & 1 \\ -2 & -1 & 2 \\ 1 & -1 & 2 \end{pmatrix}$  va  $B = \begin{pmatrix} -7 & 1 & -3 \\ 5 & 1 & 2 \\ 0 & 1 & 4 \end{pmatrix}$  matritsalar uchun  $B^2 + BA + 2A$

matritsali ko'p hadni hisoblang

3.  $\begin{pmatrix} 8 & 5 & -46 \\ 2 & 1 & -12 \\ 3 & 2 & 25 \end{pmatrix}$  matritsaga teskari matritsani toping.

4. Tenglamalar tizimini matritsalar usulida yeching:

$$\begin{cases} x - 3z + 4t = -4 \\ 2x + y + 10z - 15t = 10 \\ 2y + 3z - 6t = 7 \\ 3x + 4y - z + 2t = 4 \end{cases}$$

5. Tenglamalar tizimini Gauss usulida yeching:

$$\begin{cases} 2x_1 - x_2 - x_3 - 2x_4 = -1 \\ -x_1 - 2x_2 + 3x_3 + x_4 = 3 \\ x_1 + x_2 - 2x_3 - x_4 = 2 \\ 2x_1 - 3x_2 + x_3 - 2x_4 = 1 \end{cases}$$

**3-variant**

1. Determinantni hisoblang: 
$$\begin{vmatrix} 1 & 1 & 4 & 1 \\ 2 & 1 & 3 & 0 \\ 3 & 1 & 2 & 1 \\ 4 & 1 & 1 & 0 \end{vmatrix}.$$

2.  $A = \begin{pmatrix} 4 & 1 & 2 \\ -2 & 0 & 2 \\ 3 & -1 & 2 \end{pmatrix}$  va  $B = \begin{pmatrix} 1 & 0 & 3 \\ 1 & -2 & 4 \\ 1 & -2 & -4 \end{pmatrix}$  matritsalar uchun  $A^2 - 2BA + A$

matritsaviy ko'phadni hisoblang

3.  $\begin{pmatrix} 3 & 1 & 6 \\ 2 & -3 & 6 \\ 5 & 1 & 27 \end{pmatrix}$  matritsaga teskari matritsani toping.

4. Tenglamalar tizimini Gauss usulida yeching:

$$\begin{cases} 2x - y + 5t = 6 \\ 3x + 2y - z = 3 \\ -x + 2y + 4z + t = 10 \\ -y - z + 3t = 0 \end{cases}$$

5. Tenglamalar tizimini matritsa usulida yeching:

$$\begin{cases} x - y = 3 \\ 2x + y - 3z = 3 \\ -x - 2y + 3z = 0 \end{cases}$$

**4-variant**

1. Determinantni hisoblang: 
$$\begin{vmatrix} 2 & 1 & 1 & 1 & 1 \\ 1 & 3 & 1 & 1 & 1 \\ 1 & 1 & 4 & 1 & 1 \\ 1 & 1 & 1 & 5 & 1 \\ 1 & 1 & 1 & 1 & 6 \end{vmatrix}.$$

2.  $A = \begin{pmatrix} 0 & 1 & 2 \\ 3 & 1 & 2 \\ -3 & 3 & 2 \end{pmatrix}$  va  $B = \begin{pmatrix} 1 & 3 & 0 \\ 2 & 2 & 4 \\ 3 & 1 & -1 \end{pmatrix}$  matritsalar uchun  $2A^2 + BA + 3A$

matritsali ko'phadni hisoblang.

3.  $\begin{pmatrix} -5 & 3 & 14 \\ 4 & 2 & 13 \\ 3 & 5 & 26 \end{pmatrix}$  matritsaga teskari matritsani hisoblang.

4. Tenglamalar tizimini Gauss usulida yeching:

$$\begin{cases} 4x + 4y - 5z = -2 \\ 3x + 2y + z = 7 \\ x - y + 10z = 20 \end{cases}.$$

5. Tenglamalar tizimini matritsalar usulida yeching:

$$\begin{cases} x + 3y - z = 4 \\ x + 2y + z = 1 \\ x + 4y - 3z = 7 \end{cases}.$$

**5-variant**



1. Determinantni hisoblang: 
$$\begin{vmatrix} 3 & -1 & 4 & 2 \\ 5 & 2 & 0 & 1 \\ 0 & 2 & 1 & -3 \\ 6 & -2 & 9 & 8 \end{vmatrix}.$$

2.  $A = \begin{pmatrix} 3 & -1 & 0 \\ -2 & 1 & -3 \\ 5 & 1 & 2 \end{pmatrix}$  va  $B = \begin{pmatrix} -1 & 0 & 2 \\ 3 & 1 & -2 \\ 5 & -4 & 1 \end{pmatrix}$  matritsalar uchun  $B^2 - BA + 4A$

matritsali ko'phadni hisoblang.

3.  $\begin{pmatrix} 3 & 4 & 27 \\ 4 & -1 & 35 \\ 5 & -2 & 43 \end{pmatrix}$ . matritsaga teskari matritsani hisoblang.

4. Tenglamalar tizimini Gauss usulida yeching:

$$\begin{cases} 2x + 3y - 4z + 5t = 3 \\ -y - t = -1 \\ x - 3z + 8t = -1 \\ x + 2y - 4z + 3t = 0 \end{cases}.$$

5. Tenglamalar tizimini matritsalar usulida yeching:

$$\begin{cases} 2x_1 - 3x_2 + x_3 = -3 \\ x_1 + 2x_2 - 3x_3 = -5 \\ 5x_1 + x_2 - 6x_3 = -16 \end{cases}$$

**6-variant**

1. 1. Determinantni hisoblang:

$$\begin{vmatrix} 5 & 6 & 0 & 0 & 0 \\ 1 & 5 & 6 & 0 & 0 \\ 0 & 1 & 5 & 6 & 0 \\ 0 & 0 & 1 & 5 & 6 \\ 0 & 0 & 0 & 1 & 5 \end{vmatrix}.$$

2.  $A = \begin{pmatrix} 4 & 0 & 2 \\ -1 & 1 & -3 \\ 5 & 1 & 2 \end{pmatrix}$  va  $B = \begin{pmatrix} -1 & 1 & 2 \\ 0 & 1 & -2 \\ 5 & -5 & 0 \end{pmatrix}$  matritsalar uchun  $A^2 + BA + 3B$

matritsali ko'phadni hisoblang.

3.  $\begin{pmatrix} 2 & -1 & -3 \\ 3 & 2 & -4 \\ 2 & -3 & 5 \end{pmatrix}$  matritsaga teskari matritsani toping.

4. Tenglamalar tizimini Gauss usulida yeching:

$$\begin{cases} x_1 - x_2 + 2x_3 - 3x_4 = 4 \\ -x_1 + 2x_2 - x_3 + 4x_4 = 1 \\ 2x_1 + x_2 - 2x_3 + 4x_4 = 1 \\ x_1 + x_2 + x_3 + x_4 = 7 \end{cases}.$$

5. Tenglamalar tizimini matritsalar usulida yeching:

$$\begin{cases} x - 3y + 2z = 2 \\ x + y - 5z = 7 \\ 3x - y - 8z = 16 \end{cases}.$$

**7-variant**

1. Determinantni hisoblang:  $\begin{vmatrix} 1 & 1 & 1 & 1 \\ 2 & 0 & 1 & 1 \\ 3 & 1 & 0 & 1 \\ 4 & 1 & 1 & 0 \end{vmatrix}$ .

2.  $A = \begin{pmatrix} 1 & 5 & 4 \\ -2 & 2 & -4 \\ 1 & 1 & 2 \end{pmatrix}$  va  $B = \begin{pmatrix} -5 & 1 & 2 \\ 0 & 3 & -1 \\ 2 & 3 & 1 \end{pmatrix}$  matritsalar uchun

$A^2 - BA + 4B$  matritsali ko'phadni hisoblang.

3.  $\begin{pmatrix} 2 & 4 & 3 \\ 3 & 12 & 5 \\ 4 & 1 & -1 \end{pmatrix}$  matritsaga teskari matritsani toping.

4. Tenglamalar tizimini matritsalar usulida yeching:

$$\begin{cases} 7x - 2y + 4z = 13 \\ 2x + 2y - z = 2 \\ 3x - y + z = 0 \end{cases} .$$

5. Tenglamalar tizimini Gauss usulida yeching:

$$\begin{cases} 2x_1 - x_2 - x_3 - 2x_4 = -1 \\ -x_1 - 2x_2 + 3x_3 + x_4 = 8 \\ x_1 + x_2 - 2x_3 - x_4 = -5 \\ 2x_1 - 3x_2 + x_3 - 2x_4 = 5 \end{cases}$$

**8-variant**

1. Determinantni hisoblang : 
$$\begin{vmatrix} 2 & 0 & -1 & 1 & 0 \\ 1 & 2 & -1 & 1 & 0 \\ 1 & 0 & 1 & 0 & 1 \\ 0 & 1 & -1 & 2 & 1 \\ 0 & 1 & -1 & 0 & 2 \end{vmatrix}.$$

2.  $A = \begin{pmatrix} 1 & 0 & 4 \\ 2 & 2 & 3 \\ 3 & -7 & 2 \end{pmatrix}$  va  $B = \begin{pmatrix} 1 & 1 & 2 \\ 3 & 5 & 2 \\ 5 & 3 & 1 \end{pmatrix}$  matritsalar uchun

$B^2 - BA + 3A$ . matritsali ko'phadni hisoblang

3.  $\begin{pmatrix} 2 & 3 & 1 \\ 0 & 6 & 6 \\ -1 & -2 & -1 \end{pmatrix}$ . matritsaga teskari matritsani toping.

4. Tenglamalar tizimini Gauss usulida yeching:

$$\begin{cases} 2x - y + 5t = 6 \\ 3x + 2y - z = 3 \\ -x + 2y + 4z + t = 10 \\ -y - z + 3t = 0 \end{cases}$$

5. Tenglamalar tizimini matritsalar usulida yeching:

$$\begin{cases} 2x + y - 3z = 5 \\ x - y + 2z - 2t = -4. \\ 2y - z - t = 3 \end{cases}$$

**9-variant**

1. Determinantni hisoblang: 
$$\begin{vmatrix} 1 & 2 & 1 & 4 \\ 8 & 0 & 1 & 9 \\ -9 & 1 & 1 & -7 \\ 3 & -1 & 1 & 3 \end{vmatrix}.$$

2.  $A = \begin{pmatrix} 3 & -1 & 4 \\ 3 & 2 & 0 \\ 1 & 1 & 2 \end{pmatrix}$  va  $B = \begin{pmatrix} 1 & 1 & 2 \\ -4 & 0 & 2 \\ 2 & -4 & 3 \end{pmatrix}$  matritsalar uchun  $A^2 + 3BA + 2B$

matritsali ko'phadni hisoblang.

3.  $\begin{pmatrix} 3 & 5 & 1 \\ 2 & 4 & 0 \\ 1 & 1 & 0 \end{pmatrix}$  matritsaga teskari matritsani toping.

4. Tenglamalar tizimini Gauss usulida yeching:

$$\begin{cases} 2x + 3y - 4z + 5t = 3 \\ -y - t = -1 \\ x - 3z + 8t = -1 \\ x + 2y - 4z + 3t = 0 \end{cases}.$$

5. Tenglamalar tizimini matritsalar usulida yeching:

$$\begin{cases} x - 2y - z = 2 \\ -2x - 4y + 2z = 4 \\ 2x + y - 3z = -2 \end{cases}$$

1. Determinantni hisoblang: 
$$\begin{vmatrix} 3 & 3 & -4 & -3 \\ 0 & 6 & 1 & 1 \\ 5 & 4 & 2 & 1 \\ 2 & 3 & 3 & 2 \end{vmatrix}.$$

2.  $A = \begin{pmatrix} -1 & 0 & 4 \\ 2 & -3 & 1 \\ 1 & 1 & -5 \end{pmatrix}$  va  $B = \begin{pmatrix} 3 & 1 & 2 \\ 0 & 6 & -2 \\ 2 & 3 & 0 \end{pmatrix}$  matritsalar uchun  $A^2 - BA + 3A$

matritsali ko'phadni hisoblang.

3.  $\begin{pmatrix} 3 & 2 & 5 \\ -5 & 4 & 3 \\ 1 & -3 & -1 \end{pmatrix}$  matritsaga teskari matritsani toping.

4. Tenglamalar tizimini matritsalar usulida yeching:

$$\begin{cases} x + y = 1 \\ y + z = 4. \\ x + z = 6 \end{cases}$$

5. Tenglamalar tizimini Gauss usulida yeching:

$$\begin{cases} 2x + y - 5z - t = 2 \\ x - 2y + 2t = 1 \\ -x + 3y - z - 3t = -1 \\ x - y - z + t = 1 \end{cases}.$$

1. Determinantni hisoblang : 
$$\begin{vmatrix} 3 & 1 & 1 & 4 \\ 0 & 4 & 10 & 1 \\ 1 & 7 & 17 & 3 \\ 2 & 2 & 4 & 3 \end{vmatrix}$$

2.  $A = \begin{pmatrix} 3 & -5 & 4 \\ 2 & 0 & 3 \\ 1 & 1 & -4 \end{pmatrix}$  va  $B = \begin{pmatrix} 1 & 1 & 2 \\ 0 & -1 & 2 \\ 1 & 3 & -3 \end{pmatrix}$  matritsalar uchun  $B^2 - BA + 2A$

matritsali ko'phadni hisoblang

3.  $\begin{pmatrix} 2 & 4 & 3 \\ 3 & -1 & 4 \\ 4 & -2 & 5 \end{pmatrix}$  matritsaga teskari matritsani toping.

4. Tenglamalar tizimini Gauss usulida yeching:

$$\begin{cases} x - z = -2 \\ 2x - y - z = 4 \\ y - z = -6 \end{cases}$$

5. Tenglamalar tizimini matritsalar usulida yeching:

$$\begin{cases} 2x + y - 5z - t = 2 \\ x - 2y + 2t = 1 \\ -x + 3y - z - 3t = -1 \\ x - y - z + t = 1 \end{cases}$$

1. Determinantni hisoblang: 
$$\begin{vmatrix} 1 & 2 & -1 & 0 \\ 3 & -2 & 1 & 2 \\ 7 & 1 & 4 & 1 \\ 0 & 1 & 1 & -1 \end{vmatrix}.$$

2.  $A = \begin{pmatrix} 1 & 2 & 2 \\ -1 & 2 & -3 \\ 1 & -1 & 2 \end{pmatrix}$  va  $B = \begin{pmatrix} -1 & 1 & -3 \\ 5 & 0 & 2 \\ -5 & 3 & 1 \end{pmatrix}$  matritsalar uchun  $3A^2 - BA + B$

matritsali ko'phadni hisoblang

3.  $\begin{pmatrix} 3 & 3 & 1 \\ 2 & -4 & -3 \\ 5 & 7 & 1 \end{pmatrix}$  matritsaga teskari matritsani toping.

4. Tenglamalar tizimini matritsalar usulida yeching:

$$\begin{cases} x - 2y + z + 3t = -6 \\ -10z + 2t = -2 \\ 2x + 2y - 5z - 2t = 8 \\ x + y - z = 3 \end{cases}$$

5. Tenglamalar tizimini Gauss usulida yeching :

$$\begin{cases} 4x - y + z = 1 \\ -3x + 2y + 5z = -20 \\ -4x - 2y + z = -18 \end{cases}$$



1. Determinantni hisoblang:  $\begin{vmatrix} 7 & 1 & -1 & 0 \\ 4 & 2 & 1 & 1 \\ 3 & -1 & 1 & -1 \\ 2 & 0 & 1 & 5 \end{vmatrix}$ .

2.  $A = \begin{pmatrix} 3 & 3 & 4 \\ -2 & -4 & -3 \\ 1 & 3 & 0 \end{pmatrix}$  va  $B = \begin{pmatrix} 1 & 1 & -1 \\ 0 & 1 & 2 \\ 5 & 3 & 4 \end{pmatrix}$  matritsalar uchun  $A^2 + 4BA + B$

matritsali ko'phadni hisoblang

3.  $\begin{pmatrix} 3 & 2 & 5 \\ -2 & 1 & 3 \\ 1 & -3 & 1 \end{pmatrix}$  matritsaga teskari matritsani toping.

4. Tenglamalar tizimini Gauss usulida yeching:

$$\begin{cases} x - y + z = 0 \\ 2x + y - 2z = -1. \\ 2x - y + z = 0 \end{cases}$$

5. Tenglamalar tizimini matritsalar usulida yeching:

$$\begin{cases} 5x + y - 4z = 2 \\ x + 2y - z = 1 . \\ 3x - 3y - 2z = 0 \end{cases}$$

## 14-variant

1. Determinantni hisoblang: 
$$\begin{vmatrix} 2 & 1 & 0 & -1 \\ 3 & 7 & 1 & 1 \\ 2 & 2 & 0 & 0 \\ 1 & -1 & 1 & 1 \end{vmatrix}.$$

2.  $A = \begin{pmatrix} 4 & 0 & 1 \\ 2 & 3 & -3 \\ -1 & 1 & 2 \end{pmatrix}$  va  $B = \begin{pmatrix} -1 & 1 & 2 \\ 0 & 2 & 1 \\ 5 & -3 & 1 \end{pmatrix}$  matritsalar uchun  $A^2 - BA + 2B$

matritsali ko'phadni hisoblang.

3.  $\begin{pmatrix} 3 & -2 & -7 \\ 3 & 4 & -1 \\ 2 & -1 & -1 \end{pmatrix}$  matritsaga teskari matritsani toping

4. Tenglamalar tizimini matritsalar usulida yeching:

$$\begin{cases} x - y - z = 1 \\ 2x + 2y - z = 2. \\ -y + 4z = 0 \end{cases}$$

5. Tenglamalar tizimini Gauss usulida yeching:

$$\begin{cases} 2x + y - 5z - t = 2 \\ x - 2y + 2t = 1 \\ -x + 3y - z - 3t = -1 \\ z - y - z + t = 1 \end{cases}$$

## 15-variant

1. Determinantni hisoblang: 
$$\begin{vmatrix} 1 & 2 & 1 & -1 \\ -1 & 0 & 2 & -2 \\ 1 & 3 & 2 & 3 \\ 1 & -1 & 5 & -1 \end{vmatrix}.$$

2.  $A = \begin{pmatrix} 2 & 0 & 4 \\ 3 & -1 & 3 \\ 4 & 1 & -5 \end{pmatrix}$  va  $B = \begin{pmatrix} 2 & 1 & 2 \\ -1 & 0 & 4 \\ 1 & -3 & 1 \end{pmatrix}$  matritsalar uchun  $B^2 - BA + 5A$

matritsali ko'phadni hisoblang.

3.  $\begin{pmatrix} 2 & 5 & -3 \\ 3 & 13 & -5 \\ 2 & 7 & 4 \end{pmatrix}$  matritsaga teskari matritsani toping

4. Tenglamalar tizimini Gauss usulida yeching:

$$\begin{cases} x + y + z = 1 \\ 2x - 2y + 3z = 3. \\ 4x - y = 0 \end{cases}$$

5. Tenglamalar tizimini matritsalar usulida yeching:

$$\begin{cases} x + 2y - z - 2t = 5 \\ -2x - y + 2z + t = -4 \\ -x + y + z - t = 1 \\ x - y - z + t = -1 \end{cases}.$$

## 16-variant

1. Determinantni hisoblang: 
$$\begin{vmatrix} 1 & 1 & -1 & 2 \\ 0 & 1 & 4 & -1 \\ 1 & 2 & 2 & 1 \\ 7 & 0 & 5 & 1 \end{vmatrix}.$$

2.  $A = \begin{pmatrix} 0 & 3 & -4 \\ -1 & 2 & 2 \\ 1 & 1 & 2 \end{pmatrix}$  va  $B = \begin{pmatrix} 1 & 0 & 2 \\ 2 & -1 & 7 \\ -5 & 3 & 1 \end{pmatrix}$  matritsalar uchun  $A^2 - BA + 3A$

matritsali ko'phadni hisoblang.

3.  $\begin{pmatrix} 3 & -2 & -5 \\ 2 & 17 & 4 \\ 5 & 16 & 3 \end{pmatrix}$  matritsaga teskari matritsani toping.

4. Tenglamalar tizimini matritsalar usulida yeching:

$$\begin{cases} 12x_1 + 13x_2 - 10x_3 - 11x_4 = 6 \\ 10x_1 - 5x_2 + 7x_3 - 3x_4 = 1 \\ 11x_1 - 5x_2 + 10x_3 - 5x_4 = 1 \\ 7x_1 + x_2 - 6x_3 + 2x_4 = 7 \end{cases}.$$

5. Tenglamalar tizimini Gauss usulida yeching:

$$\begin{cases} 2x + y - 5z - t = 2 \\ x - 2y + 2t = 1 \\ -x + 3y - z - 3t = -1 \\ x - y - z + t = 1 \end{cases}.$$

## 17-variant

1. Determinantni hisoblang: 
$$\begin{vmatrix} 3 & 2 & 5 & 1 \\ -5 & 4 & 3 & 0 \\ 1 & -3 & -1 & -1 \\ 3 & -2 & 4 & 0 \end{vmatrix}$$

2.  $A = \begin{pmatrix} 3 & 0 & 3 \\ 1 & -2 & 3 \\ 1 & 2 & -1 \end{pmatrix}$  va  $B = \begin{pmatrix} 2 & 1 & 2 \\ 0 & -2 & 3 \\ -1 & 3 & -2 \end{pmatrix}$  matritsalar uchun

$A^2 - BA + 2B$  matritsali ko'phadni hisoblang.

3.  $\begin{pmatrix} 28 & 3 & 4 \\ 7 & 4 & -1 \\ 14 & 5 & -2 \end{pmatrix}$  matritsaga teskari matritsani toping

4. Tenglamalar tizimini Gauss usulida yeching:

$$\begin{cases} x - 2y + 5z = 20 \\ 3x + 4y + 4z = -13 \\ x + 2y + z = -8 \end{cases}$$

5. Tenglamalar tizimini matritsalar usulida yeching:

$$\begin{cases} x_1 + x_2 + 3x_3 - 2x_4 = 2 \\ 2x_1 + 2x_2 + 4x_3 - x_4 = 5 \\ 3x_1 + 3x_2 + 5x_3 - 2x_4 = 6 \\ 2x_1 + 2x_2 + 8x_3 - 3x_4 = 7 \end{cases}$$

## 18-variant

1. Determinantni hisoblang : 
$$\begin{vmatrix} -5 & 3 & 14 & 0 \\ 4 & 2 & 13 & -1 \\ 3 & 5 & 26 & 1 \\ 0 & 0 & 1 & -2 \end{vmatrix}.$$

2.  $A = \begin{pmatrix} 3 & 0 & 1 \\ 1 & -4 & 3 \\ 0 & 2 & 2 \end{pmatrix}$  va  $B = \begin{pmatrix} 2 & 1 & 0 \\ -3 & -1 & -4 \\ 2 & 0 & 1 \end{pmatrix}$  matritsalar uchun

$A^2 - 2BA + 3B$  matritsali ko'phadni hisoblang.

3.  $\begin{pmatrix} 2 & -1 & 3 \\ 3 & -5 & 1 \\ 4 & -7 & 1 \end{pmatrix}$  matritsaga teskari matritsani toping.

4. Tenglamalar tizimini matritsalar usulida yeching:

$$\begin{cases} 3x - 2y + z = 2 \\ 4x + y + 5z = 10. \\ -x + 10y - z = 8 \end{cases}$$

5. Tenglamalar tizimini Gauss usulida yeching:

$$\begin{cases} 2x + y - 5z - t = 2 \\ x - 2y + 2t = 1 \\ -x + 3y - z - 3t = -1 \\ x - y - z + t = 1 \end{cases}.$$

## 19-variant

1. Determinantni hisoblang : 
$$\begin{vmatrix} 2 & 3 & -4 & 5 \\ 0 & -1 & 0 & -1 \\ 1 & 0 & -3 & 8 \\ 1 & 2 & -4 & 3 \end{vmatrix}.$$

2.  $A = \begin{pmatrix} 3 & 1 & 3 \\ -1 & 2 & 0 \\ 1 & -1 & 2 \end{pmatrix}$  va  $B = \begin{pmatrix} 4 & -1 & 2 \\ 0 & 1 & 2 \\ 5 & -2 & 1 \end{pmatrix}$  matritsalar

chun  $B^2 - BA + 3A$  matritsali ko'phadni hisoblang.

3.  $\begin{pmatrix} 2 & -1 & 0 & 5 \\ 3 & 2 & -1 & 0 \\ -1 & 2 & 4 & 1 \\ 0 & -1 & 1 & 3 \end{pmatrix}$  matritsaga teskari matritsani toping

4. Tenglamalar tizimini Gauss usulida yeching:

$$\begin{cases} x + y + z = 1 \\ 2x - 2y + 3z = 3. \\ 4x - y = 0 \end{cases}$$

5. Tenglamalar tizimini matritsalar usulida yeching:

$$\begin{cases} x_1 + 2x_2 - x_3 - 2x_4 = 5 \\ -2x_1 - x_2 + 2x_3 + x_4 = -4 \\ -x_1 + x_2 + x_3 - x_4 = 1 \\ x_1 - x_2 - x_3 + x_4 = -1 \end{cases}.$$

## 20-variant

1. Determinantni hisoblang:  $\begin{vmatrix} 1 & -1 & 2 & -3 \\ -1 & 2 & -1 & 4 \\ 2 & 1 & -2 & 5 \\ 1 & 1 & 1 & 1 \end{vmatrix}$ .

2.  $A = \begin{pmatrix} 3 & 0 & -2 \\ 3 & 1 & 1 \\ -3 & -1 & 2 \end{pmatrix}$  va  $B = \begin{pmatrix} 1 & 1 & -1 \\ 2 & -1 & 2 \\ 3 & 0 & 1 \end{pmatrix}$  matritsalar uchun  $B^2 - BA + 4B$

matritsali ko'phadni hisoblang.

3.  $\begin{pmatrix} 1 & 2 & -2 \\ 4 & -1 & 10 \\ 5 & 3 & -5 \end{pmatrix}$  matritsaga teskari matritsani toping.

4. Tenglamalar tizimini matritsalar usulida yeching:

$$\begin{cases} x - y + z = 1 \\ x + 2y - z = 2 \\ 2x + z = 0 \end{cases}$$

5. Tenglamalar tizimini Gauss usulida yeching

$$\begin{cases} 2x_1 + x_2 - 5x_3 - x_4 = 2 \\ x_1 - 2x_2 + 2x_4 = 1 \\ -x_1 + 3x_2 - x_3 - 3x_4 = -1 \\ x_1 - x_2 - x_3 + x_4 = 1 \end{cases}$$



## 21-variant

1. Determinantni hisoblang: 
$$\begin{vmatrix} 1 & 0 & -3 & 4 \\ 2 & 1 & 10 & -15 \\ 0 & 2 & 3 & -6 \\ 3 & 4 & -1 & 2 \end{vmatrix}.$$

2.  $A = \begin{pmatrix} 0 & 1 & 3 \\ 1 & -2 & -1 \\ 1 & 3 & 2 \end{pmatrix}$  va  $B = \begin{pmatrix} 2 & -1 & 0 \\ 2 & 1 & -3 \\ 5 & -2 & 1 \end{pmatrix}$  matritsalar uchun  $B^2 + BA + 3B$

matritsali ko'phadni hisoblang.

3.  $\begin{pmatrix} 1 & 2 & -2 \\ 4 & -1 & 10 \\ 5 & 3 & -5 \end{pmatrix}$  matritsaga teskari matritsani toping.

4. Tenglamalar tizimini Gauss usulida yeching:

$$\begin{cases} 8x - 7y + 10z - 18t = 17 \\ 3x + 4y + 9z - 10t = 7 \\ 2x - 5y + 7z - 10t = 11 \\ 9x + 8y + 4z - 7t = 2 \end{cases}.$$

5. Tenglamalar tizimini matritsalar usulida yeching:

$$\begin{cases} 5x_1 + x_2 - 8x_3 + 10x_4 = -5 \\ 2x_1 + x_2 - 2x_3 + x_4 = 1 \\ -3x_1 - 2x_2 + 2x_3 + x_4 = -4 \\ x_1 + 2x_2 + 2x_3 - 7x_4 = 8 \end{cases}.$$

## 22-variant

1. Determinantni hisoblang: 
$$\begin{vmatrix} 3 & 4 & 1 & 2 \\ 5 & 7 & 1 & 3 \\ 4 & 5 & 2 & 1 \\ 7 & 10 & 1 & 6 \end{vmatrix}.$$

2.  $A = \begin{pmatrix} -2 & 1 & 3 \\ 1 & 2 & 0 \\ -1 & -3 & 1 \end{pmatrix}$  va  $B = \begin{pmatrix} -1 & -1 & 2 \\ 0 & 4 & -3 \\ 3 & -2 & 1 \end{pmatrix}$  matritsalar uchun  $B^2 - 2BA + 4A$

matritsali ko'phadni hisoblang.

3.  $\begin{pmatrix} 1 & 1 & 0 \\ 0 & 1 & 1 \\ 1 & 0 & 1 \end{pmatrix}$  matritsaga teskari matritsani toping.

4. Tenglamalar tizimini matritsalar usulida yeching:

$$\begin{cases} 3x - y + 2z = 4 \\ 2x + 3y - 4z = 3. \\ -x + 2y - 2z = 1 \end{cases}$$

5. Tenglamalar tizimini Gauss usulida yeching:

$$\begin{cases} 12x_1 + 14x_2 - 15x_3 + 24x_4 = 22 \\ 16x_1 + 18x_2 - 22x_3 + 29x_4 = 27 \\ 18x_1 + 20x_2 - 21x_3 + 32x_4 = 30 \\ 10x_1 + 12x_2 - 16x_3 + 20x_4 = 18 \end{cases}$$

## 23-variant

1. Determinantni hisoblang: 
$$\begin{vmatrix} 1 & 2 & -1 & 2 \\ -2 & -1 & 2 & 1 \\ -1 & 1 & 1 & -1 \\ 1 & -1 & -1 & -1 \end{vmatrix}.$$

2.  $A = \begin{pmatrix} 1 & 1 & -2 \\ -1 & 2 & 0 \\ 2 & 3 & 2 \end{pmatrix}$  va  $B = \begin{pmatrix} 5 & 1 & -3 \\ 0 & -1 & 2 \\ 4 & 2 & 1 \end{pmatrix}$  matritsalar uchun  $B^2 + 2BA + A$

matritsali ko'phadni hisoblang.

3.  $\begin{pmatrix} 1 & -1 & 1 \\ 2 & 1 & -2 \\ 2 & -1 & 1 \end{pmatrix}$ . matritsaga teskari matritsani toping.

4. Tenglamalar tizimini Gauss usulida yeching:

$$\begin{cases} x + 2y - 4z = -9 \\ -x - 3y + 6z = 13. \\ 2x + 5y - z = -4 \end{cases}$$

5. Tenglamalar tizimini matritsalar usulida yeching:

$$\begin{cases} -3x_1 + x_2 + x_3 = 6 \\ 2x_1 + 7x_2 + 30x_3 = 65 \\ -5x_1 - 2x_2 - 13x_3 = 5 \end{cases}$$

## 24-variant

1. Determinantni hisoblang: 
$$\begin{vmatrix} 12 & 13 & -10 & -11 \\ 10 & -5 & 7 & -3 \\ 11 & -5 & 10 & -5 \\ 7 & 1 & -6 & 2 \end{vmatrix}.$$

2.  $A = \begin{pmatrix} 0 & 1 & 4 \\ 5 & -1 & 0 \\ 2 & 3 & 2 \end{pmatrix}$  va  $B = \begin{pmatrix} -1 & 1 & -3 \\ 0 & 2 & 4 \\ -3 & 2 & 1 \end{pmatrix}$  matritsalar uchun  $B^2 - 5BA + 2A$

matritsali ko'phadni hisoblang.

3.  $\begin{pmatrix} 1 & 2 & -4 \\ -1 & -3 & 6 \\ 2 & 5 & -1 \end{pmatrix}$  matritsaga teskari matritsani toping.

4. Tenglamalar tizimini matritsalar usulida yeching:

$$\begin{cases} x - 3z + 4t = -4 \\ 2x + y + 10z - 15t = 10 \\ 2y + 3z - 6t = 7 \\ 3x + 4y - z + 2t = 4 \end{cases}.$$

5. Tenglamalar tizimini Gauss usulida yeching:

$$\begin{cases} x + 2y - z - 2t = 5 \\ -2x - y + 2z + t = -4 \\ -x + y + z - t = 1 \\ x - y - z + t = -1 \end{cases}.$$

## 25-variant

1. Determinantni hisoblang: 
$$\begin{vmatrix} 1 & 4 & 2 & 0 \\ 3 & 3 & 1 & 0 \\ -1 & 2 & -1 & 1 \\ 0 & -1 & 1 & 2 \end{vmatrix}.$$

2.  $A = \begin{pmatrix} 1 & -1 & 4 \\ 0 & 2 & 0 \\ -3 & -2 & 2 \end{pmatrix}$  va  $B = \begin{pmatrix} -1 & 1 & -3 \\ 3 & 4 & 5 \\ -2 & 2 & -1 \end{pmatrix}$  matritsalar uchun  $B^2 + BA + 4A$

matritsali ko'phadni hisoblang.

3.  $\begin{pmatrix} 1 & 0 & 0 \\ 0 & 3 & 5 \\ 2 & 5 & 7 \end{pmatrix}$  matritsaga teskari matritsani toping.

4. Tenglamalar tizimini Gauss usulida yeching:

$$\begin{cases} x - 2y + 3z = -2 \\ -4x + 5y + 6z = -10. \\ x - y + z = 0 \end{cases}$$

5. Tenglamalar tizimini matritsalar usulida yeching:

$$\begin{cases} 2x_1 - x_2 - x_3 - 2x_4 = 1 \\ -x_1 - 2x_2 + 3x_3 + x_4 = 2 \\ x_1 + x_2 - 2x_3 - x_4 = -1 \\ 2x_1 - 3x_2 + x_3 - 2x_4 = 3 \end{cases}.$$

## 26-variant

1. Determinantni hisoblang: 
$$\begin{vmatrix} 2 & 2 & 0 & 1 \\ 2 & 1 & 3 & 4 \\ 1 & 1 & 0 & 2 \\ 5 & 2 & 1 & 0 \end{vmatrix}.$$

2. Agar  $X \begin{pmatrix} 1 & 1 & -1 \\ 2 & 1 & 0 \\ 1 & -1 & 1 \end{pmatrix} = \begin{pmatrix} 1 & -1 & 3 \\ 4 & 3 & 2 \\ 1 & -2 & 5 \end{pmatrix}$  bo'lsa,  $X$  matritsani toping.

3.  $\begin{pmatrix} 4 & -1 & 2 \\ 1 & 1 & -2 \\ 0 & -1 & 3 \end{pmatrix}$  matritsaga teskari matritsani toping.

4. Tenglamalar tizimini matritsalar usulida yeching:

$$\begin{cases} 2x - y - z = 4 \\ 3x + 4y - 2z = 11. \\ 3x - 2y + 4z = 11 \end{cases}$$

5. Tenglamalar tizimini Gauss usulida yeching:

$$\begin{cases} x + 2y - 4z = 1 \\ 2x + y - 5z = -1. \\ x - y - z = -2 \end{cases}.$$

## 27-variant

1. Determinantni hisoblang: 
$$\begin{vmatrix} 2 & 0 & 3 & 1 \\ -1 & -3 & 1 & 0 \\ 3 & 0 & 4 & 1 \\ 3 & 2 & 2 & 2 \end{vmatrix}.$$

2. Agar  $\begin{pmatrix} -3 & 1 & 2 \\ 1 & 0 & -1 \\ -4 & 3 & 0 \end{pmatrix} \cdot X = \begin{pmatrix} -2 & 1 & 2 \\ 1 & -1 & 3 \\ 1 & -1 & 4 \end{pmatrix}$  bo'lsa, X matritsani toping.

3.  $\begin{pmatrix} 1 & 5 & 1 \\ 3 & 2 & 1 \\ 6 & -2 & 1 \end{pmatrix}$  matritsaga teskari matritsani toping.

4. Tenglamalar tizimini Gauss usulida yeching:

$$\begin{cases} x + y + 2z = -1 \\ 2x - y + 2z = -4. \\ 4x + y + 4z = -2 \end{cases}$$

5. Tenglamalar tizimini matritsalar usulida yeching:

$$\begin{cases} 3x + 2y - z = 4 \\ 6x + 2y - 3z = 5. \\ 9x + 4y - 4z = 9 \end{cases}.$$

## 28-variant

1. Determinantni hisoblang: 
$$\begin{vmatrix} 1 & 1 & 2 & 3 \\ 1 & 0 & 0 & 3 \\ 6 & 3 & 1 & -3 \\ 3 & 3 & 1 & -2 \end{vmatrix}.$$

2. Agar  $\begin{pmatrix} 2 & 1 & 0 \\ -15 & -3 & -1 \\ 2 & -3 & 1 \end{pmatrix} \cdot X = \begin{pmatrix} 2 & 1 & 0 \\ 1 & -1 & 1 \\ -10 & -2 & -1 \end{pmatrix}$  bo'lsa, X matritsani toping.

3.  $\begin{pmatrix} 4 & 3 & 5 \\ 3 & 1 & 1 \\ 4 & 4 & 7 \end{pmatrix}$  matritsaga teskari matritsani toping.

4. Tenglamalar tizimini matritsalar usulida yeching

$$\begin{cases} 3x + 2y + z = 5 \\ 2x + 3y + z = 1 \\ 2x + y + 3z = 11 \end{cases}.$$

5. Tenglamalar tizimini Gauss usulida yeching:

$$\begin{cases} 2x + 3y + 2z = 8 \\ 5x - 8y + 2z = 17 \\ 7x - 5y + 4z = 25 \end{cases}.$$



## 29-variant

1. Determinantni hisoblang:  $\begin{vmatrix} 2 & 3 & 4 & 5 \\ 1 & 1 & 1 & 1 \\ 1 & 2 & 3 & 1 \\ 4 & 6 & 5 & 1 \end{vmatrix}$ .

2. Agar  $X \cdot \begin{pmatrix} 3 & -2 & 4 \\ 7 & 2 & 3 \\ 10 & -1 & 8 \end{pmatrix} = \begin{pmatrix} 1 & 2 & 3 \\ 1 & 1 & -1 \\ 1 & 2 & 2 \end{pmatrix}$  bo'lsa, X matritsani toping.

3.  $\begin{pmatrix} 5 & 2 & 5 \\ 3 & 5 & -3 \\ -2 & -4 & 3 \end{pmatrix}$  matritsaga teskari matritsani toping.

4. Tenglamalar tizimini Gauss usulida yeching:

$$\begin{cases} x + 2y + 4z = 31 \\ 5x + y + 2z = 29 \\ 3x - y + z = 10 \end{cases}$$

5. Tenglamalar tizimini matritsalar usulida yeching:

$$\begin{cases} 2x + 5y - 3z = 15 \\ x + 2y + 2z = 7 \\ x + 3y - 5z = 8 \end{cases} .$$

### 30-variant

1. Determinantni hisoblang:  $\begin{vmatrix} 1 & 2 & 3 & 4 \\ 2 & 3 & 4 & 1 \\ 3 & 4 & 1 & 2 \\ 4 & 1 & 2 & 3 \end{vmatrix}$ .

2. Agar  $\begin{pmatrix} 1 & 2 & -3 \\ 3 & 2 & -4 \\ 2 & -1 & 0 \end{pmatrix} \cdot X = \begin{pmatrix} 1 & -3 & 0 \\ 10 & 2 & 7 \\ 10 & 7 & 8 \end{pmatrix}$  bo'lsa, X matritsani toping.

3.  $\begin{pmatrix} 3 & 1 & 3 \\ 5 & -2 & 2 \\ 2 & 2 & 3 \end{pmatrix}$  matritsaga teskari matritsani toping.

4. Tenglamalar tizimini matritsalar usulida yeching:

$$\begin{cases} 3x - y + z = 8 \\ x + 4y - 2z = 0 \\ 5x + 5y - 3z = 9 \end{cases}$$

5. Tenglamalar tizimini Gauss usulida yeching:

$$\begin{cases} 4x + 2y + 3z = 10 \\ 2x + 3y - 2z = 7 \\ 2x - y + 5z = 3 \end{cases}$$

## II. Vektorlar algebrasi

**2.1. Vektor tushunchasi. Vektorning uzunligi.** O'zlarining son qiymati va yo'nalishi bilan aniqlanadigan miqdorlar vektorlar deb ataladi.

$M_1(x_1, y_1, z_1)$  va  $M_2(x_2, y_2, z_2)$  nuqtalar mos ravishda

$\vec{a}$  vektorning boshi va oxiri bo'lsin. U holda  $\vec{a}$  vektorning koordinatalari quyidagicha aniqlanadi.

$$\vec{a} = \overline{M_1M_2} = (x_2 - x_1, y_2 - y_1, z_2 - z_1)$$

$\vec{a}$  vektorning uzunligiga teng bo'lgan son uning moduli deyiladi va quyidagicha aniqlanadi.

$$|\vec{a}| = \sqrt{(x_2 - x_1)^2 + (y_2 - y_1)^2 + (z_2 - z_1)^2}$$

Agar  $\vec{a}$  vektor koordinata o'qlari bilan mos ravishda  $\alpha, \beta$  va  $\gamma$  burchaklar hosil qilsa, u holda  $\cos \alpha, \cos \beta$  va  $\cos \gamma$ ,  $\vec{a}$  vektorning yo'naltiruvchi kosinuslari deyiladi va quyidagicha aniqlanadi:

$$\cos \alpha = \frac{X}{|\vec{a}|}; \quad \cos \beta = \frac{Y}{|\vec{a}|}; \quad \cos \gamma = \frac{Z}{|\vec{a}|}$$

Bu yerda:  $X = x_2 - x_1, Y = y_2 - y_1, Z = z_2 - z_1$

### Vektorning o'qqa proyeksiyasi

$\vec{a}$  vektorning U o'qqa proyeksiyasi, uning moduli va U o'q bilan tashkil qilgan burchagi  $\varphi$  orqali quyidagicha aniqlanadi.  $np_U \vec{a} = |\vec{a}| \cos \varphi$

Ixtiyoriy  $\vec{a}$  vektorning berilgan koordinatalar sistemasiga proyeksiyasini X, Y, Z orqali belgilaylik. U holda  $\vec{a} = X, Y, Z$  va

$|\vec{a}| = \sqrt{X^2 + Y^2 + Z^2}$  bo'ladi.

**1-misol.**  $\vec{a} = (6; 3; -2)$  vektorning modulini toping.

**Yechish.** Modulni topish formulasiga asosan

$$\bar{a} = \sqrt{6^2 + 3^2 + (-2)^2} = \sqrt{36 + 9 + 4} = \sqrt{49} = 7$$

**2-misol.** A(3;-1;2) va B(-1;2;1) nuqtalar berilgan.  $\overline{AB}$  vektorning koordinatalarini toping.

**Yechish:**  $\overline{AB}$  vektorning koordinatalarini topish uchun mos ravishda B nuqtaning koordinatalaridan A nuqtaning koordinatalarini ayiramiz.

$$\overline{AB} = (-1-3; 2-(-1); 1-2) = (-4; 3; -1)$$

**3-misol.**  $\bar{a} = (12; -15; -16)$  vektorning yo'naltiruvchi kosinuslarini aniqlang.

$$\text{Yechish. } \bar{a} = \sqrt{(12^2 + (-15)^2 + (-16)^2)} = \sqrt{144 + 225 + 256} = 25$$

Endi  $x=12$ ;  $y=-15$ ;  $z=-16$  ekanligini e'tiborga olib yo'naltiruvchi kosinuslarni aniqlaymiz.

$$\cos \alpha = \frac{12}{25}; \cos \beta = -\frac{15}{25} = -\frac{3}{5}; \cos \gamma = -\frac{16}{25}$$

## 2.2. Vektorlar ustida amallar

**Vektorlarni qo'shish va ayirish:** Agar  $\bar{a}$  va  $\bar{b}$  vektorlar koordinatalari berilgan bo'lsa, ya'ni  $\bar{a} = (x_1, y_1, z_1)$  va  $\bar{b} = (x_2, y_2, z_2)$  u holda

$$\bar{a} + \bar{b} = (x_1 + x_2; y_1 + y_2; z_1 + z_2)$$

$$\bar{a} - \bar{b} = (x_1 - x_2; y_1 - y_2; z_1 - z_2)$$

**Vektorlarni songa ko'paytirish.**

Agar  $\bar{a} = (x_1, y_1, z_1)$  bo'lsa, u holda har qanday  $\alpha$  son uchun quyidagi formula o'rinli  $\alpha \bar{a} = (\alpha x_1, \alpha y_1, \alpha z_1)$ .

**Vektorlarning kolleniarlik sharti.**

Bir to'g'ri chiziqda yoki parallel to'g'ri chiziqlarda yotuvchi vektorlar kolleniar vektorlar deb ataladi.

$\bar{a} = (x_1, y_1, z_1)$  va  $\bar{b} = (x_2, y_2, z_2)$  vektorlarning kolleniarlik sharti quyidagicha bo'ladi:

$$\frac{x_2}{x_1} = \frac{y_2}{y_1} = \frac{z_2}{z_1}$$

### Vektorlarni bazis koordinatalari bo'yicha yoyish

$\bar{i}$ ,  $\bar{j}$ ,  $\bar{k}$  uchlik vektorlar bazis koordinatalari deyiladi, agar quyidagi uchta shart bajarilsa,

1)  $\bar{i}$  vektor OX o'qida,  $\bar{j}$  vektor OY o'qida,  $\bar{k}$  vektor OZ o'qida yotadi.

2) har bir  $\bar{i}$ ,  $\bar{j}$ ,  $\bar{k}$  vektorlar o'z o'qlarida musbat tomonga yo'nalgan bo'ladi.

3)  $\bar{i}$ ,  $\bar{j}$ ,  $\bar{k}$  vektorlar, birlik vektorlar, ya'ni  $|\bar{i}| = 1$ ;  $|\bar{j}| = 1$ ,  $|\bar{k}| = 1$

$\bar{a}$  vektor qanday bo'lishidan qat'iy nazar uni har doim  $\bar{i}$ ,  $\bar{j}$ ,  $\bar{k}$  bazislar bo'yicha yoyish mumkin, ya'ni  $\bar{a} = x_1\bar{i} + y_1\bar{j} + z_1\bar{k}$

Bu erda  $x_1, y_1, z_1$  -  $\bar{a}$  vektorning koordinatalari.

**4-misol.**  $\bar{a} = \bar{i} + 3\bar{j} - \bar{k}$  va  $\bar{b} = 2\bar{i} + \bar{j} + 4\bar{k}$  vektorlar berilgan  $2\bar{a} + 3\bar{b}$  vektorlar yig'indisini toping.

**Yechish.**  $\bar{a}$  koordinatalari ,  $\bar{a} = (1; 3; -2)$  xuddi shuningdek  $\bar{b} = (2; 1; 4)$ . Endi  $2\bar{a}$  va  $3\bar{b}$  vektorlarni aniqlaymiz.

$$2\bar{a} = (2; 6; -2); \quad 3\bar{b} = (6; 3; 12)$$

Demak,  $2\bar{a} + 3\bar{b} = (2+6; 6+3; -2+12) = (8; 9; 10)$ .

**5-misol.**  $\bar{a} = (4, 2, 0)$  vektorni  $\bar{p} = (1, -1, 2)$ ,  $\bar{q} = (2, 2, -1)$  va  $\bar{r} = (3, 7, -7)$  vektorlar bo'yicha yoying.

**Yechish.**  $\bar{a}$  vektorni  $\bar{p}, \bar{q}$  va  $\bar{r}$  vektorlar bo'yicha yoyish,  $\bar{a}$  vektorni chiziqli kombinatsiya ko'rinishida ifodalash demakdir.

$$\bar{a} = c_1\bar{p} + c_2\bar{q} + c_3\bar{r} ,$$

bu yerda  $c_1, c_2$  va  $c_3$  - topilishi kerak bo'lgan sonlar.

Koordinata ko'rinishida bu quyidagicha bo'ladi.

$$4i + 2j + 0 \cdot k = (c_1 + 2c_2 + 3c_3)i + (-c_1 + 2c_2 + 7c_3)j + (2c_1 - c_2 - 7c_3)k$$

Natijada quyidagi tenglamalar tizimini hosil qilamiz.

$$\begin{cases} c_1 + 2c_2 + 3c_3 = 4 \\ -c_1 + 2c_2 + 7c_3 = 2 \\ 2c_1 - c_2 - 7c_3 = 0 \end{cases}$$

Buni yechib,  $c_1 = 3; c_2 = -1; c_3 = 1$  ekanligini topamiz. Demak,  $\bar{a} = 3\bar{p} - \bar{q} + \bar{r}$ .

**6-misol.**  $\bar{a} = (6; -2; -3)$  vektorning birlik vektorini toping.

**Yechish.** Birlik vektorni quyidagicha yozish mumkin.

$$\bar{a}^0 = \bar{i} \cos \alpha + \bar{j} \cos \beta + \bar{k} \cos \gamma$$

$\cos \alpha, \cos \beta, \cos \gamma$  larni topamiz

$$\cos \alpha = \frac{\bar{a}_x}{|\bar{a}|}; \quad \cos \beta = \frac{\bar{a}_y}{|\bar{a}|}; \quad \cos \gamma = \frac{\bar{a}_z}{|\bar{a}|}$$

$$|\bar{a}| = \sqrt{(6^2 + (-2)^2 + (-3)^2)} = \sqrt{49} = 7$$

$$\text{Bundan } \cos \alpha = 6/7; \quad \cos \beta = -2/7; \quad \cos \gamma = -3/7.$$

$$\text{Demak, } \bar{a}^0 = \left(\frac{6}{7}; -\frac{2}{7}; -\frac{3}{7}\right).$$

### 2.3. Ikki vektorning skalyar ko'paytmasi

$\bar{a}$  va  $\bar{b}$  vektorlarning skalyar ko'paytmasi deb, bu vektorlar uzunliklari ko'paytmasi bilan ular orasidagi burchak kosinusining ko'paytmasiga aytiladi va  $(\bar{a}, \bar{b})$  shaklda belgilanadi.

$$(\bar{a}, \bar{b}) = |\bar{a}| \cdot |\bar{b}| \cos \varphi$$

$\bar{a}$  va  $\bar{b}$  vektorlarning skalyar ko'paytmasini quyidagicha ham yozish mumkin.

$$(\bar{a}, \bar{b}) = |\bar{a}| \cdot np_{\bar{a}} \bar{b} \quad \text{yoki} \quad (\bar{a}, \bar{b}) = |\bar{a}| \cdot np_{\bar{b}} \bar{a}$$

Agar  $\vec{a}$  va  $\vec{b}$  vektorlar koordinatalari bilan berilgan bo'lsa, ya'ni  $\vec{a} = (x_1, y_1, z_1)$  va  $\vec{b} = (x_2, y_2, z_2)$ , u holda ularning skalyar ko'paytmasi quyidagi formula bilan hisoblanadi.  $(\vec{a}, \vec{b}) = (x_1 \cdot x_2; y_1 \cdot y_2; z_1 \cdot z_2)$

Bundan vektorlarning **perpendikulyarlik** sharti kelib chiqadi, ya'ni  $x_1 \cdot x_2 + y_1 \cdot y_2 + z_1 \cdot z_2 = 0$

Koordinatalari bilan berilgan  $\vec{a} = (x_1, y_1, z_1)$  va  $\vec{b} = (x_2, y_2, z_2)$  vektorlar orasidagi  $\varphi$  burchak quyidagicha aniqlanadi:

$$\cos \varphi = \frac{(\vec{a}, \vec{b})}{|\vec{a}| \cdot |\vec{b}|}$$

yoki koordinatalar shaklida

$$\cos \varphi = \frac{x_1 \cdot x_2 + y_1 \cdot y_2 + z_1 \cdot z_2}{\sqrt{x_1^2 + y_1^2 + z_1^2} \cdot \sqrt{x_2^2 + y_2^2 + z_2^2}}$$

**7-misol.** Agar  $\vec{p} = \vec{a} - \vec{b}; \vec{q} = \vec{a} + 2\vec{b}; |\vec{a}| = 1; |\vec{b}| = 3; (\vec{a}, \vec{b}) = \frac{2}{3}\pi$  bo'lsa,  $|\vec{p} + 2\vec{q}|$  vektorning uzunligini toping.

**Yechish.** Vektorning moduli ta'rifiga ko'ra:  $|\vec{p} + 2\vec{q}| = \sqrt{(\vec{p} + 2\vec{q})^2} = \sqrt{(\vec{a} - \vec{b} + 2\vec{a} + 4\vec{b})^2} = \sqrt{9(\vec{a}^2 + 2\vec{a}\vec{b} + \vec{b}^2)}$  ni hisoblaymiz.

$$\begin{aligned} (\vec{p} + 2\vec{q})^2 &= (\vec{a} - \vec{b} + 2\vec{a} + 4\vec{b})^2 = \\ 9(\vec{a}^2 + 2\vec{a}\vec{b} + \vec{b}^2) &= 9(1 + 2 \cdot 3 \cos \frac{2}{3}\pi + 9) = 63 \end{aligned}$$

Bundan  $|\vec{p} + 2\vec{q}| = \sqrt{63} = 3\sqrt{7}$ .

**8-misol.**  $\vec{x} = (2, 1, -2)$  vektorga kollinear va  $(\vec{x}, \vec{a}) = 27$  shartni qanoatlantiruvchi  $\vec{a}$  vektorni toping.

**Yechish.**

Kollinearlik shartidan foydalanib  $\vec{a}$  vektorni quyidagicha yozish mumkin.  $\vec{a} = \lambda \vec{x}$ , bu erda  $\lambda$  - noma'lum ko'paytuvchi.  $\vec{a}$  vektorni topish uchun quyidagi shartdan foydalanamiz:  $(\vec{x}\vec{a}) = \lambda \vec{a}^2 = \lambda(4+1+4) = 9\lambda = 27$ .

Bundan  $\lambda = 3$  va  $\vec{x} = 3\vec{a} = (6, 3, -6)$ .

**9-misol.** Agar  $\vec{a} = (1, -3, 4)$ ,  $\vec{b} = (3, -4, 2)$  va  $\vec{c} = (-1, 1, 4)$  bo'lsa,  $\vec{a}$  vektorning  $\vec{b} + \vec{c}$  vektorga proeksiyasini hisoblang.

**Yechish.** Quyidagi formuladan foydalanamiz:

$$\text{Pr}_{\vec{b}+\vec{c}} \vec{a} = \frac{\vec{a}(\vec{b} + \vec{c})}{|\vec{b} + \vec{c}|}$$

$\vec{a}(\vec{b} + \vec{c})$  va  $|\vec{b} + \vec{c}|$  ifodalarni hisoblaymiz.

$$\vec{a}(\vec{b} + \vec{c}) = 1(3-1) - 3(-4+1) + 4(2+4) = 35$$

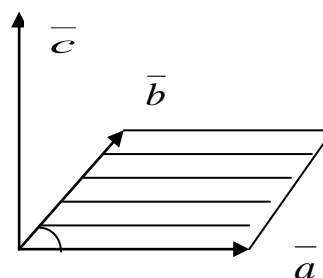
$$|\vec{b} + \vec{c}| = \sqrt{(3-1)^2 + (-4+1)^2 + (2+4)^2} = 7$$

Bundan  $\text{Pr}_{\vec{b}+\vec{c}} \vec{a} = 5$

## 2.4. Ikki vektorning vektor ko'paytmasi

Ikki  $\vec{a}$  va  $\vec{b}$  vektorning vektor ko'paytmasi deb shunday  $\vec{c}$  vektorga aytiladiki, bu vektor  $\vec{a}$  va  $\vec{b}$  vektorlarga perpendikulyar bo'lib, uning moduli  $\vec{a}$  va  $\vec{b}$  vektorlardan yasalgan parallelogramm yuziga teng, yo'nalishi esa  $\vec{c}$  uchidan qaraganda

$\vec{c}$  vektor atrofida  $\vec{a}$  vektordan  $\vec{b}$  vektorga eng kichik burchak bilan aylanishi soat strelkasiga teskari bo'lishi kerak.



$\vec{a}$  vektor bilan va  $\vec{b}$  vektorning vektor ko'paytmasi

$\vec{a} \times \vec{b}$  yoki  $[\vec{a}, \vec{b}]$  shaklida yoziladi va quyidagicha belgilanadi.



$\vec{c} = [\vec{a}, \vec{b}]$ . Bu vektor uzunligi  $|\vec{a}|$  va  $|\vec{b}|$  vektorlardan yasalgan parallelogrammning yuziga teng; ya'ni

$$|\vec{c}| = |[\vec{a}, \vec{b}]| = |\vec{a}| \cdot |\vec{b}| \cdot \sin(\widehat{\vec{a}, \vec{b}})$$

### Vektor ko'paytmaning xossalari:

1. Vektor ko'paytmadagi ko'paytuvchilar o'rnini almashtirsa, vektor ko'paytma (-1) ga ko'payadi.

$$[\vec{a}, \vec{b}] = -[\vec{b}, \vec{a}]$$

2. Skalyar ko'paytuvchiga nisbatan vektor ko'paytma gruppalash qonuniga bo'ysunadi, ya'ni :

$$[\lambda a, b] = [\vec{a}, \lambda \vec{b}] = \lambda [\vec{a}, \vec{b}]$$

### Proeksiyalari bilan berilgan vektorlarning vektor ko'paytmasi

$\vec{a}(x_1, y_1, z_1)$  va  $\vec{b}(x_2, y_2, z_2)$  vektorlar berilgan bo'lsin. Bu vektorlarning vektor ko'paytmasi quyidagicha bo'ladi.

$$[\vec{a}, \vec{b}] = \begin{vmatrix} i & j & k \\ x_1 & y_1 & z_1 \\ x_2 & y_2 & z_2 \end{vmatrix}$$

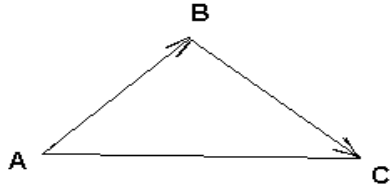
Bu tenglamadan  $[\vec{a}, \vec{b}]$  vektor ko'paytmani tasvirlovchi vektorlarning koordinata o'qlaridagi proeksiyalari

$$y_1 z_2 - z_1 y_2; z_1 x_2 - x_1 z_2; x_1 y_2 - y_1 x_2;$$

bo'lishini ko'ramiz.

Agar  $\vec{a}$  va  $\vec{b}$  vektorlar kollienar (bir-biriga parallel) bo'lsa, ularning mos proyeksiyalari proporsional bo'ladi, ya'ni  $\frac{x_1}{x_2} = \frac{y_1}{y_2} = \frac{z_1}{z_2}$ .

**10-misol.** Agar A(1,1,1), B(2,0,1) va C (1,2,-1) bo'lsa, ABC uchburchakning yuzini hisoblang (1.rasm).



**Yechish.** Vektor ko‘paytmaning moduli son jihatdan, tomonlari shu vektorlardan qurilgan uchburchak yuzining ikkilanganiga teng:

$$S = \frac{1}{2} [\overline{ab}]$$

$\overline{a} = \overline{AB} = (-1, 1, 0)$  va  $\overline{b} = \overline{AC} = (0, 1, -2)$  vektorlarni kiritamiz.

Bu vektorlarning vektor ko‘paytmasi.

$$[\overline{ab}] = \begin{vmatrix} \overline{i} & \overline{j} & \overline{k} \\ 1 & -1 & 0 \\ 0 & 1 & -2 \end{vmatrix} = 2\overline{i} + 2\overline{j} + \overline{k}$$

$$[\overline{ab}] = \sqrt{4+4+1} = 3$$

Bundan  $S=1,5$  kv.bir.

**11-misol.** Agar  $|\overline{x}| = \sqrt{6}$  bo‘lsa,  $\overline{a} = (1, 1, 1)$  va  $\overline{b} = (2, 0, 1)$  vektorlarga perpendikulyar va OX o‘qi bilan o‘tmas burchak hosil qiluvchi  $\overline{x}$  vektorni va  $\overline{c} = [\overline{ab}]$  vektorni toping.

**Yechish.**  $\overline{c}$  vektorni kiritamiz

$$\overline{c} = \begin{vmatrix} \overline{i} & \overline{j} & \overline{k} \\ 1 & 1 & 1 \\ 2 & 0 & 1 \end{vmatrix} = \overline{i} + \overline{j} - 2\overline{k}$$

$\overline{x}$  vektor  $\overline{a}$  i  $\overline{b}$  vektorlarga perpendikulyar bo‘lsa, u holda  $\overline{c}$  vektorga kollinear bo‘ladi. Bundan kelib chiqadiki,  $\overline{x} = \lambda\overline{c} = (\lambda, \lambda, -2\lambda)$

$$|\overline{x}| = \sqrt{\lambda^2 + \lambda^2 + 4\lambda^2} = \sqrt{6}\lambda = \sqrt{6} \rightarrow \sqrt{\lambda} = \pm 1$$

$\bar{x}$  vektor  $OX$  o'q bilan o'tmas burchak tashkil qiladi, shuning uchun uning  $OX$  o'qdagi proeksiyasi manfiy bo'lishi kerak. Bundan  $\lambda = -1$  va  $\bar{x} = -c = (-1, -1, 2)$

**12-misol.**  $V(5, 1, 0)$  nuqtaga qo'yilgan  $\bar{F} = (1, -1, 1)$  kuch vektorining yo'naltiruvchi kosinuslarini va shu kuchning  $A(3, 2, -1)$  nuqtaga nisbatan momentini toping.

**Yechish.** kuch vektorining yo'naltiruvchi kosinuslarini topamiz.

$$\cos \alpha = \frac{F_x}{|\bar{F}|} = \frac{1}{\sqrt{3}} \quad \cos \beta = \frac{F_y}{|\bar{F}|} = -\frac{1}{\sqrt{3}} \quad \cos \gamma = \frac{F_z}{|\bar{F}|} = \frac{1}{\sqrt{3}}$$

Kuch momenti  $\overline{AB} = (2, -1, 1)$  va  $\bar{F}$  vektorlarning vektor ko'paytmasi kabi aniqlanadi.

$$\bar{m} = [\overline{ABF}] = \begin{vmatrix} \bar{i} & \bar{j} & \bar{k} \\ 2 & -1 & 1 \\ 1 & -1 & 1 \end{vmatrix} = -\bar{j} - \bar{k}$$

ya'ni  $\bar{m} = (0, -1, -1)$ .

## 2.5. Uch vektorning aralash ko'paytmasi

Uchta  $\bar{a}, \bar{b}, \bar{c}$  vektorlar berilgan bo'lsin.  $[\bar{a} \cdot \bar{b}]$  vektor ko'paytma bilan  $\bar{c}$  vektorni skalyar ko'paytirish aralash ko'paytma deyiladi va  $[\bar{a} \cdot \bar{b}] \bar{c}$  yoki  $\bar{a} \times \bar{b} \times \bar{c}$  yoki  $(\bar{a} \times \bar{b}) \times \bar{c}$  ko'rinishda yoziladi.

Aralash ko'paytmaning xossalari.

1. Ko'paytmada ikki qo'shni vektor o'rnini almashtirilsa, aralash ko'paytma ishorasini almashtiradi.

$$[\bar{a} \cdot \bar{b}] \cdot \bar{c} = -[\bar{c} \cdot \bar{b}] \cdot \bar{a}$$

$$[\bar{a} \cdot \bar{b}] \cdot \bar{c} = -[\bar{a} \cdot \bar{c}] \cdot \bar{b} \quad \text{va h.k.}$$

2. Agar  $\vec{a}, \vec{b}, \vec{c}$  vektorlardan istalgan ikkitasi bir-biriga teng yoki parallel (kollienar) bo'lsa, ularning aralash ko'paytmasi nolga teng, xususiyl holda

$$[\vec{a} \cdot \vec{a}] \cdot \vec{c} = [\vec{a} \cdot \vec{b}] \cdot \vec{a} = [\vec{b} \cdot \vec{a}] \cdot \vec{a} = 0$$

3. Agar  $\vec{a}, \vec{b}, \vec{c}$  vektorlar komplanar (bir tekislikda yotuvchi) vektorlar bo'lsa, ularning aralash ko'paytmasi nolga teng.

### Proyeksiyalari bilan berilgan vektorlarning aralash ko'paytmasi.

$\vec{a}(x_1, y_1, z_1)$ ,  $\vec{b}(x_2, y_2, z_2)$  va  $\vec{c}(x_3, y_3, z_3)$  vektorlar berilgan bo'lsin. Bu vektorlarning vektor ko'paytmasi quyidagicha bo'ladi.

$$[\vec{a} \cdot \vec{b}] \cdot \vec{c} = \begin{vmatrix} x_1 & x_2 & x_3 \\ y_1 & y_2 & y_3 \\ z_1 & z_2 & z_3 \end{vmatrix}$$

$\vec{a}, \vec{b}, \vec{c}$  vektorlar komplanar bo'lishining zaruriy va etarli sharti.

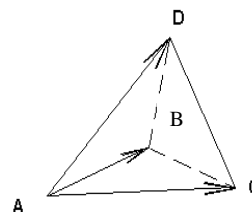
$$\begin{vmatrix} x_1 & x_2 & x_3 \\ y_1 & y_2 & y_3 \\ z_1 & z_2 & z_3 \end{vmatrix} = 0$$

Tenglik bajarilishi bilan ifodalanadi.

**13-misol.** Agar  $A(2,3,1)$ ,  $V(4,1,-2)$ ,  $C(6,3,7)$  va  $D(-5,-4,8)$  nuqtalar piramidaning

uchlari bo'lsa, (2-rasm) D uchidan ABC yoqqa tushirilgan balandlikning uzunligini toping.

Yechish:  $\vec{AB} = (2, -2, -3)$ ;  $\vec{AC} = (4, 0, 6)$ ; va  $\vec{AD} = (-7, -7, 7)$



2-rasm

Vektorlarni topamiz.  $\overline{AB}, \overline{AC}$  va  $\overline{AD}$  vektorlarga qurilgan piramidaning hajmi, shu vektorlar aralash ko'paytmasi modulining oltidan bir qismiga teng.

$$V = \frac{1}{6} |\overline{AB} \overline{AC} \overline{AD}| \text{ va } V = \frac{1}{3} S_{ABC} \cdot h$$

Bu erda  $S_{ABC} = \frac{1}{2} |\overline{AB} \cdot \overline{AC}|$  bundan  $h = \frac{|\overline{AB} \cdot \overline{AC} \cdot \overline{AD}|}{|\overline{AB} \cdot \overline{AC}|}$

Quyidagilarni hisoblaymiz

$$\overline{AB} \cdot \overline{AC} \cdot \overline{AD} = \begin{vmatrix} -7 & -7 & 7 \\ 2 & -2 & -3 \\ 4 & 0 & 6 \end{vmatrix} = 308$$

$$[\overline{AB} \cdot \overline{AC}] = \begin{vmatrix} \bar{i} & \bar{j} & \bar{k} \\ 2 & -2 & 3 \\ 4 & 0 & 6 \end{vmatrix} = -12\bar{i} + 24\bar{j} + 8\bar{k}$$

$$|[\overline{AB} \cdot \overline{AC}]| = \sqrt{12^2 + 24^2 + 8^2} = 28$$

Bu erdan  $h = \frac{308}{28} = 11$

## TOPSHIRIQ VARIANTLARI

### Hisob topshiriqlarini qabul qilishda beriladigan nazariy savollar

1. Vektorning ta'rifi. Vektorlar ustida chiziqli amallar, bu amallarning xossalari.
2. Tekislikdagi vektorni berilgan ikkita vektor bo'yicha yoyish.
3. Fazodagi vektorni berilgan uchta vektor bo'yicha yoyish.
4. Vektorning o'qqa proyeksiyasi. Proyeksiyaning xossasi.
5. Vektorni birlik vektorlar bo'yicha yoyish. Vektorning koordinatalari va komponentlari.
6. Vektorlarning vektor va koordinatalar ko'rinishidagi kollinearlik va komplanarlik shartlari.
7. Nuqtaning radius vektori. Vektorlarning moduli. Ikki nuqta orasidagi masofa.
8. Kesmani berilgan nisbatda bo'lish formulasi
9. Vektorlarning skalyar ko'paytmasi va uning fizik talqini. Skalyar ko'paytmaning xossalari.
10. Vektorning vektorga proyeksiyasi. Vektorlar orasidagi burchak. Vektorlar perpendikulyarligining yetarli va zaruriy shartlari.
11. Koordinatalari bilan berilgan vektorlarning skalyar ko'paytmasi.
12. Ikki vektorning vektor ko'paytmasi va uning fizik talqini.
13. Koordinatalari bilan berilgan vektorlarning vektor ko'paytmasi.
14. Vektor ko'paytmaning geometrik qo'llanilishi.
15. Vektor ko'paytmaning xossalari.
16. Uchta vektorning koordinata ko'rinishidagi aralash ko'paytmasi.
17. Vektorlar komplanarligining zaruriy va yetarli sharti.
18. Koordinatalari bilan berilgan vektorlarning aralash ko'paytmasi.
19. Aralash ko'paytmaning xossalari.

**1-topshiriq.**  $\bar{x}$  vektorning  $\bar{p}, \bar{q}, \bar{r}$  vektorlar bo'yicha yoyilmasini

toping.

№	$\bar{x}$	$\bar{p}$	$\bar{q}$	$\bar{r}$
1.1.	(-2, 4, 7)	(0, 1, 2)	(1, 0, 1)	(-1, 2, 4)
1.2.	(6, 12, -1)	(1, 3, 0)	(2, -1, 1)	(0, -1, 2)
1.3.	(1, -4, 4)	(2, 1, -1)	(0, 3, 2)	(1, -1, 1)
1.4.	(-9, 5, 5)	(4, 1, 1)	(2, 0, -3)	(-1, 2, 1)
1.5.	(-5, -5, 5)	(-2, 0, 1)	(1, 3, -1)	(0, 4, 1)
1.6.	(13, 2, 7)	(5, 1, 0)	(2, -1, 3)	(1, 0, -1)
1.7.	(-19, -1, 7)	(0, 1, 1)	(-2, 0, 1)	(3, 1, 0)
1.8.	(3, -3, 4)	(I, 0, 2)	(0, 1, 1)	(2, -1, 4)
1.9.	(2, 2, -1)	(3, II, 0)	(-1, 2, 1)	(-1, 0, 2)
1.10.	(-1, 7, -4)	(-1, 2, 1)	(2, 0, 3)	(1, 1, -1)
1.11.	(6, 5, -14)	(1, 1, 4)	(0, -3, 2)	(2, 1, -1)
1.12.	(6, -1, 7)	(1, -2, 0)	(-1, 1, 3)	(1, 0, 4)
1.13.	(5, -15, 0)	(1, 0, 5)	(-1, 3, 2)	(0, -1, 1)
1.14.	(2, -1, 11)	(1, 1, 0)	(0, 1, -2)	(1, 0, 8)
1.15.	(11, 5, -3)	(1, 0, 2)	(-1, 0, 1)	(2, 5, -3)
1.16.	(8, 0, 5)	(2, 0, 1)	(1, 1, 0)	(4, 1, 2)
1.17.	(3, 1, 8)	(0, 1, 3)	(1, 2, -1)	(2, 0, -1)
1.18.	(8, 1, 12)	(1, 2, -1)	(3, 0, 2)	(-1, 1, 1)
1.19.	(-9, -8, -3)	(1, 4, 1)	(-3, 2, 1)	(1, -1, 2)
1.20.	(-5, 9, -13)	(0, 1, -2)	(3, -1, 1)	(4, 1, 0)
1.21.	(-15, 5, 6)	(0, 5, 1)	(3, 2, -1)	(-1, 1, 0)
1.22.	(8, 9, 4)	(1, 0, 1)	(0, -2, 1)	(1, 3, 0)
1.23.	(23, -14, -30)	(2, 1, 0)	(1, -1, 0)	(-3, 2, 5)
1.24.	(3, 1, 3)	(2, 1, 0)	(1, 0, 1)	(4, 2, 1)
1.25.	(-1, 7, 0)	(0, 3, 1)	(1, -1, 2)	(2, -1, 0)
1.26.	(11, -1, 4)	(1, -1, 2)	(3, 2, 0)	(-1, 1, 0)
1.27.	(-13, 2, 18)	(1, 1, 4)	(-3, 0, 2)	(1, 2, -1)
1.28.	(0, -8, 9)	(0, -2, 1)	(3, 1, -1)	(4, 0, 1)
1.29.	(8, -7, -13)	(0, 1, 5)	(3, -1, 2)	(-1, 0, 1)
1.30.	(2, 7, 5)	(1, 0, 1)	(1, -2, 0)	(0, 3, 1)

**2-topshiriq.**  $\bar{a}$  va  $\bar{b}$  vektorlarga qurilgan  $\bar{c}_1$  va  $\bar{c}_2$  vektorlarning o'zaro

kollinearligini tekshiring.

№	$\bar{a}$	$\bar{b}$	$\bar{c}_1$	$\bar{c}_2$
2.1.	(1, -2, 3)	(3, 0, -1)	$2\bar{a} + 4\bar{b}$	$3\bar{b} - \bar{a}$
2.2.	(1, 0, -1)	(-2, 3, 5)	$\bar{a} + 2\bar{b}$	$3\bar{a} - \bar{b}$
2.3.	(-2, 4, 1)	(1, -2, 7)	$5\bar{a} + 3\bar{b}$	$2\bar{a} - \bar{b}$
2.4.	(1, 2, -3)	(2, -1, -1)	$4\bar{a} + 3\bar{b}$	$8\bar{a} - \bar{b}$
2.5.	(3, 5, 4)	(5, 9, 7)	$2\bar{a} + \bar{b}$	$3\bar{a} - 2\bar{b}$
2.6.	(1, 4, -2)	(1, 1, -1)	$\bar{a} + \bar{b}$	$4\bar{a} + 2\bar{b}$
2.7.	(1, -2, 5)	(3, -1, 0)	$4\bar{a} - 2\bar{b}$	$\bar{b} - 2\bar{a}$
2.8.	(3, 4, -1)	(2, -1, 1)	$6\bar{a} - 3\bar{b}$	$\bar{b} - 2\bar{a}$
2.9.	(2, -3, -2)	(1, 0, 5)	$3\bar{a} + 9\bar{b}$	$\bar{a} - 3\bar{b}$
2.10.	(-1, 4, 2)	(3, -2, 6)	$2\bar{a} - \bar{b}$	$3\bar{b} - 6\bar{a}$
2.11.	(5, 0, -1)	(7, 2, 3)	$2\bar{a} - \bar{b}$	$3\bar{b} - 6\bar{a}$
2.12.	(0, 3, -2)	(1, -2, 1)	$5\bar{a} - 2\bar{b}$	$3\bar{a} + 5\bar{b}$
2.13.	(-2, 7, -1)	(-3, 5, 2)	$2\bar{a} + 3\bar{b}$	$3\bar{a} + 2\bar{b}$
2.14.	(3, 7, 0)	(1, -3, 4)	$4\bar{a} - 2\bar{b}$	$\bar{b} - 2\bar{a}$
2.15.	(-1, 2, -1)	(2, -7, 1)	$6\bar{a} - 2\bar{b}$	$\bar{b} - 3\bar{a}$
2.16.	(7, 9, -2)	(5, 4, 3)	$4\bar{a} - \bar{b}$	$4\bar{b} - \bar{a}$
2.17.	(5, 0, -2)	(6, 4, 3)	$5\bar{a} - 3\bar{b}$	$6\bar{b} - 10\bar{a}$
2.18.	(8, 3, -1)	(4, 1, 3)	$2\bar{a} - \bar{b}$	$2\bar{b} - 4\bar{a}$
2.19.	(3, -1, 6)	(5, 7, 10)	$4\bar{a} - 2\bar{b}$	$\bar{a} - 2\bar{b}$
2.20.	(1, -2, 4)	(7, 3, 5)	$6\bar{a} - 3\bar{b}$	$\bar{b} - 2\bar{a}$
2.21.	(3, 7, 0)	(4, 6, -1)	$3\bar{a} + 2\bar{b}$	$5\bar{a} - 7\bar{b}$
2.22.	(2, -1, 4)	(3, -7, -6)	$2\bar{a} - 3\bar{b}$	$3\bar{a} - 2\bar{b}$
2.23.	(5, -1, -2)	(6, 0, 7)	$3\bar{a} - 2\bar{b}$	$4\bar{b} - 6\bar{a}$
2.24.	(-9, 5, 3)	(7, 1, -2)	$2\bar{a} - \bar{b}$	$3\bar{a} + 5\bar{b}$
2.25.	(4, 2, 9)	(0, -1, 3)	$4\bar{b} - 3\bar{a}$	$4\bar{a} - 3\bar{b}$
2.26.	(2, -1, 6)	(-1, 3, 8)	$5\bar{a} - 2\bar{b}$	$2\bar{a} - 5\bar{b}$
2.27.	(5, 0, 8)	(-3, 1, 7)	$3\bar{a} - 4\bar{b}$	$12\bar{b} - 9\bar{a}$
2.28.	(-1, 3, 4)	(2, -1, 0)	$6\bar{a} - 2\bar{b}$	$\bar{b} - 3\bar{a}$
2.29.	(4, 2, -7)	(5, 0, -3)	$\bar{a} - 3\bar{b}$	$6\bar{b} - 2\bar{a}$
2.30.	(2, 0, -5)	(1, -3, 4)	$2\bar{a} - 5\bar{b}$	$5\bar{a} - 2\bar{b}$

**3-topshiriq.**  $\overline{AB}$  va  $\overline{AC}$  vektorlar orasidagi burchak kosinusini toping.



№	<i>A</i>	<i>B</i>	<i>C</i>
3.1.	(6, 5, 1)	(0, 1, 2)	(2, 1, 0)
3.2.	(5, 4, 2)	(1, 2, 3)	(3, 2, 1)
3.3.	(2, 0, 4)	(1, 1, 1)	(3, 2, 1)
3.4.	(1, 2, 3)	(2, -1, 0)	(3, 2, 1)
3.5.	(1, -1, 2)	(5, -6, 2)	(2, 3, -1)
3.6.	(3, -3, 1)	(-3, -2, 0)	(5, 0, 2)
3.7.	(4, 2, 1)	(0, 4, 5)	(1, 2, 7)
3.8.	(1, 0, 2)	(2, 4, 3)	(1, 7, 1)
3.9.	(5, -1, 3)	(2, 0, 1)	(3, 1, -1)
3.10.	(0, 8, 1)	(2, 1, 1)	(-1, 4, 5)
3.11.	(1, 0, 4)	(0, 2, 3)	(-1, 1, 0)
3.12.	(2, 3, 4)	(3, 4, 5)	(-4, 5, 6)
3.13.	(1, -2, 3)	(0, -1, 2)	(3, -4, 5)
3.14.	(0, -3, 6)	(-12, -3, -3)	(-9, -3, -6)
3.15.	(3, 3, -1)	(5, 5, -2)	(4, 1, 1)
3.16.	(-1, 2, -3)	(3, 4, -6)	(1, 1, -1)
3.17.	(-4, -2, 0)	(-1, -2, 4)	(3, -2, 1)
3.18.	(5, 3, -1)	(5, 2, 0)	(6, 4, -1)
3.19.	(-3, -7, -6)	(0, -1, -2)	(2, 3, 0)
3.20.	(2, -4, 6)	(0, -2, 4)	(6, -8, 10)
3.21.	(0, 1, -2)	(3, 1, 2)	(4, 1, 1)
3.22.	(3, 3, -1)	(1, 5, -2)	(4, 1, 1)
3.23.	(2, 1, -1)	(6, -1, -4)	(4, 2, 1)
3.24.	(-1, -2, 1)	(-4, -2, 5)	(-8, -2, 2)
3.25.	(6, 2, -3)	(6, 3, -2)	(7, 3, -3)
3.26.	(0, 0, 4)	(-3, -6, 1)	(-5, -10, -1)
3.27.	(2, -8, -1)	(4, -6, 0)	(-2, -5, -1)
3.28.	(3, -6, 9)	(0, 3, 6)	(9, -12, 15)
3.29.	(0, 2, -4)	(8, 2, 2)	(6, 2, 4)
3.30.	(3, 3, -1)	(5, 1, -2)	(4, 1, 1)

4-topshiriq.  $\overline{F}$  kuch vektorining yo‘naltiruvchi kosinuslarini aniqlang.

A nuqtaga nisbatan V nuqtaga qo‘yilgan  $\overline{F}$  kuch momentini toping.

№	$\overline{F}$	$B$	$A$
4.1.	(3, 3, 3)	(3, -1, 5)	(4,-2,3)
4.2.	(4, 4, 4)	(4, -2, 5)	(5,-3,3)
4.3.	(8, -8, 8)	(10, -8, 1)	(9,-7,3)
4.4.	(-2, 2, -2)	(11, -9, 1)	(10,-8,3)
4.5.	(5, 5, 5)	(5, -3, 5)	(6,-4,3)
4.6.	(-3, 3, -3)	(12, -10, 1)	(11,-9,3)
4.7.	(6, 6, 6)	(6, -4, 5)	(7,-5,3)
4.8.	(-4, 4, -4)	(13, -11, 1)	(12,-10,3)
4.9.	(7, 7, 7)	(7, -5, 5)	(8,-6,3)
4.10.	(-5, 5, -5)	(14, -12, 1)	(13, -11, 3)
4.11.	(-1, -1, 1)	(8, -6, -5)	(9, -7, 3)
4.12.	(3, 3, -3)	(0, 1, 2)	(2, -1, -2)
4.13.	(-2, -2, -2)	(9, -7, 5)	(10, -8, 3)
4.14.	(4, 4, -4)	(1, 0, 2)	(3, 2, -2)
4.15.	(-3, -3, -3)	(10, -8, 5)	(11, -9, 3)
4.16.	(5, 5, -5)	(2,-1,2)	(4, -3, 2)
4.17.	(-4, -4, -4)	(11,-9,5)	(12, -10, 3)
4.18.	(6, 6, -6)	(3,-2,2)	(5, -4, -2)
4.19.	(-5, -5, -5)	(12,-10,5)	(13, -11, 3)
4.20.	(7, 7, -7)	(4,-3,2)	(6, -5, -2)
4.21.	(3, -3, 3)	(5,-3,1)	(4, -2, 3)
4.22.	(8, 8, -8)	(5,-4,2)	(7, -6, -2)
4.23.	(4, -4, 4)	(6,-4,1)	(5, -4, 3)
4.24.	(-2, -2, 2)	(6,-5,2)	(8, -7, -2)
4.25.	(5, -5, 5)	(7,-5,1)	(6, -4, 3)
4.26.	(-3, -3, 3)	(7,-6,2)	(9, -8, 2)
4.27.	(6, -6, 6)	(8,-6,1)	(7, -5, 3)
4.28.	(-4, -4, 4)	(8,-7,2)	(10, -9, -2)
4.29.	(7, -7, 7)	(9,-7,1)	(8, -6, 3)
4.30.	(-5, -5, 5)	(9,-8,2)	(11, -10, 2)

5-topshiriq.  $\bar{a}$  va  $\bar{b}$  vektorlaridan qurilgan parallelogrammning yuzasini hisoblang

№	$\bar{a}$	$\bar{b}$	$ \bar{p} $	$ \bar{q} $	$(\bar{p} \wedge \bar{q})$
5.1.	$\bar{p} + 2\bar{q}$	$3\bar{p} - \bar{q}$	1	2	$\frac{\pi}{6}$
5.2.	$3\bar{p} + \bar{q}$	$\bar{p} - 2\bar{q}$	4	1	$\frac{\pi}{4}$
5.3.	$\bar{p} - 3\bar{q}$	$\bar{p} + 2\bar{q}$	$\frac{1}{5}$	1	$\frac{\pi}{2}$
5.4.	$3\bar{p} - 2\bar{q}$	$\bar{p} + 5\bar{q}$	4	$\frac{1}{2}$	$\frac{5\pi}{6}$
5.5.	$\bar{p} - 2\bar{q}$	$2\bar{p} + \bar{q}$	2	3	$\frac{3\pi}{4}$
5.6.	$\bar{p} + 3\bar{q}$	$\bar{p} - 2\bar{q}$	2	3	$\frac{\pi}{3}$
5.7.	$2\bar{p} - \bar{q}$	$\bar{p} + 3\bar{q}$	3	2	$\frac{\pi}{2}$
5.8.	$4\bar{p} + \bar{q}$	$\bar{p} - \bar{q}$	7	2	$\frac{\pi}{4}$
5.9.	$\bar{p} - 4\bar{q}$	$3\bar{p} + \bar{q}$	1	2	$\frac{\pi}{6}$
5.10.	$\bar{p} + 4\bar{q}$	$2\bar{p} - \bar{q}$	7	2	$\frac{\pi}{3}$
5.11.	$3\bar{p} + 2\bar{q}$	$\bar{p} - \bar{q}$	10	1	$\frac{\pi}{2}$
5.12.	$4\bar{p} - \bar{q}$	$\bar{p} + 2\bar{q}$	5	4	$\frac{\pi}{4}$
5.13.	$2\bar{p} + 3\bar{q}$	$\bar{p} - 2\bar{q}$	6	7	$\frac{\pi}{3}$
5.14.	$3\bar{p} - \bar{q}$	$\bar{p} + 2\bar{q}$	3	4	$\frac{\pi}{4}$
5.15.	$2\bar{p} + 3\bar{q}$	$\bar{p} - 2\bar{q}$	2	3	$\frac{\pi}{6}$

5.16.	$2\bar{p} - 3\bar{q}$	$3\bar{p} + 2\bar{q}$	4	1	$\frac{\pi}{6}$
5.17.	$3\bar{p} - 2\bar{q}$	$2\bar{p} + 3\bar{q}$	2	5	$\frac{\pi}{6}$
5.18.	$4\bar{p} - 3\bar{q}$	$\bar{p} + 2\bar{q}$	1	2	$\frac{\pi}{6}$
5.19.	$\bar{p} - \bar{q}$	$\bar{p} + \bar{q}$	2	5	$\frac{\pi}{6}$
5.20.	$5\bar{p} - \bar{q}$	$\bar{p} + 5\bar{q}$	5	3	$\frac{\pi}{6}$
5.21.	$3\bar{p} - \bar{q}$	$\bar{p} + 3\bar{q}$	2	$\sqrt{2}$	$\frac{\pi}{4}$
5.22.	$\bar{p} - 4\bar{q}$	$\bar{p} + 5\bar{q}$	$\sqrt{3}$	2	$\frac{\pi}{6}$
5.23.	$5\bar{p} + \bar{q}$	$\bar{p} - 3\bar{q}$	1	2	$\frac{\pi}{3}$
5.24.	$7\bar{p} - 2\bar{q}$	$\bar{p} + 3\bar{q}$	$\frac{1}{2}$	2	$\frac{\pi}{2}$
5.25.	$6\bar{p} - \bar{q}$	$\bar{p} + \bar{q}$	3	4	$\frac{\pi}{4}$
5.26.	$10\bar{p} + \bar{q}$	$3\bar{p} - 2\bar{q}$	4	1	$\frac{\pi}{6}$
5.27.	$6\bar{p} - \bar{q}$	$3\bar{p} + 2\bar{q}$	8	$\frac{1}{2}$	$\frac{\pi}{3}$
5.28.	$3\bar{p} + 4\bar{q}$	$\bar{p} - \bar{q}$	2,5	2	$\frac{\pi}{2}$
5.29.	$7\bar{p} + \bar{q}$	$\bar{p} - 3\bar{q}$	3	1	$\frac{3\pi}{4}$
5.30.	$\bar{p} + 3\bar{q}$	$3\bar{p} - \bar{q}$	3	5	$\frac{2\pi}{3}$

**6-topshiriq.**  $\bar{a}$ ,  $\bar{b}$ , va  $\bar{c}$  vektorlarning komplanarligini anqlang.

№	$\bar{a}$	$\bar{b}$	$\bar{c}$
6.1.	(2,3,1)	(-1,0,-1)	(2,2,2)
6.2.	(3,2,1)	(2,3,4)	(3,1,-1)
6.3.	(1,5,2)	(-1,1,-1)	(1,1,1)
6.4.	(1,-1,-3)	(3,2,1)	(2,3,4)
6.5.	(3,3,1)	(1,-2,1)	(1,1,1)
6.6.	(3,1,-1)	(-2,-1,0)	(5,2,-1)
6.7.	(4,3,1)	(1,-2,1)	(2,2,2)
6.8.	(4,3,1)	(6,7,4)	(2,0,-1)
6.9.	(3,2,1)	(1,-3,-7)	(1,2,3)
6.10.	(3,7,2)	(-2,0,-1)	(2,2,1)
6.11.	(1,-2,6)	(1,0,1)	(2,-6,17)
6.12.	(6,3,4)	(-1,-2,-1)	(2,1,2)
6.13.	(7,3,4)	(-1,-2,-1)	(4,2,4)
6.14.	(2,3,2)	(4,7,5)	(2,0,-1)
6.15.	(5,3,4)	(-1,0,-1)	(4,2,4)
6.16.	(3,10,5)	(-3,-2,-3)	(2,4,3)
6.17.	(-2,-4,-3)	(4,3,1)	(6,7,4)
6.18.	(3,1,-1)	(1,0,-1)	(8,3,-2)
6.19.	(4,2,2)	(-3,-3,-3)	(2,1,2)
6.20.	(4,1,2)	(9,2,5)	(1,1,-1)
6.21.	(5,3,4)	(4,3,3)	(9,5,8)
6.22.	(3,4,2)	(1,1,0)	(8,11,6)
6.23.	(4,-1,-6)	(1,-3,-7)	(2,-1,-4)
6.24.	(3,1,0)	(-5,-4,-5)	(4,2,4)
6.25.	(3,0,3)	(8,1,6)	(1,1,-1)
6.26.	(1,-1,4)	(1,0,3)	(1,-3,8)
6.27.	(6,3,4)	(-1,-2,-1)	(2,1,2)
6.28.	(4,1,1)	(-9,-4,-9)	(6,2,6)
6.29.	(-3,3,3)	(-4,7,6)	(3,0,-1)
6.30.	(-7,10,-5)	(0,-2,-1)	(-2,4,-1)

**7- topshiriq** Uchlari  $A$ ,  $B$ ,  $C$ , va  $D$  nuqtalarda bulgan piramidaning hajmini va  $D$  uchidan  $ABC$  yoqqa tushirilgan balandligini toping.

№	$A$	$B$	$C$	$D$
7.1.	(0,1,2)	(2,1,7)	(2,7,4)	(0,0,4)
7.2.	(1,2,3)	(2,8,-4)	(0,5,4)	(2,9,4)
7.3.	(1,1,1)	(2,4,-2)	(2,0,2)	(0,1,-1)
7.4.	(1,-1,1)	(0,2,3)	(1,-1,0)	(0,2,2)
7.5.	(2,1,3)	(4,-2,0)	(1,3,-3)	(7,5,2)
7.6.	(-2,0,4)	(1,3,-1)	(4,-1,3)	(2,7,3)
7.7.	(1,2,3)	(0,0,0)	(1,4,3)	(1,8,-1)
7.8.	(-1,2,0)	(1,0,3)	(0,2,2)	(1,8,3)
7.9.	(2,-1,1)	(3,3,2)	(2,1,0)	(4,1,-3)
7.10.	(2,1,-1)	(-3,1,2)	(0,1,2)	(-1,8,3)
7.11.	(-2,1,1)	(5,5,4)	(3,2,-1)	(4,1,3)
7.12.	(0,1,-1)	(3,-1,5)	(1,0,4)	(3,5,7)
7.13.	(1,1,2)	(-1,1,3)	(2,-2,4)	(-1,0,-2)
7.14.	(2,3,1)	(4,1,-2)	(6,3,7)	(7,5,-3)
7.15.	(1,1,-1)	(2,3,1)	(3,2,1)	(5,9,-8)
7.16.	(1,5,-7)	(-3,5,3)	(-2,7,3)	(-4,8,-12)
7.17.	(-3,4,-7)	(1,5,-4)	(-6,-2,0)	(2,5,4)
7.18.	(-1,2,-3)	(4,-1,0)	(2,1,-2)	(3,4,5)
7.19.	(4,-1,3)	(-2,1,0)	(0,-5,1)	(3,2,-6)
7.20.	(1,-1,1)	(-2,0,3)	(2,1,-1)	(2,-2,-4)
7.21.	(1,2,0)	(1,-1,2)	(0,1,-1)	(-3,0,1)
7.22.	(1,0,2)	(1,2,-1)	(2,-2,1)	(2,1,0)
7.23.	(1,2,-3)	(1,0,1)	(-2,-1,6)	(0,-5,-4)
7.24.	(3,10,-1)	(-2,3,-5)	(-6,0,-3)	(1,-1,2)
7.25.	(-1,2,4)	(-1,-2,-4)	(3,0,-1)	(7,-3,1)
7.26.	(0,-3,1)	(-4,1,2)	(2,-1,5)	(3,1,-4)
7.27.	(1,3,0)	(4,-1,2)	(3,0,1)	(-4,3,5)
7.28.	(-2,-1,-1)	(0,3,2)	(3,1,-4)	(-4,7,3)
7.29.	(-3,-5,6)	(2,1,-4)	(0,-3,-1)	(-5,2,-8)
7.30.	(2,-4,-3)	(5,-6,0)	(-1,3,-3)	(-10,-8,7)

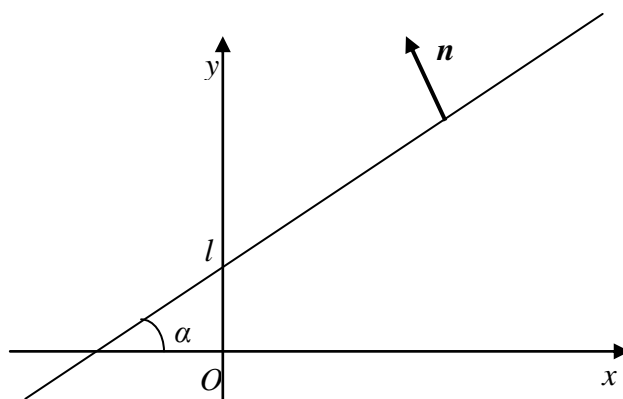
### III. ANALITIK GEOMETRIYA

#### 3.1. Tekislikda to‘g‘ri chiziq

1<sup>o</sup>. To‘g‘ri chiziqning burchak koeffitsiyentli tenglamasi:

$$y = kx + l \quad (1)$$

bu erda  $k = \operatorname{tg}\alpha$  to‘g‘ri chiziqning absissa o‘qi musbat yo‘nalishi bilan tashkil etgan burchak tangensi,  $l$  – ordinata o‘qidan koordinatalar boshiga nisbatan qancha masofadan kesib o‘tishini ifodalovchi son(1.1-rasm).



Agar  $l=0$  bo‘lsa,  $y = kx$  to‘g‘ri chiziq koordinatalar boshidan o‘tadi; agar  $x=0$  bo‘lsa,  $y = l$  absissa o‘qiga nisbatan parallel o‘tuvchi to‘g‘ri chiziq;  $u = 0$  bo‘lsa,  $x=a$  ordinata o‘qiga nisbatan parallel to‘g‘ri chiziq tenglamasi bo‘ladi.

2<sup>o</sup>. To‘g‘ri chiziqning umumiy tenglamasi:

$$Ax + By + C = 0 \quad (2)$$

bu erda  $A, B$  o‘zgarmas koeffitsentlar bo‘lib, to‘g‘ri chiziqqa perpendikulyar yo‘nalgan  $\vec{n} = \{A, B\}$  vektorning koordinatalari;  $C$  – ozod had.

Xususiy holda:

a)  $A \neq 0, B \neq 0, C = 0$  bo'lsa,  $Ax + By = 0$  koordinatalar boshidan o'tuvchi to'g'ri chiziq tenglamasi;

b)  $A = 0, B \neq 0, C \neq 0$  bo'lsa,  $y = -\frac{C}{B} = l$  — absissa o'qiga parallel to'g'ri chiziq tenglamasi;

v)  $A \neq 0, B = 0, C \neq 0$  bo'lsa,  $x = -\frac{C}{A} = k$  — ordinata o'qiga parallel to'g'ri chiziq tenglamasi;

3°. *To'g'ri chiziqning kesmalar bo'yicha tenglamasi:*

$$\frac{x}{a} + \frac{y}{b} = 1 \quad (3)$$

bu yerda  $a, b$  — to'g'ri chiziqning mos ravishda Ox va Oy o'qlarida ajratgan kesmalari.

4°. *To'g'ri chiziqning normal tenglamasi:*

$$x \cos \alpha + y \sin \alpha - p = 0 \quad (4)$$

bu yerda  $\cos \alpha, \sin \alpha$  to'g'ri chiziqqa perpendikulyar yo'nalgan vektorning koordinatalari, ya'ni  $\vec{n} = \{\cos \alpha, \sin \alpha\}$  moduli birga teng  $|\vec{n}| = \sqrt{\cos^2 \alpha + \sin^2 \alpha}$  bo'lgan vektor;  $p$  — koordinatalar boshidan to'g'ri chiziqgacha bo'lgan masofa.

5°. Agar to'g'ri chiziq  $M_1(x_1, y_1)$  nuqtadan o'tsa, u holda;

$$y - y_1 = k(x - x_1) \quad (5)$$

*to'g'ri chiziq dastasini tenglamasi bo'ladi.*

6°. *Berilgan ikki nuqtadan o'tuvchi to'g'ri chiziq tenglamasi:*

$$\frac{y - y_1}{y_2 - y_1} = \frac{x - x_1}{x_2 - x_1} \quad (6)$$

bu yerda  $x_1, y_1, x_2, y_2$  berilgan nuqtaning koordinatalari.

7°. *Ikki to'g'ri chiziq orasidagi burchak*



$$\operatorname{tg} \varphi = \frac{k_2 - k_1}{1 + k_1 k_2} \quad (7)$$

formula bilan aniqlanadi.

Xususiyl holda:

a) Agar  $k_1 = k_2$  bo'lsa, to'g'ri chiziqlar o'zaro parallel;

b) Agar  $k_1 \cdot k_2 = -1$  bo'lsa, to'g'ri chiziqlar o'zaro perpendikulyar bo'ladi

8<sup>o</sup>.  $AB$  kesmani  $\lambda$  nisbatda bo'luvchi nuqtaning koordinatalari

$$x = \frac{x_1 + \lambda x_2}{1 + \lambda}, \quad y = \frac{y_1 + \lambda y_2}{1 + \lambda}; \quad (8)$$

formulasi orqali aniqlanadi;

Xususan,  $\lambda = 1$  ga teng bo'lganda, kesma o'rtasining koordinatalari

$$x = \frac{x_1 + x_2}{2}, \quad y = \frac{y_1 + y_2}{2} \quad (9)$$

formulasi bilan aniqlanadi.

9<sup>o</sup>. Berilgan  $A(x_1, y_1)$  nuqtadan to'g'ri chiziqqacha bo'lgan masofa:

$$d = |x_1 \cos \alpha + y_1 \sin \alpha - p| \quad \text{yoki} \quad d = \left| \frac{Ax_1 + By_1 + C}{\pm \sqrt{A^2 + B^2}} \right|. \quad (10)$$

10<sup>o</sup>. Uch burchak yuzini hisoblash formulasi:

$$S = \pm \frac{1}{2} \begin{vmatrix} x_1 & y_1 & 1 \\ x_2 & y_2 & 1 \\ x_3 & y_3 & 1 \end{vmatrix} \quad (11)$$

bu yerda  $A(x_1, u_1)$ ,  $V(x_2, u_2)$ ,  $S(x_3, u_3)$  uchburchak uchining koordinatalari.

11<sup>o</sup>. Ikki  $A(x_1, u_1)$  va  $V(x_2, u_2)$  nuqta orasidagi masofa quyidagi formula bilan topiladi:

$$d = \sqrt{(x_2 - x_1)^2 + (y_2 - y_1)^2} \quad (12)$$

**1-misol.** Uchburchak uchining koordinatalari berilgan:

$$A(-1; 4), \quad B(3; 6) \quad C(5; -2)$$

Quyidagilarni toping:

- 1)  $AC$  va  $AC$  tomon tenglamalarini;
- 2)  $AB$  va  $AC$  tomonlar orasidagi burchakni;
- 3)  $B$  uchidan  $AC$  tomonga tushirilgan balandlik tenglamasini;
- 4)  $C$  uchidan  $AC$  tomonga tushirilgan balandlik tenglamasini;
- 5)  $A$  uchida  $BC$  tomonga bo'lgan masofani;
- 6)  $ABC$  uchburchak yuzini.

**Yechish:**

1) Berilgan  $A(-1;4)$  va  $B(3;6)$ , nuqtalardan o'tuvchi  $AB$  tomon tenglamasini tuzamiz: buning uchun (6) formulasidan foydalanamiz,

ya'ni 
$$\frac{x-x_1}{y_2-y_1} = \frac{y-y_1}{y_2-y_1}$$

$$\frac{x+1}{3+1} = \frac{y-4}{6-4} \Rightarrow \frac{x+1}{4} = \frac{y-4}{2} \Rightarrow 2(x+1) = 4(y-4) \text{ yoki } 2(y-4) =$$

$$x+1 \Rightarrow$$

$$y-4 = \frac{1}{2}x + \frac{1}{2} \Rightarrow y = \frac{1}{2}x + \frac{9}{2}; \quad k_1 = \frac{1}{2}, \quad l_1 = \frac{9}{2};$$

Xuddi shuningdek,  $A(-1;4)$  va  $C(5;-2)$  nuqtalardan o'tuvchi  $AC$  tomon tenglamasini tuzamiz:

$$\frac{x+1}{5+1} = \frac{y-4}{-2-4} \Rightarrow \frac{x+1}{6} = \frac{y-4}{-6} \Rightarrow y-4 = -x+1 \Rightarrow y = -x+5$$

$$k_2 = -1, \quad l_2 = 3;$$

2) Ikki to'g'ri chiziq orasidagi burchakni topish formulasi (7) dan foydalanib,  $AB$  va  $AC$  tomonlar orasidagi burchakni topamiz:

$$AB: y = \frac{1}{2}x + \frac{9}{2}, \quad k_1 = \frac{1}{2}$$

$$AC: y = -x + 3, \quad k_2 = -1$$

$$\operatorname{tg}\varphi = \frac{k_2 - k_1}{1 + k_1 k_2} \Rightarrow \operatorname{tg}\varphi = \frac{-1 - \frac{1}{2}}{1 - 1 \cdot \frac{1}{2}} \Rightarrow \operatorname{tg}\varphi = \frac{-\frac{3}{2}}{\frac{1}{2}}$$

$$\operatorname{tg}\varphi = -3; \quad \varphi = \operatorname{arctg}(-3);$$

3) B uchidan AC tomonga tushirilgan balandlik tenglamasini tuzamiz: Buning uchun berilgan nuqtadan o'tuvchi to'g'ri chiziq formulasi (5) dan foydalanamiz:

$$y - y_2 = k(x - x_1)$$

B(3;6) nuqtadan o'tuvchi to'g'ri chiziq  $y - 6 = k(x - 3)$  ko'rinishiga ega bo'ladi. Bu to'g'ri chiziq AC to'g'ri chiziqqa perpendikulyar bo'lishi uchun 7° da ko'rsatilgan perpendikulyarlik shartidan  $k \cdot k_2 = -1$  foydalanamiz:

$$AC: y = -x + 3, \quad k_2 = -1;$$

shu  $k_2 = -1$  ni  $k \cdot k_2 = -1$  tenglikka qo'ysak  $k \cdot (-1) = -1$  dan  $k = 1$  ekanligi kelib chiqadi.  $k = 1$  ni  $y - 6 = k(x - 3)$  tenglikka qo'yamiz  $y - 6 = 1(x - 3) \Rightarrow y = x + 3$ ; Bu B(3;6) nuqtadan o'tuvchi balandlik tenglamasi bo'ladi.

4) C uchidan o'tuvchi AB tomonga tushirilgan mediana tenglamasini tuzish uchun AB tomonni teng ikkiga bo'luvchi nuqtaning koordinatalarini topishimiz kerak. Buning uchun (9) dan foydalanamiz: A(-1;4), B(3;6)

$$x = \frac{x_1 + x_2}{2}, \quad x = \frac{-1 + 3}{2} = \frac{2}{2} = 1$$

$$y = \frac{y_1 + y_2}{2}, \quad y = \frac{4 + 6}{2} = \frac{10}{2} = 5$$

D(1;5) nuqta AB kesma o'rtasi.

Mediana C(5;-2) va D(1;5) nuqtalardan o'tadi va ikki nuqtadan o'tuvchi to'g'ri chiziq tenglamasi formulasidan foydalanamiz

$$CD: \frac{x-x_1}{x_2-x_1} = \frac{y-y_1}{y_2-y_1} \Rightarrow \frac{x-5}{1-5} = \frac{y+2}{5+2} \Rightarrow \frac{x-5}{-4} = \frac{y+2}{7}$$

$$7(x-5) = -4(y+2) \Rightarrow 7x - 35 = -4y - 8 \text{ yoki } 4y = -7x + 27$$

$$y = -\frac{7}{4}x + \frac{27}{4} \text{ mediana tenglamasi.}$$

5) A uchidan BC tomongacha bo'lgan masofani topish uchun avval BC tomon tenglamasini tuzamiz B(3;6), C(5;-2)

$$BC: \frac{x-3}{5-3} = \frac{y-6}{-2-6} \Rightarrow \frac{x-3}{2} = \frac{y-6}{-8} \Rightarrow -8(x-3) = 2(y-6)$$

$$-8x + 24 = 2y - 12 \Rightarrow 2y + 8x - 36 = 0 \Rightarrow 4x + 2y - 18 = 0$$

$$4x + y - 18 = 0 \text{ VS tomon tenglamasi. } A=4, B=1, C=-18$$

A nuqtadan BC tomongacha bo'lgan masofani topish uchun (10) formulasidan foydalanamiz  $d = \left| \frac{Ax_1 + By_1 + C}{\pm \sqrt{A^2 + B^2}} \right|$  qiymatlarni o'rniga qo'yamiz

$$d = \left| \frac{4 \cdot (-1) + 1 \cdot 4 - 18}{\pm \sqrt{4^2 + 1^2}} \right| = \left| \frac{-4 + 4 - 18}{\sqrt{17}} \right| = \frac{|-18|}{\sqrt{17}} = \frac{18}{\sqrt{17}}$$

6) ABC uchburchak yuzini topish uchun (11) formuladan foydalanamiz: Bizga uchburchak o'zining koordinatalari A(-1;4), B(3;6), C(5;-2) berilgan shu sababli mos koordinatalarni formulaga qo'yamiz:

$$S = \pm \frac{1}{2} \begin{vmatrix} x_1 & y_1 & 1 \\ x_2 & y_2 & 1 \\ x_3 & y_3 & 1 \end{vmatrix} = \pm \begin{vmatrix} -1 & 4 & 1 \\ 3 & 6 & 1 \\ 5 & -2 & 1 \end{vmatrix} = \pm \frac{1}{2} (-6 + 20 - 6 - 30 -$$

$$12 - 2) = \pm \frac{1}{2} (-36) = -\frac{1}{2} (-36) = 18$$

ABC uchburchak yuzi S=18 kv.birlikga teng.

### 3.2. Tekislik

1°. *Tekislikning umumiy tenglamasi:*

$$Ax + By + Cz + D = 0 \quad (1)$$

ko‘rinishiga ega bo‘lib,  $A, B, C$  noma'lumlar oldidagi koeffitsiyentlar hamda shu tekislikka perpendikulyar bo‘lgan  $\vec{n}\{A, B, C\}$  vektorning koordinatalaridir,  $D$  – esa ozod had:

***Xususiy hollari:***

a)  $A \neq 0, B \neq 0, C \neq 0, D = 0$  ya'ni tenglama  $Ax + By + Cz = 0$  ko‘rinishda bo‘lsa, tekislik koordinatalar boshidan o‘tadi;

b)  $A \neq 0, B \neq 0, D \neq 0, C = 0$  bo‘lsa, ya'ni  $Ax + By + D = 0$   $Oxy$  tekislikda to‘g‘ri chiziq, fazoda esa  $Oz$  o‘qiga parallel tekislik;

v)  $A \neq 0, C \neq 0, D \neq 0, B = 0$  bo‘lsa, ya'ni  $Ax + Cz + D = 0$  tenglama  $Oxz$  tekislikda to‘g‘ri chiziq, fazoda esa  $Oy$  parallel tekislik;

g)  $B \neq 0, C \neq 0, D \neq 0, A = 0$  bo‘lsa, ya'ni  $By + Cz + D = 0$  tenglama  $Oyz$  tekislikda to‘g‘ri chiziq, fazoda esa  $Ox$  o‘qiga parallel tekislik;

d)  $A \neq 0, D \neq 0, B = C = 0$  bo‘lsa,  $Ax + D = 0$  yoki  $x = -\frac{D}{A} = a$  tenglama,  $Ox$  o‘qida nuqta, fazoda  $Oyz$  tekislikka parallel tekislik;

e)  $B \neq 0, D \neq 0, A = C = 0$  bo‘lsa,  $By + D = 0$  yoki  $y = -\frac{D}{B} = b$  tenglama,  $Oy$  o‘qida nuqta, fazoda  $Oxz$  tekislikka parallel tekislik;

j)  $C \neq 0, D \neq 0, A = B = 0$  bo‘lsa,  $Cz + D = 0$  yoki  $z = -\frac{D}{C}$  tenglama  $Oz$  o‘qida nuqta, fazoda  $Oxy$  tekislikka parallel tekislik;

2°. *Tekislikning umumiy tenglamasidan kesmalar bo‘yicha tenglamasini keltirib chiqarish mumkin:*

$Ax + By + Cz + D = 0$  dan  $A \neq 0, B \neq 0, C \neq 0, D \neq 0$ ;

$$\frac{x}{a} + \frac{y}{b} + \frac{z}{c} = 1, \quad a = -\frac{D}{A}, \quad b = -\frac{D}{B}, \quad c = -\frac{D}{C} \quad (2)$$

3°. Ikki tekislik orasidagi burchak:

Ikkita tekislik tenglamalari berilgan bo'lsin:

$$\begin{cases} A_1x + B_1y + C_1z + D_1 = 0, & \vec{n}_1(A_1, B_1, C_1) \\ A_2x + B_2y + C_2z + D_2 = 0, & \vec{n}_2(A_2, B_2, C_2) \end{cases}$$

tekisliklar orasidagi burchak ular perpendikulyar bo'lgan normal vektorlar orasidagi burchak bilan o'lchanadi, shu sabab bu vektorlarning skalyar ko'paytmasi formulasidan foydalanamiz:

ya'ni  $\vec{n}_1 \cdot \vec{n}_2 = |\vec{n}_1| \cdot |\vec{n}_2| \cos\varphi, \quad \varphi = (\vec{n}_1, \vec{n}_2)$

$$\cos\varphi = \frac{\vec{n}_1 \cdot \vec{n}_2}{|\vec{n}_1| \cdot |\vec{n}_2|} = \frac{A_1A_2 + B_1B_2 + C_1C_2}{\sqrt{A_1^2 + B_1^2 + C_1^2} \cdot \sqrt{A_2^2 + B_2^2 + C_2^2}} \quad (3)$$

ikki tekislik orasidagi burchak formulasi.

**Xususiy holda:**

a) Agar tekisliklar o'zaro parallel bo'lsa,  $\varphi = 0$ , ularning normal vektorlari kollinear bo'ladi, ya'ni  $\vec{n}_1 = \gamma \vec{n}_2$  tenglik o'rinma bo'ladi, bu yerdan

$$\gamma = \frac{\vec{n}_1}{\vec{n}_2}, \quad \frac{A_1}{A_2} = \frac{B_1}{B_2} = \frac{C_1}{C_2} \quad (4)$$

ekanligi kelib chiqadi. (parallellik sharti)

b) Agar tekisliklar o'zaro perpendikulyar bo'lsa,  $\varphi = 90^\circ$  u holda (3) formuladan

$$A_1A_2 + B_1B_2 + C_1C_2 = 0 \quad (5)$$

perpendikulyarlik shart kelib chiqadi, chunki  $\cos 90^\circ = 0$  ga teng.

4°. Agar fazoda  $M_1(x_1, y_1, z_1)$  nuqta berilgan bo'lsa,  $M_1$  nuqtadan o'tuvchi tenglik tenglamasi

$$A(x - x_1) + B(y - y_1) + C(z - z_1) = 0 \quad (6)$$

fomulasi bilan aniqlanadi.

5° Uchta nuqtadan o'tuvchi tekislik tenglamasi, ya'ni  $M_1(x_1, y_1, z_1)$ ,  $M_2(x_2, y_2, z_2)$ ,  $M_3(x_3, y_3, z_3)$  nuqtalar berilgan bo'lsa,

$$\begin{vmatrix} x - x_1 & y - y_1 & z - z_1 \\ x_2 - x_1 & y_2 - y_1 & z_2 - z_1 \\ x_3 - x_1 & y_3 - x_1 & z_3 - z_1 \end{vmatrix} = 0 \quad (7)$$

formulasi bilan aniqlanadi.

6°. Tekislikning normal tenglamasi

$$\cos\alpha \cdot x + \cos\beta \cdot y + \cos\gamma \cdot z - p = 0 \quad (8)$$

ko'rinishiga ega va  $\cos^2\alpha + \cos^2\beta + \cos^2\gamma = 1$  tenglik o'rinli. Bu  $\cos\alpha, \cos\beta, \cos\gamma$  ifodalar normal vektorning koordinatalari  $\vec{n}(\cos\alpha, \cos\beta, \cos\gamma)$  bo'lib, ular

$$\cos\alpha = \frac{A}{\pm\sqrt{A^2+B^2+C^2}}, \quad \cos\beta = \frac{B}{\pm\sqrt{A^2+B^2+C^2}}, \quad \cos\gamma = \frac{C}{\pm\sqrt{A^2+B^2+C^2}}$$

tengliklar orqali aniqlanadi pesa  $p = \frac{D}{\pm\sqrt{A^2+B^2+C^2}}$  ga teng.

Demak ,

$$\frac{A}{\pm\sqrt{A^2+B^2+C^2}}x + \frac{B}{\pm\sqrt{A^2+B^2+C^2}}y + \frac{C}{\pm\sqrt{A^2+B^2+C^2}}z + \frac{D}{\pm\sqrt{A^2+B^2+C^2}} = 0$$

tekislikning normal tenglamasi bo'ladi.

7° Nuqtadan tekislikgacha bo'lgan masofa:

$$d = |x_1 \cos\alpha + y_1 \cos\beta + z_1 \cos\gamma| \quad (9)$$

yoki

$$d = \left| \frac{Ax_1 + By_1 + Cz_1 + D}{\pm\sqrt{A^2+B^2+C^2}} \right| \quad (10)$$

formulasi bilan aniqlanadi.

Demak, berilgan  $M_1(x_1, y_1, z_1)$  nuqtadan tekislikkacha bo‘lgan masofani topish uchun, tekislikning normal tenglamasidagi nuqtaning koordinatalarini qo‘yib hisoblash kerak.

**2-misol.** Fazoda piramida uchining koordinatalari berilgan:  $A_1(3; 2; -2)$ ,  $A_2(6; -1; 7)$ ,  $A_3(1; 3; 5)$ ,  $A_4(-3; 0; 4)$ ,

- 1)  $A_1A_2A_3$  va  $A_1A_2A_4$  tekislik tenglamalari tuzing;
- 2)  $A_1A_2A_3$  va  $A_1A_2A_4$  tekislik orasidagi burchakni toping;
- 3)  $A_4$  nuqtadan o‘tib  $A_1A_2A_3$  tekislikka parallel tekislik tenglamasini tuzing;
- 4)  $A_3$  nuqtadan  $A_1A_2A_4$  tekislikkacha bo‘lgan masofani toping;
- 5)  $A_1A_2A_3$  tekislik tenglamasini kesmalar bo‘yicha ifodalang;

**Yechish:**

1)  $A_1A_2A_3$  va  $A_1A_2A_4$  tomon tenglamalari tuzamiz:

$A_1, A_2, A_3$  tomon tenglamasini tuzish uchun (1) formulasidan foydalanamiz:

$$\begin{vmatrix} x-3 & y-2 & z+2 \\ 6-3 & -1-2 & 7+2 \\ 1-3 & 3-2 & 5+2 \end{vmatrix} = 0 \Rightarrow \begin{vmatrix} x-3 & y-2 & z+2 \\ 3 & -3 & 9 \\ -2 & 1 & 7 \end{vmatrix} = 0$$

$$-30(x-3) - 39(y-2) - 3(z+2) = 0$$

$$10(x-3) + 13(y-2) + 1(z+2) = 0 \quad \text{yoki} \quad 10x + 13y + z - 5$$

Xuddi shuningdek  $A_1A_2A_4$  tomon tenglamasini tuzamiz:

$$\begin{vmatrix} x-3 & y-2 & z+2 \\ 6-3 & -1-2 & 7+2 \\ -3-3 & 0-2 & 4+2 \end{vmatrix} = 0 \Rightarrow \begin{vmatrix} x-3 & y-2 & z+2 \\ 3 & -3 & 9 \\ -6 & -2 & 6 \end{vmatrix} = 0$$

$$0(x-3) - 72(y-2) + 24(z+2) = 0$$

$$3(y-2) + (z+2) = 0 \quad \text{yoki} \quad 3y + z - 4 = 0$$



2)  $A_1A_2A_3$  va  $A_1A_2A_4$  tekisliklar orasidagi burchakni topish uchun berilgan  $\begin{cases} 10x + 13y + z - 54 = 0 \\ 0x + 3y + z - 4 = 9 \end{cases}$  tekisliklardan normal vektorlarni yozamiz  $\vec{n}_1(10;13;1)$ ,  $\vec{n}_2(0;3;1)$ , va (3) formuladan foydalanib tekisliklar orasidagi burchakni aniqlaymiz:

$$\cos\varphi = \frac{\vec{n}_1 \cdot \vec{n}_2}{|\vec{n}_1| \cdot |\vec{n}_2|} = \frac{10 \cdot 0 + 13 \cdot 3 + 1 \cdot 1}{\sqrt{10^2 + 13^2 + 1^2} \cdot \sqrt{0^2 + 3^2 + 1^2}} = \frac{40}{\sqrt{270} \cdot \sqrt{10}} = \frac{40}{30\sqrt{3}}$$

$$\cos\varphi = \frac{4}{3\sqrt{3}}, \quad \cos\varphi = \frac{4\sqrt{3}}{9}, \quad \varphi = \arccos \frac{4\sqrt{3}}{9}$$

3)  $A_4$  nuqtadan o'tib  $A_1A_2A_3$  tekislikka parallel tekislik tenglamasini tuzish uchun  $A_4(-3;0;4)$  nuqtadan o'tuvchi tekislik tenglamasini (6) formuladan foydalanib yozamiz:

$$A(x + 3) + B(y - 0) + C(z - 4) = 0 \quad (*)$$

bu tekislik  $10x + 13y + z - 54 = 0$  tekislikka parallel bo'lishi uchun (4) munosabatidan foydalanamiz, ya'ni parallel sharti

$$\frac{A_1}{A_2} = \frac{B_1}{B_2} = \frac{C_1}{C_2} \quad \text{dan} \quad \frac{A}{10} = \frac{B}{13} = \frac{C}{1} = \gamma.$$

$\gamma \neq 0$ ,  $A = 10\gamma$ ,  $B = 13\gamma$ ,  $C = \gamma$ . A, V va S larning topilgan qiymatlarini (\*) tenglamaga qo'yamiz:

$$10\gamma(x + 3) + 13\gamma y + C\gamma(z - 4) = 0$$

$$\text{Bundan} \quad 10x + 13y + z + 26 = 0.$$

4)  $A_3$  nuqtadan  $A_1A_2A_4$  tekislikgacha bo'lgan masofani topish uchun (10) formuladan foydalanamiz:

$A_3(1; 3; 5)$  nuqta va  $A_1A_2A_4$  tekislik tenglamasi  $3y + z - 4 = 0$  ga asosan quyidagicha yozamiz:

$$d = \left| \frac{0 \cdot 1 + 3 \cdot 3 + 1 \cdot 5 - 4}{\pm \sqrt{0^2 + 3^2 + 1^2}} \right| = \left| \frac{10}{\sqrt{10}} \right| = \sqrt{10}$$

5)  $A_1 A_2 A_3$  tekislik tenglamasini tekislikning kesmalar bo'yicha tenglamali ko'rinishda ifodalaymiz:

$$10x + 13y + z - 54 = 0 \Rightarrow 10x + 13y + z = 54$$

$$\frac{10x}{54} + \frac{13y}{54} + \frac{z}{54} = 1 \Rightarrow \frac{x}{\frac{54}{10}} + \frac{y}{\frac{54}{13}} + \frac{z}{54} = 1 \Rightarrow a = \frac{54}{10},$$

$$b = \frac{54}{13}, c = 54$$

Xuddi shuningdek  $A_1 A_2 A_4$  tekislik tenglamasini ham yozishimiz mumkin.

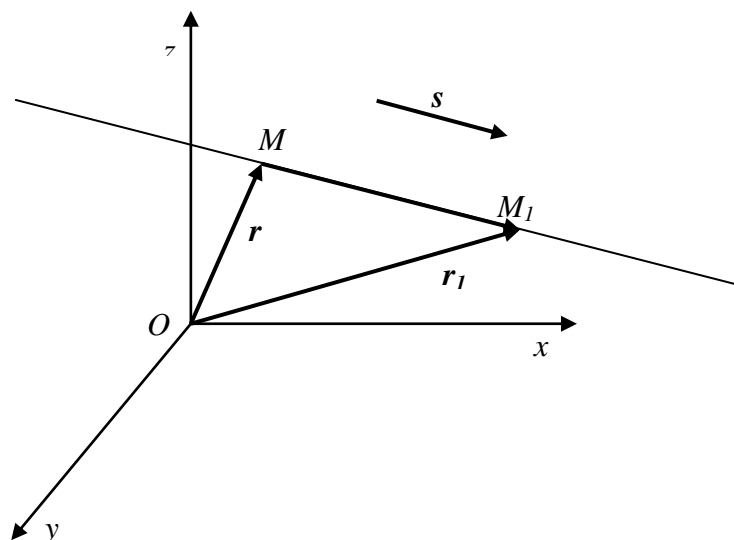
$$3y + z = 4 \Rightarrow \frac{y}{\frac{4}{3}} + \frac{z}{4} = 1, \Rightarrow b = \frac{4}{3}, c = 4$$

$Ox$  o'qiga parallel tekislik.

### 3.3. Fazoda to'g'ri chiziq

1°. Fazoda to'g'ri chiziqning vektor formadagi tenglamasi:

$$\vec{r} = \vec{r}_1 + t \cdot \vec{s} \quad (1)$$



3.1-rasm

bu yerda  $\vec{r}(x, y, z)$ ,  $\vec{r}_1(x_1, y_1, z_1)$  – mos ravishda  $M(x, y, z)$  va  $M_1(x_1, y_1, z_1)$  nuqtalarning radius vektorlari.  $\vec{S}(m, n, p)$  – yo‘naltiruvchi vektor,  $t$  – esa parametr.

(1) tenglikdan to‘g‘ri chiziqning parametr tenglamasi kelib chiqadi:

$$\begin{cases} x = x_1 + mt \\ y = y_1 + nt \\ z = z_1 + pt \end{cases} \quad (2)$$

(2) tenglikdan parametr  $t$  ni aniqlasak,

$$\frac{x-x_1}{m} = \frac{y-y_1}{n} = \frac{z-z_1}{p} \quad (3)$$

to‘g‘ri chiziqning kanonik tenglamasini hosil qilamiz.

2°. Agar  $M_1(x_1, y_1, z_1)$  va  $M_2(x_2, y_2, z_2)$  nuqtalar berilgan bo‘lsa, ikki nuqtadan o‘tuvchi to‘g‘ri chiziq tenglamasini

$$\frac{x-x_1}{x_2-x_1} = \frac{y-y_1}{y_2-y_1} = \frac{z-z_1}{z_2-z_1} \quad (4)$$

ko‘rinishda yozish mumkun, chunki  $\vec{S} = \overrightarrow{M_1M_2} = (x_2 - x_1, y_2 - y_1, z_2 - z_1)$  vektor yo‘naltiruvchi vektor bo‘ladi.

3°. Ikkita to‘g‘ri chiziqning kanonik tenglamasi berilgan bo‘lsin:

$$\frac{x-x_1}{m_1} = \frac{y-y_1}{n_1} = \frac{z-z_1}{p_1}, \quad \vec{S}_1(m_1, n_1, p_1)$$

$$\frac{x-x_2}{m_2} = \frac{y-y_2}{n_2} = \frac{z-z_2}{p_2}, \quad \vec{S}_2(m_2, n_2, p_2)$$

ikki to‘g‘ri chiziqlar orasidagi burchak, ularning yo‘naltiruvchi vektor orasidagi burchak orqali ifodalanadi, shu sabab ikki vektorning skalyar ko‘paytmasidan foydalanib yozamiz:

$$\cos\varphi = \frac{\vec{S}_1 \cdot \vec{S}_2}{|\vec{S}_1| \cdot |\vec{S}_2|} = \frac{m_1 m_2 + n_1 n_2 + p_1 p_2}{\sqrt{m_1^2 + n_1^2 + p_1^2} \sqrt{m_2^2 + n_2^2 + p_2^2}} \quad (5)$$

**Xususiy holda:**

a) agar  $\varphi = 0$  bo'lsa  $\vec{S}_1$  va  $\vec{S}_2$  vektor kollinear bo'ladi, ya'ni

$\vec{S}_1 = \gamma \vec{S}_2$  tenglik o'rinli bo'ladi, bu erda

$$\gamma = \frac{\vec{S}_1}{\vec{S}_2}; \quad \frac{m_1}{m_2} = \frac{n_1}{n_2} = \frac{p_1}{p_2} \quad (6)$$

to'g'ri chiziqlarning parallellik sharti kelib chiqadi

b) agar  $\varphi = 90^\circ$  bo'lsa,  $\cos 90^\circ = 0$  bo'lgani uchun (5) tenglikdan

$$m_1 m_2 + n_1 n_2 + p_1 p_2 = 0 \quad (7)$$

to'g'ri chiziqlarning perpendikulyarlik sharti kelib chiqadi.

4°. Fazoda to'g'ri chiziqning umumiy tenglamasi

$$\begin{cases} A_1 x + B_1 y + C_1 z + D_1 = 0 & \vec{n}_1(A_1, B_1, C_1) \\ A_2 x + B_2 y + C_2 z + D_2 = 0, & \vec{n}_2(A_2, B_2, C_2) \end{cases} \quad (8)$$

ikkita tekislikning kesishishi natijasida to'g'ri chiziq hosil bo'ladi.

To'g'ri chiziqning yo'naltiruvchi vektori tekisliklarning normal vektorlariga perpendikulyar bo'ladi, shu sabab vektor ko'paytmadan

$\vec{S} = \vec{n}_1 \times \vec{n}_2$  yo'naltiruvchi vektorning koordinatalarini aniqlash mumkin

va to'g'ri chiziqdan ixtiyoriy nuqta olamiz:

$$\vec{S} = \vec{n}_1 \times \vec{n}_2 = \begin{vmatrix} \vec{i} & \vec{j} & \vec{k} \\ A_1 & B_1 & C_1 \\ A_2 & B_2 & C_2 \end{vmatrix} = m\vec{i} + n\vec{j} + p\vec{k}, \quad \vec{S}(m, n, p) \quad (9)$$

Tekisliklar sistemasini yechib  $M_1(x_1, y_1, z_1)$  nuqta koordinatalari

topiladi va to'g'ri chiziqning kanonik tenglamasi yoziladi

$$\frac{x - x_1}{m} = \frac{y - y_1}{n} = \frac{z - z_1}{p}$$

5°. Berilgan nuqtadan to‘g‘ri chiziqqacha bo‘lgan masofa

$$d = \frac{|\overrightarrow{M_1M_2} \cdot \vec{S}|}{|\vec{S}|} \quad (10)$$

formula bilan aniqlanadi.

$M_2(x_2, y_2, z_2)$  nuqtadan  $\frac{x-x_1}{m} = \frac{y-y_1}{n} = \frac{z-z_1}{p}$  to‘g‘ri chiziqqacha

masofani topish uchun  $\overrightarrow{M_1M_2} = (x_2 - x_1)\vec{i} + (y_2 - y_1)\vec{j} + (z_2 - z_1)\vec{k}$  va  $\vec{S} = m\vec{i} + n\vec{j} + p\vec{k}$  vektorlarning vektor ko‘paytmasining modulini topamiz:

$$\begin{aligned} |\overrightarrow{M_1M_2} \cdot \vec{S}| = \\ \sqrt{\left| \frac{y_2 - y_1}{n} \cdot \frac{z_2 - z_1}{p} \right| + \left| \frac{x_2 - x_1}{m} \cdot \frac{z_2 - z_1}{p} \right| + \left| \frac{x_2 - x_1}{m} \cdot \frac{y_2 - y_1}{n} \right|} \end{aligned} \quad (11)$$

va vektor moduli  $|\vec{S}| = \sqrt{m^2 + n^2 + p^2}$  ni topamiz va (10) formulaga qo‘ysak nuqtadan to‘g‘ri chiziqqacha bo‘lgan masofa kelib chiqadi.

**3-misol.** Piramida uchining koordinatalari berilgan:

$$A_1(3; 2; -2), A_2(6; -1; 7), A_3(1; 3; 5), A_4(-3; 0; 4)$$

- 1)  $A_1A_2$  va  $A_1A_4$  qirralarining tenglamasini tuzing;
  - 2)  $A_1A_2$  va  $A_1A_4$  qirralar orasidagi burchakni toping;
  - 3)  $A_3$  nuqtadan  $A_1A_4$  to‘g‘ri chiziqqacha bo‘lgan masofani toping;
  - 4) To‘g‘ri chiziqning kanonik tenglamasini tuzing;
  - 5) Piramidaning  $A_1A_2A_4$  yon yog‘ining yuzini toping;
  - 6) Piramidaning hajmini toping;
- 1)  $A_1A_2$  va  $A_1A_4$  qirralarining tenglamasini tuzish uchun (4)

formuladan foydalanamiz:

$$A_1A_2: \frac{x-3}{6-3} = \frac{y-2}{-1-2} = \frac{z+2}{7+2} \Rightarrow \frac{x-3}{-3} = \frac{y-2}{-3} = \frac{z+2}{9}$$

$A_1A_2$  to'g'ri chiziq tenglamasi bo'ladi, xuddi shuningdek  $A_1A_4$  qirra tenglamasini tuzamiz:

$$A_1A_4: \frac{x-3}{-3-3} = \frac{y-2}{0-2} = \frac{z+2}{4+2} \Rightarrow \frac{x-3}{-6} = \frac{y-2}{-2} = \frac{z+2}{6}$$

bu  $A_1A_4$  to'g'ri chiziq tenglamasi bo'ladi.

2)  $A_1A_2$  va  $A_1A_4$  qirralar orasidagi burchakni topamiz, bu to'g'ri chiziqlar orasidagi burchakshu to'g'ri chiziqlarning yo'naltiruvchi vektorlari orasidagi burchak bilan mos bo'ladi, shu sabab ikki vektor orasidagi burchakni (5) formuladan foydalanib topiladi:

$A_1A_2$  to'g'ri chiziqning yo'naltiruvchi vektori  $\vec{S}_1(3; -3; 9)$ ;

$A_1A_4$  to'g'ri chiziqning yo'naltiruvchi vektori esa  $\vec{S}_2(-6; -2; 6)$  ga teng.

(5) formulaga asosan:

$$\begin{aligned} \cos\varphi &= \frac{\vec{S}_1 \cdot \vec{S}_2}{|\vec{S}_1| \cdot |\vec{S}_2|} = \frac{3 \cdot (-5) + (-3) \cdot (-2) + 9 \cdot 6}{\sqrt{3^2 + (-3)^2 + 9^2} \sqrt{(-6)^2 + (-2)^2 + 6^2}} = \\ &= \frac{-18 + 6 + 54}{\sqrt{9 + 9 + 81} \sqrt{36 + 4 + 36}} = \frac{42}{\sqrt{99} \cdot \sqrt{76}} = \frac{42}{3\sqrt{11} \cdot 2\sqrt{19}} \\ &= \frac{7}{\sqrt{209}} \end{aligned}$$

$$\varphi = \arccos \frac{7}{\sqrt{209}}$$

3)  $A_3(1; 3; 5)$  nuqtadan  $A_1A_4$  to'g'ri chiziqqacha bo'lgan masofani hisoblaymiz. Buning uchun (10) formuladan foydalanamiz. (10) formulaning suratidagi ifoda  $\overline{M_1M_2} \times \vec{S}$  vektor ko'paytmaning modulidan iborat, bu qiymat (11) tenglik yordamida hisoblanadi:

$$\begin{aligned}\overrightarrow{M_1M_2} &= \overrightarrow{A_1A_3} = (1 - 3; 3 - 2; 5 + 2) = (-2; 1; 7) \Rightarrow \vec{S} \\ &= (-6; -2; 6)\end{aligned}$$

$$\begin{aligned}|\overrightarrow{A_1A_3} \times \vec{S}| &= \sqrt{\begin{vmatrix} 1 & 7 \\ -2 & 6 \end{vmatrix}^2 + \begin{vmatrix} -2 & 7 \\ -6 & 6 \end{vmatrix}^2 + \begin{vmatrix} 1 & 7 \\ -2 & 6 \end{vmatrix}^2} \\ &= \sqrt{(6 + 19)^2 + (-12 + 92)^2 + (9 + 6)^2} \\ &= \sqrt{20^2 + 90^2 + 10^2} = 10\sqrt{4 + 9 + 1} = 10\sqrt{14}\end{aligned}$$

Yoʻnaltiruvchi vektor uzunligini topamiz:

$$|\vec{S}| = \sqrt{(-6)^2 + (-2)^2 + 6^2} = \sqrt{36 + 4 + 36} = \sqrt{76} = 2\sqrt{19}$$

Bu koʻpaytmalarni (10) formulaga keltirib berilgan nuqtadan toʻgʻri chiziqqa boʻlgan masofani topamiz:

$$d = \frac{|\overrightarrow{M_1M_2} \cdot \vec{S}|}{|\vec{S}|} = \frac{10\sqrt{14}}{\sqrt{19}} = 10 \sqrt{\frac{14}{19}} \approx 10 \cdot 0,86 \approx 8,6$$

4) Toʻgʻri chiziqning umumiy tenglamasini kanonik koʻrinishga keltirish uchun

$$\begin{cases} 10x + 13y + z - 54 = 0 \\ 3y + z - 4 = 0 \end{cases} \quad \begin{aligned} \vec{n}_1 &= (10; 13; 1) \\ \vec{n}_2 &= (0; 3; 1) \end{aligned}$$

$$\begin{cases} 10x + 13y + z - 54 = 0 \\ 3y + z = 4 \end{cases} \Rightarrow \begin{cases} 10x + 13y = 54 - z \\ 3y = 4 - z \end{cases}$$

oʻzgaruvchi  $z$ ga ixtiyoriy qiymat beramiz, masalan,  $z = 4$  qiymat

bersak, sistema  $\begin{cases} 10x + 13y = 50 \\ 3y = 0 \end{cases}$  koʻrinishiga keladi, bu yerdan  $y = 0$

va  $x = 5$  ekanligi maʼlum boʻladi.  $M(5; 0; 4)$  nuqta toʻgʻri chiziqda yotuvchi ixtiyoriy nuqta boʻladi yoʻnaltiruvchi vektorni  $\vec{n}_1$  va  $\vec{n}_2$  vektorlarning vektor koʻpaytmasidan topamiz, yaʼni

$$\vec{S} = \vec{n}_1 \times \vec{n}_2 = \begin{vmatrix} \vec{i} & \vec{j} & \vec{k} \\ 10 & 13 & 1 \\ 0 & 3 & 1 \end{vmatrix} = (13 - 3)\vec{i} - (10 - 0)\vec{j} + (30 - 0)\vec{k}$$

$$\vec{S} = 10\vec{i} - 10\vec{j} + 30\vec{k}$$

To'g'ri chiziqning kanonik tenglamasini yozamiz:

$$\frac{x - 5}{10} = \frac{y}{-10} = \frac{z - 4}{30}$$

5) Piramidaning  $A_1A_2A_4$  yon yog'ining yuzini hisoblash uchun  $A_1A_2$  va  $A_1A_4$  qirra uzunliklarini topamiz, buning uchun ikki nuqta orasidagi masofa  $A_1A_2 = \sqrt{(x_2 - x_1)^2 + (y_2 - y_1)^2 + (z_2 - z_1)^2}$  formulasidan foydalanamiz:

$$A_1A_2 = \sqrt{(6 - 3)^2 + (-1 - 2)^2 + (7 + 2)^2} = \sqrt{3^2 + (-3)^2 + 9^2}$$

$$= \sqrt{9 + 9 + 81} = \sqrt{99}$$

$$A_1A_4 = \sqrt{(-3 - 3)^2 + (0 - 2)^2 + (4 + 2)^2} = \sqrt{(-6)^2 + (-2)^2 + 6^2}$$

$$= \sqrt{36 + 4 + 36} = \sqrt{79}$$

Endi ular orasidagi burchak sinusini topamiz. Bizga  $\cos\varphi = \frac{7}{\sqrt{209}}$

ma'lum bo'lgani uchun

$$\sin\varphi = \sqrt{1 - \cos^2\alpha} = \sqrt{1 - \left(\frac{7}{\sqrt{209}}\right)^2} = \sqrt{1 - \frac{49}{209}} = \sqrt{\frac{160}{209}} = \frac{4\sqrt{10}}{\sqrt{209}}$$

Bizga ma'lum bo'lgan formuladan foydalanib uchuburchak yuzini hisoblaymiz:

$$S = \frac{1}{2} \cdot A_1A_2 \cdot A_1A_4 \cdot \sin\varphi = \frac{1}{2} \cdot 3\sqrt{11} \cdot 2\sqrt{19} \cdot \frac{4\sqrt{10}}{\sqrt{19 \cdot 11}} = 12\sqrt{10} \text{ kv bir.}$$

Piramidaning  $A_1A_2A_4$  yon yog'inining yuzi hisoblandi.

6) Piramidaning hajmini hisoblash uchun bizga ma'lum bo'lgan formuladan foydalanamiz:



$$V = \frac{1}{6} \cdot S \cdot h = \frac{1}{6} \cdot 12\sqrt{10} \cdot \sqrt{10} = \frac{1}{6} \cdot 12 \cdot 10 = 20 \text{ kub birlik.}$$

### 3.4. To'g'ri chiziq bilan tekislik

1°. To'g'ri chiziqning kanonik tenglamasi va tekislikning umumiy tenglamasi berilgan bo'lsin:

$$\frac{x - x_1}{m} = \frac{y - y_1}{n} = \frac{z - z_1}{p}, \quad \vec{S} = (m, n, p)$$

$$Ax + By + Cz + D = 0, \quad \vec{n} = (A, B, C)$$

ular orasidagi burchakni topamiz:

$$\cos\alpha = \cos(90^\circ - \varphi) = \sin\varphi = \frac{\vec{n} \cdot \vec{S}}{|\vec{n}| \cdot |\vec{S}|} = \frac{Am + Bn + Cp}{\sqrt{A^2 + B^2 + C^2} \cdot \sqrt{m^2 + n^2 + p^2}} \quad (12)$$

Xususiy holda:

a)  $\varphi = 0^\circ$  bo'lsa

$$Am + Bn + Cp = 0 \quad (13)$$

to'g'ri chiziq va tekislik o'zaro parallel bo'ladi:

b)  $\varphi = 90^\circ$  bo'lsa

$$\frac{A}{m} = \frac{B}{n} = \frac{C}{p} \quad (14)$$

to'g'ri chiziq va tekislik o'zaro perendikulyar bo'ladi.

2°. To'g'ri chiziq bilan tekislikning kesishish nuqtasini topish uchun to'g'ri chiziqning parametrik tenglamasidan foydalanamiz.

$$\begin{cases} x = x_1 + mt \\ y = y_1 + nt \\ z = z_1 + pt \end{cases} \quad (15)$$

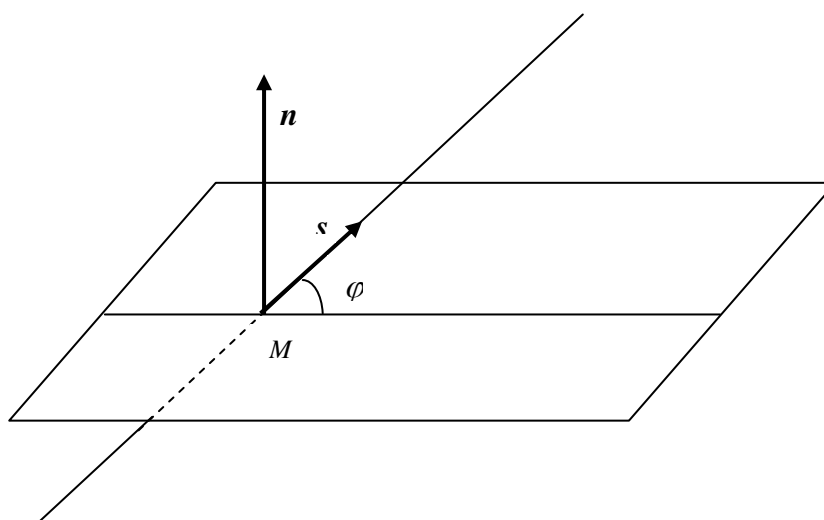
bularni tekislikning umumiy tenglamasiga qo'yib parametr  $t$  ni topamiz:

$$A(x_1 + mt) + B(y_1 + nt) + C(z_1 + pt) + D = 0$$

bu erdan

$$t = -\frac{Ax_1 + By_1 + Cz_1 + D}{Am + Bn + Cp} \quad (16)$$

ga teng bo'ladi. (16) ni (15) ga qo'yib kesishish nuqtasining koordinatalari topiladi(4.2-rasm).



3.2-rasm.

3°. Ikkita to'g'ri chiziqlarning bir tekislikda yotish shartini aniqlaymiz:

Quyidagi to'g'ri chiziqlar berilgan bo'lsin:

$$\frac{x - x_1}{m_1} = \frac{y - y_1}{n_1} = \frac{z - z_1}{p_1} \vec{S}_1 = (m_1; n_1; p_1)$$

$$\frac{x - x_2}{m_2} = \frac{y - y_2}{n_2} = \frac{z - z_2}{p_2} \vec{S}_2 = (m_2; n_2; p_2)$$

va  $\overrightarrow{M_1M_2} = (x_2 - x_1, y_2 - y_1, z_2 - z_1)$  vektorlarga egamiz, bu vektorlar bir tekislikda yotsa, ya'ni ularning vektor-skalyar (aralash) ko'paytmasi nolga teng bo'lishi kerak

$$\overrightarrow{M_1M_2} \cdot \vec{S}_1 \cdot \vec{S}_2 = 0 \text{ ya'ni } \begin{vmatrix} x_2 - x_1 & y_2 - y_1 & z_2 - z_1 \\ m_1 & n_1 & p_1 \\ m_2 & n_2 & p_2 \end{vmatrix} = 0 \quad (17)$$

Bu tenglik ikki to'g'ri chiziqning bir tekislikda yotish sharti bo'ladi.

## To'g'ri chiziq va tekislikka doir misol

**4-misol.** Piramida uchining koordinatalari berilgan:

$$A_1(3; 2; -2), \quad A_2(6; -1; 7), \quad A_3(1; 3; 5), \quad A_4(-3; 0; 4)$$

1)  $A_1A_3$  to'g'ri chiziq bilan  $A_1A_2A_4$  tekislik orasidagi burchak topilsin;

2)  $A_3$  o'tuvchi va  $A_1A_2A_3$  tekislikka perpendikulyar bo'lgan to'g'ri chiziq tenglamasi tuzilsin;

3)  $\frac{x+3}{10} = \frac{y}{13} = \frac{z-4}{1}$  to'g'ri chiziq bilan  $10x + 13y + z - 54 = 0$

tekislikning kesishish nuqtasi topilsin;

**Yechish:**

1)  $A_1A_3$  to'g'ri chiziq bilan  $A_1A_2A_4$  tekislik orasidagi burchak topish uchun  $A_1A_3$  to'g'ri chiziqning kanonik tenglamasini tuzamiz:

$$\frac{x-3}{1-3} = \frac{y-2}{3-2} = \frac{z+2}{5+2} \Rightarrow \frac{x-3}{-2} = \frac{y-2}{1} = \frac{z+2}{7} \vec{S}(-2; 1; 7)$$

$A_1A_2A_4$  tekislik tenglamasi esa:  $3y + z - 4 = 0$ ,  $\vec{n}_1(0; 3; 1)$  – normal vektori

$$\sin\varphi = \frac{0 \cdot (-2) + 3 \cdot 1 + 1 \cdot 7}{\sqrt{0^2 + 3^2 + 1^2} \cdot \sqrt{(-2)^2 + 1^2 + 7^2}} = \frac{10}{\sqrt{10} \cdot \sqrt{54}} = \frac{\sqrt{10}}{3\sqrt{6}} = \frac{1}{3} \sqrt{\frac{5}{3}}$$

$$\varphi = \arcsin \frac{1}{3} \sqrt{\frac{5}{3}}$$

2)  $A_3(-1; 0; 4)$  o'tuvchi va  $A_1A_2A_3$  tekislikka perpendikulyar bo'lgan to'g'ri chiziq tenglamasi tuziladi:  $\frac{A}{m} = \frac{B}{n} = \frac{C}{p}$

to'g'ri chiziq va tekislikning perpendikulyarlik shartidan topamiz:

$$A = 10, \quad B = 13, \quad C = 1$$

$$\frac{m}{10} = \frac{n}{13} = \frac{p}{1} = A, \quad m = \gamma 10, \quad n = \gamma 13, \quad p = \gamma$$

$$\frac{x+3}{10\gamma} = \frac{y-0}{13\gamma} = \frac{z-4}{\gamma} \Rightarrow \frac{x+3}{10} = \frac{y}{13} = \frac{z-4}{1}$$

$$3) \frac{x+3}{10} = \frac{y}{13} = \frac{z-4}{1} \text{ to'g'ri chiziq bilan } 10x + 13y + z - 54 = 0$$

tekislikning kesishish nuqtasi topish uchun to'g'ri chiziqning kanonik tenglamasini parametrik ko'rinishga keltiramiz:

$$\frac{x+3}{10} = \frac{y}{13} = \frac{z-4}{1} = t \Rightarrow \begin{cases} x = -3 + 10t \\ y = 13t \\ z = 4 + t \end{cases}$$

Bu koordinatalarni  $10x + 13y + z - 54 = 0$  tekislik tenglamasiga qo'yamiz:  $(-3 + 10t) \cdot 10 + 13 \cdot 13t + 4 + t - 54 = 0$

$$100t + 159t + t - 30 - 54 + 4 = 0$$

$$270t = 80 \Rightarrow t = \frac{8}{27}, \text{ bundan } t \text{ ning qiymatini parametrik}$$

tenglamalarga qo'yib, topamiz:  $x = -3 + 10 \cdot \frac{8}{27} = -\frac{1}{27},$

$$y = 13 \cdot \frac{8}{27} = \frac{104}{27},$$

$$z = 4 + \frac{8}{27} = \frac{116}{27}$$

Demak, to'g'ri chiziq bilan tekislik kesishish nuqtasi

$M(-\frac{1}{27}; \frac{104}{27}; \frac{116}{27})$  ga teng.

## TOPSHIRIQ VARIANLARI

**Hisob topshiriqlarini qabul qilishda beriladigan nazariy savollar**

1. Tekislikda to'g'ri chiziq tenglamalari.
2. Ikki to'g'ri chiziq orasidagi burchak, ularning parallellik va perpendikulyarlik shartlari.
3. Tekislikning turli xil tenglamalari.
4. Ikki tekislik orasidagi burchak, ularning parallellik va perpendikulyarlik shartlari.
5. Fazoda to'g'ri chiziq tenglamalari.
6. To'g'ri chiziq va tekislik orasidagi burchak, ularning parallellik va perpendikulyarlik shartlari.

**To'g'ri chiziq va tekislik bo'limidan topshiriq variantlari.**

### 1-TOPSHIRIQ.

*A, B va C nutalar uchburchak uchlari bo'lsa, quyidagilarni aniqlang:*

- a) AB tomoni tenglamasi;*
- b) CN balandlik tenglamasi;*
- c) AM mediana tenglamasi;*
- d) CN balandlik va AM medianalar kesishish nuqtasi;*
- e) C nuqtadan o'tubchi va AB tomonga parallel to'g'ri chiziq tenglamasi;*
- f) C nuqtadan AB tomongacha bo'gan masofa.*

1.  $A(3;4), B(1;2), C(-2;-3)$
2.  $A(-7;-5), B(-2;5), C(3;-2)$
3.  $A(1;3), B(-1;4), C(-2;-3)$
4.  $A(2;4), B(-3;-2), C(3;5)$

5.  $A(-5;-4), B(1;4), C(3;2)$
6.  $A(3;4), B(-2;3), C(4;-3)$
7.  $A(-4;6), B(3;-5), C(2;6)$
8.  $A(7;5), B(-4;-5), C(2;-3)$
9.  $A(3;-2), B(-6;-2), C(1;1)$
10.  $A(-5;-4), B(7;3), C(6;-2)$
11.  $A(3;-5), B(-4;2), C(1;5)$
12.  $A(7;4), B(1;-2), C(-5;-3)$
13.  $A(-4;-7), B(-4;-5), C(2;-3)$
14.  $A(-4;-5), B(3;1), C(5;7)$
15.  $A(5;2), B(-3;5), C(1;-5)$
16.  $A(-6;4), B(5;-7), C(4;2)$
17.  $A(5;3), B(-3;-4), C(5;-6)$
18.  $A(5;-4), B(-4;-6), C(3;2)$
19.  $A(-7;-6), B(5;1), C(8;-4)$
20.  $A(7;-1), B(1;7), C(3;7)$
21.  $A(5;2), B(7;-6), C(-7;-6)$
22.  $A(-2;-5), B(-6;-7), C(4;-5)$
23.  $A(-6;-3), B(5;1), C(3;5)$
24.  $A(7;4), B(-5;3), C(1;-5)$
25.  $A(-8;2), B(3;-5), C(2;4)$
26.  $A(4;3), B(2;7), C(-4;-2)$
27.  $A(-9;-7), B(-4;3), C(5;-4)$
28.  $A(3;5), B(-3;2), C(-3;-2)$
29.  $A(4;2), B(-5;-4), C(5;7)$
30.  $A(-4;-2), B(2;5), C(6;3)$

## 2 -TOPSHIRIQ.

$A_1(x_1, y_1), A_2(x_2, y_2), A_3(x_3, y_3)$  va  $A_4(x_4, y_4)$  nuqtalar berilgan.

Quyidagi tenglamalar tuzilsin:

a)  $A_1A_2A_3$  tekislik;

b)  $A_1A_2$  to'g'ri chiziq;

c)  $A_1A_2A_3$  tekislikka perpendikulyar bo'lgan  $A_4M$  to'g'ri chiziq;

d)  $A_1A_2$  to'g'ri chiziqqa parallel  $A_3N$  to'g'ri chiziq;

e)  $A_4$  nuqtadan o'tib,  $A_1A_2$  to'g'ri chiziqqa perpendikulyar bo'lgan tekislik;

hisoblansin:

f)  $A_1A_4$  to'g'ri chiziq bilan  $A_1A_2A_3$  tekislik orasidagi burchak sinusi;

g) Oxy koordinata tekisligi bilan  $A_1A_2A_3$  tekislik orasidagi burchakning kosinusi.

1.  $A_1(3, 1, 4), A_2(-1, 6, 1), A_3(-1, 1, 6)A_4(0, 4, -1)$ .

2.  $A_1(3, -1, 2), A_2(-1, 0, 1), A_3(1, 7, 3), A_4(8, 5, 8)$ .

3.  $A_1(3, 5, 4), A_2(5, 8, 3), A_3(1, 2, -2), A_4(-1, 0, 2)$ .

4.  $A_1(2, 4, 3), A_2(1, 1, 5), A_3(4, 9, 3), A_4(3, 6, 7)$ .

5.  $A_1(9, 5, 5), A_2(-3, 7, 1), A_3(5, 7, 8), A_4(6, 9, 2)$

6.  $A_1(0, 7, 1), A_2(2, -1, 5), A_3(1, 6, 3), A_4(3, -9, 8)$ .

7.  $A_1(5, 5, 4), A_2(1, -1, 4), A_3(3, 5, 1), A_4(5, 8, -1)$ .

8.  $A_1(6, 1, 1), A_2(4, 6, 6), A_3(4, 2, 0), A_4(1, 2, 6)$ .

9.  $A_1(7, 5, 3), A_2(9, 4, 4), A_3(4, 5, 7), A_4(7, 9, 6)$ .

10.  $A_1(6, 8, 2), A_2(5, 4, 7)A_3(2, 4, 7)A_4(7, 3, 7)$ .

11.  $A_1(4, 2, 5), A_2(0, 7, 1), A_3(0, 2, 7), A_4(1, 5, 0)$ .

12.  $A_1(4, 4, 10), A_2(7, 10, 2), A_3(2, 8, 4), A_4(9, 6, 9)$ .

13.  $A_1(4, 6, 5), A_2(6, 9, 4), A_3(2, 10, 10), A_4(7, 5, 9)$ .

14.  $A_1(3, 5, 4), A_2(8, 7, 4), A_3(5, 10, 4), A_4(4, 7, 8).$
15.  $A_1(10, 9, 6), A_2(2, 8, 2), A_3(9, 8, 9), A_4(7, 10, 3).$
16.  $A_1(1, 8, 2), A_2(5, 2, 6), A_3(5, 7, 4), A_4(4, 10, 9).$
17.  $A_1(6, 6, 5), A_2(4, 9, 5), A_3(4, 6, 11), A_4(6, 9, 3).$
18.  $A_1(7, 2, 2), A_2(-5, 7, -7), A_3(5, -3, 1), A_4(2, 3, 7).$
19.  $A_1(8, -6, 4), A_2(10, 5, -5), A_3(5, 6, -8), A_4(8, 10, 7).$
20.  $A_1(1, -1, 3), A_2(6, 5, 8), A_3(3, 5, 8), A_4(8, 4, 1).$
21.  $A_1(1, -2, 7), A_2(4, 2, 10), A_3(2, 3, 5), A_4(5, 3, 7).$
22.  $A_1(4, 2, 10), A_2(1, 2, 0), A_3(3, 5, 7), A_4(2, -3, 5).$
23.  $A_1(2, 3, 5), A_2(5, 3, -7), A_3(1, 2, 7), A_4(4, 2, 0).$
24.  $A_1(5, 3, 7), A_2(-2, 3, 5), A_3(4, 2, 10), A_4(1, 2, 7).$
25.  $A_1(4, 3, 5), A_2(1, 9, 7), A_3(0, 2, 0), A_4(5, 3, 10).$
26.  $A_1(3, 2, 5), A_2(4, 0, 6), A_3(2, 6, 5), A_4(6, 4, -1).$
27.  $A_1(2, 1, 6), A_2(1, 4, 9), A_3(2, -5, 8), A_4(5, 4, 2).$
28.  $A_1(2, 1, 7), A_2(3, 3, 6), A_3(2, -3, 9), A_4(1, 2, 5).$
29.  $A_1(2, -1, 7), A_2(6, 3, 1), A_3(3, 2, 8), A_4(2, -3, 7).$
30.  $A_1(0, 4, 5), A_2(3, -2, 1), A_3(4, 5, 6), A_4(3, 3, 2).$



### 3-TOPSHIRIQ.

#### Quyidagi masalalar yechilsin.

1. Berilgan  $M(-2,7,3)$  nuqtadan o'tib,  $x - 4y + 5z - 1 = 0$  tekislikka parallel bo'lgan tekislikning koordinata o'qlaridan kesgan kesmalarining qiymatlari aniqlansin (Javob:  $-\frac{1}{15}, \frac{4}{15}, -\frac{1}{3}$ ).

2. Uchlari  $M_1(1,5,6)$  va  $M_2(-1,7,10)$  nuqtalarda bo'lgan  $M_1M_2$  kesmaning o'rtasidan o'tib shu kesmaga perpendikulyar bo'lgan tekislik tenglamasi tuzilsin (Javob:  $x - y - 2z + 22 = 0$ ).

3.  $M(2,0,-0,5)$  nuqtadan  $4x - 4y + 2z + 17 = 0$  tekislikkacha bo'lgan masofa topilsin (Javob:  $d = 4$ ).

4.  $A(2,-3,5)$  nuqtadan o'tib,  $Oxy$  tekislikka paralel bo'lgan tekislik tenglamasi tuzilsin (Javob:  $z - 5 = 0$ ).

5.  $A(2,5,-1)$  nuqta va  $Ox$  o'qi orqali o'tuvchi tekislik tenglamasi tuzilsin (Javob:  $y + 5z = 0$ ).

6.  $A(2,5,-1)$  va  $B(-3,1,3)$  nuqtalardan o'tuvchi hamda  $Oy$  o'qiga parallel bo'lgan tekislik tenglamasi tuzilsin (Javob:  $4x + 5z - 3 = 0$ ).

7.  $A(3,4,0)$  nuqta va  $\frac{x-2}{1} = \frac{y-3}{2} = \frac{z+1}{2}$  to'g'ri chiziq orqali o'tuvchi tekislik tenglamasi tuzilsin (Javob:  $y - z - 4 = 0$ ).

8. O'zaro parallel bo'lgan  $\frac{x-3}{2} = \frac{y}{1} = \frac{z-1}{2}$  va  $\frac{x+1}{2} = \frac{y-1}{1} = \frac{z}{2}$  to'g'ri chiziqlar orqali o'tadigan tekislik tenglamasi tuzilsin. (Javob:  $x + 2y - 2z - 1 = 0$ ).

9.  $A(3,2,-5)$  nuqta bilan  $Ox$  o'qi orqali o'tuvchi tekislikning  $3x - y - 7z + 9 = 0$  tekislik bilan kesishishidan hosil bo'lgan to'g'ri chiziqning umumiy tenglamasi tuzilsin. (Javob:  $3x - y - 7z + 9 = 0, 5y + 2z = 0$ ).

**10.** Agar tekislik  $M(6, -10, 1)$  nuqtadan o'tib,  $Ox$  va  $Oz$  o'qlardan mos ravshida  $a = -3$  va  $c = 2$  kesmalar kesadigan bo'lsa, uning kesmalar bo'yicha tenglamasi tuzilsin (Javob:  $\frac{x}{-3} + \frac{y}{-4} + \frac{z}{2} = 1$ )

**11.**  $A(2, 3, -4)$  nuqtadan o'tib,  $\vec{a} = (4, 1, -1)$  va  $\vec{b} = (2, -1, 2)$  vektorlarga parallel bo'lgan tekislik tenglamasi tuzilsin (Javob:  $x - 10y - 6z + 4 = 0$ ).

**12.**  $A(1, 1, 0)$  va  $B(2, -1, -1)$  nuqtalardan o'tuvchi hamda  $5x + 2y + 3z - 7 = 0$  tekislikka perpendikulyar bo'lgan tekislik tenglamasi tuzilsin.

(Javob:  $x + 2y - 3z - 3 = 0$ ).

**13.** Koordinata boshidan o'tib,  $2x - 3y + z - 1 = 0$  va  $x - y + 5z + 3 = 0$  tekisliklarga perpendikulyar bo'lgan tekislik tenglamasi tuzilsin

(Javob:  $14x + 9y - z = 0$ ).

**14.**  $A(3, -1, 2)$  va  $B(2, 1, 4)$  nuqtalardan o'tuvchi hamda  $\vec{a} = (5, -2, -1)$  vektorga parallel bo'lgan tekislikning tenglamasi tuzilsin. (Javob:  $2x + 9y - 8z + 19 = 0$ ).

**15.** Agar  $A(5, -2, 3)$  va  $B(1, -3, 5)$  nuqtalar  $\overrightarrow{AB}$  vektorning boshi va oxiri bo'lsa, koordinata boshidan o'tib,  $\overrightarrow{AB}$  vektorga perpendikulyar bo'lgan tekislik tenglamasi tuzilsin. (Javob:  $4x + y - 2z = 0$ )

**16.**  $M(2, -3, 3)$  nuqtadan o'tib,  $3x + y - 3z = 0$  tekislikka parallel bo'lgan tekislikning koordinata o'qlaridan kesgan kesmalarining qiymatlari topilsin. (Javob:  $-2, -6, 2$ .)

17. Uchlari  $M_1(2,3,-4)$  va  $M_2(-1,2,-3)$  nuqtalarda bo'lgan  $M_1M_2$  kesmaga perpendikulyar bo'lib,  $M(1,-1,2)$  nuqtadan o'tuvchi tekislik tenglamasi tuzilsin. (Javob:  $3x + u - z = 0$ ).

18.  $\frac{x}{6} = \frac{y-3}{8} = \frac{z-1}{9}$  to'g'ri chiziqning  $x + 3u - 2z - 1 = 0$  tekislikka parallel ekanligi hamda  $x = t + 7, y = t - 2, z = 2t + 1$  to'g'ri chiziqning ushbu tekislikda yotishi ko'rsatilsin.

19. Koordinata tekisligi  $Oxz$  ga parallel bo'lib,  $A(3,-4,1)$  nuqtadan o'tuvchi tekislikning umumiy tenglamasi yozilsin (Javob:  $y + 4 = 0$ ).

20. Ordinata o'qi bo'yicha hamda  $M(3,-5,2)$  nuqtadan o'tuvchi tekislik tenglamasi tuzilsin. (Javob:  $2x - 3z = 0$ ).

21.  $M(1,2,3)$  va  $N(-3,4,-5)$  nuqtalardan o'tib  $Oz$  o'qiga parallel bo'lgan tekislik tenglamasi tuzilsin (Javob:  $x + 2y - 5 = 0$ )

22.  $M(2,3,-1)$  nuqtadan hamda  $x = t - 3, y = 2t + 5, z = -3t + 1$  to'g'ri chiziqdan o'tuvchi tekislik tenglamasi tuzilsin (Javob:  $10x + 13y + 12z - 47 = 0$ ).

23.  $M(4,-3,1)$  nuqtaning  $x - 2y - z - 15 = 0$  tekislikdagi proyeksiyasi topilsin. (Javob:  $M_1(5,-5,0)$ ).

24.  $x - 4y + z - 1 = 0$  bilan  $2x + bu + 10z - 3 = 0$  tekisliklar b ning qanday qiymatida o'zaro perpendikulyar bo'ladilar? (Javob:  $b = 3$ ).

25. Koordinata o'qlaridan 0 dan farqli bir xil o'lchamdagi kesmalar kesadigan hamda  $M(2,-3,-4)$  nuqtadan o'tadigan tekislik tenglamasi tuzilsin.

(Javob:  $x + y + z + 5 = 0$ ).

**26.**  $\frac{x}{3} = \frac{y-5}{n} = \frac{z+5}{6}$  to'g'ri chiziq bilan  $ax + 2y - 2z - 7 = 0$

tekislik,  $n$  va  $a$  ning qanday qiymatlarida o'zaro perpendikulyar bo'ladi?  
(Javob:  $a = -1, n = -6$ ).

**27.** Agar tekislik  $A(2,3,-1)$  va  $B(1,1,4)$  nuqtalardan o'tib,  $x - 4y + 3z + 2 = 0$  tekislikka perpendikulyar bo'lsa, uning tenglamasi tuzilsin.  
(Javob:  $7x + 4y + 3z - 23 = 0$ ).

**28.** Ikkita  $x + 5y - z + 7 = 0$  va  $3x - y + 2z - 3 = 0$  tekisliklarga perpendikulyar bo'lgan va koordinata boshidan o'tadigan tekislik tenglamasi tuzilsin (Javob:  $9x - 5y - 16z = 0$ ).

**29.** Ikkita  $M(2,3,-5)$  va  $N(-1,1,-6)$  nuqtalardan o'tib,  $\vec{a} = (4,4,3)$  vektorga parallel bo'lgan tekislik tenglamasi tuzilsin.

**30.** Ikkita  $3x - 5y + cz - 3 = 0$  bilan  $x - 3 + 2z + 5 = 0$  tekisliklar  $c$  ning qanday qiymatiga o'zaro perpendikulyar bo'ladi?

#### 4 -TOPSHIRIQ.

Quyidagi masalalar yechilsin.

1)  $\frac{x-1}{6} = \frac{y+2}{2} = \frac{z}{-1}$  to'g'ri chiziq va  $\begin{cases} x - 2y + 2z - 8 = 0 \\ x + 6z - 6 = 0 \end{cases}$  to'g'ri chiziqlarning o'zaro parallel ekanliklari isbotlansin.

2)  $\frac{x+1}{2} = \frac{y+1}{-1} = \frac{z-3}{3}$  to'g'ri chiziq bilan  $2x + y - z = 0$  tekislikning o'zaro parallel ekanligi hamda  $\frac{x-2}{2} = \frac{y}{-1} = \frac{z-4}{3}$  to'g'ri chiziqning esa, ushbu tekislikda yotishi isbotlansin.

3) Koordinata o'qlari bilan mos ravishda  $60^0$ ,  $45^0$  va  $120^0$  li burchak tashkil etuvchi hamda  $M(1, -3, 3)$  nuqtadan o'tuvchi to'g'ri chiziq, tenglamasi tuzilsin. (Javob:  $\frac{x-1}{1} = \frac{y+3}{\sqrt{2}} = \frac{z-3}{-1}$ .)

4)  $\frac{x-1}{2} = \frac{y+2}{3} = \frac{z-1}{6}$  to'g'ri chiziqning  $\begin{cases} 2x + y - 4z + 2 = 0 \\ 4x - y - 5z + 4 = 0 \end{cases}$  to'g'ri chiziqqa perpendikulyar ekanligi isbotlansin.

5) Uchlari  $A(3, 6, -7)$ ,  $B(-5, 1, -4)$  va  $C(0, 2, 3)$  nuqtalarda bo'lgan uchburchakning  $S$  uchidan tushirilgan medianasining parametrik tenglamalari tuzilsin (Javob:  $x = 2t, y = -3t + 2, z = 17t + 3$ .)

6) Quyidagi  $\frac{x+2}{3} = \frac{y-1}{n} = \frac{z}{1}$  to'g'ri chiziq,  $n$  ning qanday qiymatida  $\begin{cases} x + y - z = 0 \\ x - y - 5z - 8 = 0 \end{cases}$  to'g'ri chiziqqa parallel bo'ladi? (Javob:  $n = -2$ ).

7)  $\frac{x-1}{1} = \frac{y+1}{-2} = \frac{z}{6}$  to'g'ri chiziq va  $2x + 3y + z - 1 = 0$  tekislikning kesishish nuqtasi topilsin (Javob:  $M(2, -3, 6)$ ).

8)  $P(3, 1, -1)$  nuqtaning  $x + 2y + 3z - 30 = 0$  tekislikdagi proyeksiyasi topilsin (Javob:  $P_1(5, 5, 5)$ ).

9) Ikkita  $3x - 5y + cz - 3 = 0$ ,  $x + 3y + 2z + 5 = 0$  tekislik  $c$  ning qanday qiymatida o'zaro perpendikulyardir? (Javob:  $c = 6$ ).

10)  $ax + 3y - 5z + 1 = 0$  tekislik  $a$  ning qanday qiymatida  $\frac{x-1}{4} = \frac{y+2}{3} = \frac{z}{1}$  to'g'ri chiziqqa parallel bo'ladi? (Javob:  $a = -1$ ).

11)  $m$  va  $c$  ning qanday qiymatlarida  $\frac{x-2}{m} = \frac{y+1}{4} = \frac{z-5}{-3}$  to'g'ri chiziq bilan  $3x - 2y + cz + 1 = 0$  tekislik o'zaro perpendikulyar bo'ladi? (Javob:  $m = -6$ ,  $c = 1,5$ ).

12) Koordinata boshidan o'tuvchi va  $x = 2t + 5$ ,  $y = -3t + 1$ ,  $z = -7t - 4$  to'g'ri chiziqqa parallel bo'lgan to'g'ri chiziq tenglamasi tuzilsin (Javob:  $\frac{x}{2} = \frac{y}{-3} = \frac{z}{-7}$ ).

13)  $A(0,0,2)$ ,  $B(4,2,5)$ , va  $C(12,6,11)$  nuqtalarning bitta to'g'ri chiziqda yotishi yoki yotmasliklari tekshirilsin (Javob: yotadi).

14) Berilgan  $M(2, -5, 3)$  nuqtadan o'tib  $\begin{cases} 2x - y + 3z - 1 = 0 \\ 5x + 4y - z - 7 = 0 \end{cases}$  to'g'ri chiziqqa parallel bo'lgan to'g'ri chiziq tenglamasi tuzilsin.

15) Berilgan  $M(2, -3, 4)$  nuqtadan o'tib  $\frac{x+2}{1} = \frac{y-3}{-1} = \frac{z+1}{1}$  va  $\frac{x+4}{2} = \frac{y}{1} = \frac{z-4}{-3}$  to'g'ri chiziqdarga perpendikulyar bo'lgan to'g'ri chiziq tenglamasi tuzilsin

16)  $ax + by + 6z - 7 = 0$  tekislik,  $a$  va  $b$  ning qanday qiymatlarida  $\frac{x-2}{2} = \frac{y+5}{-4} = \frac{z+1}{-9}$  to'g'ri chiziqqa perpendikulyar bo'ladi? (Javob:  $a = 4$ ,  $b = -8$ ).

17)  $\frac{x}{6} = \frac{y-3}{-8} = \frac{z-1}{-9}$  to'g'ri chiziqning  $x + 3y - 2z + 1 = 0$  tekislikka parallel ekanligi va  $x = t + 7$ ,  $y = t - 2$ ,  $z = 2t + 1$  to'g'ri chiziqning esa, ushbu tekislikda yotishi ko'rsatilsin.

18)  $k(-3, 1, -2)$  nuqtadan hamda  $Oz$  o'q orqali o'tuvchi tekislik tenglamasi tuzilsin (Javob:  $x + 3y = 0$ ).

19)  $\frac{x}{1} = \frac{y-1}{-2} = \frac{z}{3}$ ,  $\begin{cases} 3x + y - 5z + 1 = 0 \\ 2x + 3y - 8z + 3 = 0 \end{cases}$  to'g'ri chiziqlar o'zaro perpendikulyar ekanligi ko'rsatilsin.

20)  $d$  ning qanday qiymatida  $\begin{cases} 3x - y + 2z - 6 = 0 \\ x + 4y - z + d = 0 \end{cases}$  to'g'ri chiziq  $Oz$  o'qini kesadi? (Javob:  $d = 3$ ).

21) Ushbu  $\begin{cases} x = 2t + 5 \\ y = -t + 2 \\ z = pt - 7 \end{cases}$  va  $\begin{cases} x + 3y + z + 2 = 0 \\ x - y - 3z - 2 = 0 \end{cases}$  to'g'ri chiziqlar  $p$  ning qanday qiymatida parallel bo'ladi. (Javob:  $p = -5$ ).

22)  $\frac{x-7}{5} = \frac{y-1}{1} = \frac{z-5}{4}$  to'g'ri chiziq bilan  $3x - y + 2z - 8 = 0$  tekislikning kesishish nuqtasi topilsin. (Javob:  $M(2, 0, 1)$ ).

**23)** Berilgan  $A(2, -5, 3)$  nuqtadan o'tib  $Oxz$  tekislikka parallel bo'lgan tekislikning tenglamasi tuzilsin. (Javob:  $y + 5 = 0$ ).

**24)** Berilgan  $M(5, 3, 2)$  nuqtadan va  $Oy$  o'qi orqali o'tadigan tekislik bilan  $x + 2y - z + 5 = 0$  tekislikda kesishishidan hosil bo'lgan to'g'ri chiziqning umumiy tenglamasi tuzilsin.

**25)**  $b$  va  $d$  ning qanday qiymatlarida  $\begin{cases} x - 2y + z - 9 = 0 \\ 3x + by + z + d = 0 \end{cases}$  to'g'ri chiziq  $Oxy$  tekislikda yotadi? (Javob:  $b = -6, d = -27$ ).

**26)** Berilgan  $M_0(2, 3, 3)$  nuqtadan o'tib,  $\vec{a} = (-1, -3, 1)$  va  $\vec{b} = (4, 1, 6)$  vektorlarga parallel bo'lgan tekislik tenglamasi tuzilsin. (Javob:  $19x - 10y - 11z + 25 = 0$ ).

**27)**  $Ox$  o'qiga parallel bo'lib  $E(3, 4, 5)$  nuqtadan o'tuvchi to'g'ri chiziq tenglamasi tuzilsin. (Javob:  $\frac{x-3}{1} = \frac{y-4}{0} = \frac{z-5}{0}$ ).

**28)** Shunday bir to'g'ri chiziq tenglamasi tuzilsinki, u  $M(2, 3, 1)$  nuqtadan o'tib,  $\frac{x+1}{2} = \frac{y}{-1} = \frac{z-2}{3}$  to'g'ri chiziqqa perpendikulyar bo'lsin.

**29)** Berilgan  $M(1, -5, 3)$  nuqtadan o'tuvchi hamda  $\frac{x}{2} = \frac{y-2}{3} = \frac{z+1}{-1}$  to'g'ri chiziqqa perpendikulyar bo'lgan to'g'ri chiziqning kanonik tenglamasi yozilsin. (Javob:  $\frac{x-1}{5} = \frac{y+5}{-7} = \frac{z-3}{-11}$ ).

**30)**  $M(4, 3, 10)$  nuqtaga  $\frac{x-1}{2} = \frac{y-2}{4} = \frac{z-3}{5}$  to'g'ri chiziqqa nisbatan simmetrik nuqta topilsin (Javob:  $M_1(2, 9, 6)$ ).

## IV. MATEMATIK ANALIZGA KIRISH

### 4.1 KETMA-KETLIKLAR VA FUNKSIYALARNING LIMITLARI.

Aytaylik, biror  $\{x_n\}$  sonli ketma-ketlik qaralayotgan bo'lsin. Ta'rifga binoan, agar har qanday  $\varepsilon > 0$  son uchun Shunday bir  $N=N(\varepsilon) > 0$  butun son mavjud bo'lib, barcha  $n > N$  lar uchun  $|x_n - A| < \varepsilon$  tengsizlik o'rinli bo'ladigan bo'lsa,  $A$  soni  $\{x_n\}$  ketma-ketlikning limiti deb atalib, uni  $\lim_{n \rightarrow \infty} x_n = A$  kabi yoziladi. Chekli limiti mavjud bo'lgan ketma-ketlikni *yaqinlashuvchi*, aks holda *uzoqlashuvchi* deyiladi.

**1-misol.**  $\{x_n\} = \left\{ \frac{2n+3}{n+1} \right\}$  ketma-ketlikning limiti  $A=2$  ekanligi ko'rsatilsin.

**Yechish:** Har qanday  $\varepsilon > 0$  son uchun Shunday  $N=N(\varepsilon) > 0$  son mavjud bo'lib, barcha  $n > N$  lar uchun  $|x_n - A| = \left| \frac{2n+3}{n+1} - 2 \right| = \left| \frac{2n+3-2n-2}{n+1} \right| = \frac{1}{n+1} < \varepsilon$  ning bajarilishini ko'rsatamiz.  $\frac{1}{n+1} < \varepsilon$  dan,  $n > \frac{1}{\varepsilon} - 1$  ni hosil qilamiz. Demak,  $N = \left[ \frac{1}{\varepsilon} - 1 \right] + 1$  (bu erda  $[\alpha]$ ,  $\alpha$  sonining butun qismidir). Bundan ko'rinmoqdaki, Shunday  $N$  son mavjud ekanki, barcha  $n > N$  lar uchun  $|x_n - 2| < \varepsilon$  kabi shart bajariladi.

Faraz qilaylik,  $y=f(x)$  funksiya biror  $x_0$  nuqta atrofida aniqlangan bo'lsin. U holda, agar har qanday  $\varepsilon > 0$  son uchun Shunday bir  $\delta=\delta(\varepsilon) > 0$  son mavjud bo'lib, barcha  $0 < |x-x_0| < \delta$  lar uchun  $|f(x)-A| < \varepsilon$  tengsizlik o'rinli bo'lsa, chekli  $A$  sonini  $y=f(x)$  funksiyaning  $x \rightarrow x_0$  ( $x=x_0$  nuqtada) *dagi limiti* deb ataladi hamda  $\lim_{x \rightarrow x_0} f(x) = A$  yoziladi. Ayrim hollarda  $x=x_0$  nuqtada funksiya aniqlanmagan ham bo'lishi mumkin. Agar har qanday  $\varepsilon > 0$  son uchun  $N=W(\varepsilon) > 0$  mavjud bo'lib, barcha  $|x| > N$  lar uchun



$|f(x)-A|<E$  bajariladigan bo'lsa, u holda  $\lim_{x \rightarrow \pm\infty} f(x)=A$  deb yoziladi. Agar  $\lim_{\substack{x \rightarrow x_0 \\ x < x_0}} f(x)$  kabi (uni  $\lim_{x \rightarrow x_0-0} f(x)$  yoki  $f(x_0-0)$ ) deb ham yozish mumkin) chekli limit mavjud bo'lsa, u limitni  $f(x)$  funksiyaning  $x_0$  nuqtadagi *chap bir tomonli limiti* deb ataladi. Shunga o'xshash  $\lim_{\substack{x \rightarrow x_0 \\ x > x_0}} f(x)$  (yoki  $\lim_{x \rightarrow x_0+0} f(x)$  yoki  $f(x_0+0)$ ) chekli limit mavjud bo'lsa, u holda uni  $f(x)$  funksiyaning  $x_0$  nuqtadagi *o'ng bir tomonli limiti* deb ataladi. Biror  $f(x)$  funksiyaning belgilangan  $x_0$  nuqtadagi chekli limiti mavjud bo'lishi uchun, uning shu nuqtadagi ham chap bir tomonli, ham o'ng bir tomonli chekli limitlari mavjud bo'lib,  $f(x_0-0)=f(x_0+0)$  tenglikning bajarilishi zarur hamda yetarli shartdir.

Limitlar uchun quyidagi teoremlar o'rinlidir:

**1-teorema.** Agar  $\lim_{x \rightarrow x_0} f_i(x)$  ( $i = \overline{1, n}$ ) chekli limit bo'lsa, u holda:

$$\lim_{x \rightarrow x_0} \sum_{i=1}^n f_i(x) = \sum_{i=1}^n \lim_{x \rightarrow x_0} f_i(x), \quad \lim_{x \rightarrow x_0} \prod_{i=1}^n f_i(x) = \prod_{i=1}^n \lim_{x \rightarrow x_0} f_i(x) \text{ lar o'rinlidir.}$$

**2-teorema.** Agar  $\lim_{x \rightarrow x_0} f(x)$  va  $\lim_{x \rightarrow x_0} \varphi(x) \neq 0$  chekli limitlar mavjud bo'lsa, u

holda:  $\lim_{x \rightarrow x_0} \frac{f(x)}{\varphi(x)} = \lim_{x \rightarrow x_0} f(x) / \lim_{x \rightarrow x_0} \varphi(x)$  tenglik o'rinlidir.

Yuqoridagi teoremlar  $x_0 = \pm\infty$  uchun ham o'z kuchida qolaveradi.

Agar yuqoridagi teoremlarning shartlari bajarilmasa, u holda  $\infty-\infty, \frac{\infty}{\infty}, \frac{0}{0}$

va boshqa xildagi aniqmasliklar paydo bo'ladiki, ularni sodda hollar uchun algebraik shakl almashtirishlar orqali aniq ko'rinishga keltiriladi.

**2-misol.**  $\lim_{x \rightarrow 2} \left( \frac{4}{x^2 - 4} - \frac{1}{x - 2} \right)$  ni hisoblansin.

**Yechish:** Ushbu limitda  $(\infty-\infty)$  turdagi aniqmaslik yuz bermoqda. Uni ochib chiqish maqsadida, umumiy maxrajga keltirilganda  $\lim_{x \rightarrow 2} \frac{2-x}{x^2-4}$  dan  $\frac{0}{0}$

aniqmaslikka kelamiz. Agar  $x-2 \neq 0$  ga qisqartirsak,  $\lim_{x \rightarrow 2} \left( -\frac{1}{x+2} \right) = -\frac{1}{4}$  hosil bo'ladi.

**3-misol .**  $\lim_{x \rightarrow \pm\infty} \frac{2x^3 - x + 5}{x^3 + x^2 - 1}$  ni hisoblansin.

**Yechish:** Bu yerda  $\frac{\infty}{\infty}$  aniqmaslik ishtirok etmoqda. Kasrning surat va

maxrajini  $x^3$  ga bo'lib yuborsak,  $\lim_{x \rightarrow \pm\infty} \frac{2 - \frac{1}{x^2} + \frac{5}{x^3}}{1 + \frac{1}{x} - \frac{1}{x^3}}$  ni hosil qilamiz. Natijada,

limitga o'tib 2 ni hosil qilamiz.

### AJOYIB LIMITLAR

Quyidagi 1)  $\lim_{x \rightarrow 0} \frac{\sin x}{x} = 1;$

$$2) \lim_{x \rightarrow \pm\infty} \left( 1 + \frac{1}{x} \right)^x = \lim_{\alpha \rightarrow 0} (1 + \alpha)^{\frac{1}{\alpha}} = e \approx 2,71828;$$

limitlar ajoyib limitlar deb atalib, ular limitlarni hisoblashda keng qo'llaniladi.

**1-misol .**  $\lim_{n \rightarrow 0} \frac{\sin 7x}{\sin 3x}$  hisoblansin.

**Yechish:** Agar  $x \neq 0$  deb olsak, u holda

$$\lim_{n \rightarrow 0} \frac{\sin 7x}{\sin 3x} = \lim_{n \rightarrow 0} \frac{\frac{\sin 7x}{7x} \cdot 7x}{\frac{\sin 3x}{3x} \cdot 3x} = \lim_{n \rightarrow 0} \left( \frac{7x}{3x} \right) \cdot \lim_{n \rightarrow 0} \frac{\frac{\sin 7x}{7x}}{\frac{\sin 3x}{3x}} = \frac{7}{3}.$$

**2-misol .**  $\lim_{n \rightarrow \infty} \left( \frac{2x+1}{2x-1} \right)^{3x+1}$  ni hisoblansin.

**Yechish:** Quyidagicha shakl almashtiramiz:

$$\lim_{x \rightarrow \infty} \left( \frac{2x+1}{2x-1} \right)^{3x+1} = \lim_{x \rightarrow \infty} \left( \frac{2x-1+2}{2x-1} \right)^{3x+1} = \lim_{x \rightarrow \infty} \left( 1 + \frac{2}{2x-1} \right)^{3x+1};$$

Agar  $\frac{2}{2x-1} = \frac{1}{y}$  deb belgilash kiritsak,  $x = y - \frac{1}{2}$  dan  $x \rightarrow \infty$  da  $y \rightarrow \infty$ .

$$\lim_{x \rightarrow \infty} \left( \frac{2}{2x-1} \right)^{3x+1} = \lim_{x \rightarrow \infty} \left( 1 + \frac{1}{y} \right)^{3x - \frac{1}{2}} = \lim_{y \rightarrow \infty} \left( \left( 1 + \frac{1}{y} \right)^y \right)^3 \cdot \left( 1 + \frac{1}{y} \right)^{-\frac{1}{2}} = e^3$$

ni hosil qilamiz.

## 4.2 CHEKSIZ KICHIK FUNKSIYALARNI TAQQOSLASH.

### FUNKSIYANING UZLUKSIZLIGI

Agar  $\lim_{x \rightarrow x_0} \alpha(x) = 0$  bo'lsa, u holda  $\alpha(x)$  ni  $x \rightarrow x_0$  dagi *cheksiz kichik miqdor* deb ataladi. Ikkita  $\alpha(x)$  va  $\beta(x)$  ( $x \rightarrow x_0$  dagi) cheksiz kichik miqdorlarni taqqoslash uchun ularning nisbatining limiti hisoblanadi:

$$\lim_{x \rightarrow x_0} \frac{\alpha(x)}{\beta(x)} = C \quad (4.1)$$

Agar  $C \neq 0$  bo'lsa,  $\alpha(x)$  bilan  $\beta(x)$  larni *bir xil tartibli cheksiz kichik miqdorlar* deb yuritiladi; agar  $C = 0$  bo'lsa,  $\alpha(x)$  ni  $\beta(x)$  ga nisbatan *yuqori tartibli cheksiz kichik miqdor* deb,  $\beta(x)$  ni esa,  $\alpha(x)$  ga nisbatan *quyi tartibli cheksiz kichik miqdorlar* deb ataladi.

Agar  $\lim_{x \rightarrow x_0} \frac{\alpha(x)}{(\beta(x))^k} = C$ , ( $0 < |C| < \infty$ ), bo'lsa,  $\alpha(x)$  ni  $x \rightarrow x_0$  da  $\beta(x)$  ga nisbatan *k-tartibli cheksiz kichik miqdor* deyiladi.

Agar  $\lim_{x \rightarrow x_0} \frac{\alpha(x)}{\beta(x)} = 1$  bo'lsa,  $\alpha(x)$  bilan  $\beta(x)$  funksiyalarni  $x \rightarrow x_0$  da *ekvivalent (teng kuchli) cheksiz miqdorlar* deb atalib, ularni  $\alpha(x) \sim \beta(x)$  deb yoziladi. Masalan,  $x \rightarrow 0$  da  $\sin x \sim ax$ ,  $tg x \sim x$ ,  $\ln(1+x) \sim x$ ,  $e^{ax} - 1 \sim ax$ . Agar  $x \rightarrow x_0$  da  $\alpha(x)$  bilan  $\beta(x)$  lar, hamda  $\alpha^*(x)$  bilan  $\beta^*(x)$  lar cheksiz kichik miqdorlar bo'lib,  $\alpha(x) \sim \alpha^*(x)$  va  $\beta(x) \sim \beta^*(x)$  bo'lsalar, u holda:

$$\lim_{x \rightarrow x_0} \frac{\alpha(x)}{\beta(x)} = \lim_{x \rightarrow x_0} \frac{\alpha^*(x)}{\beta^*(x)} = \lim_{x \rightarrow x_0} \frac{\alpha(x)}{\beta^*(x)} = \lim_{x \rightarrow x_0} \frac{\alpha^*(x)}{\beta^*(x)}$$

ekanligini isbotlash mumkin.

**1-misol .**  $\lim_{x \rightarrow x_0} \frac{\sin 5x}{\ln(1+x)}$  ni hisoblansin.

**Yechish:** Agar  $x \rightarrow 0$  da  $\sin 5x \sim 5x$  va  $\ln(1+x) \sim x$  ekanligini inobatga olsak,  $\lim_{x \rightarrow x_0} \frac{\sin 5x}{\ln(1+x)} = \frac{5x}{x} = 5$  hosil bo'ladi.

Agar  $u=f(x)$  funksiya biror  $x$  nuqtada va uning atrofida aniqlangan bo'lib,  $x$  nuqtada uning chekli limiti mavjud bo'lsa hamda u limit funksiyaning  $x_0$  nuqtadagi qiymatiga teng bo'ladigan bo'lsa, ya'ni:

$$\lim_{x \rightarrow x_0} f(x) = f(x_0) \quad (4.2)$$

u holda  $u=f(x)$  funksiyaning  $x=x_0$  nuqtada uzluksiz deb ataladi.

Agar  $x=x_0+\Delta x$  olinsa, (5.2) uzluksizlik sharti quyidagi  $\lim_{\Delta x \rightarrow 0} \Delta f(x_0) = \lim_{\Delta x \rightarrow 0} (f(x_0 + \Delta x) - f(x_0)) = 0$  shartga teng kuchlidir, ya'ni,  $x_0$  nuqtadagi argumentning cheksiz kichik orttirmasi  $\Delta x$  ga, funksiyaning ham  $\Delta f(x_0)$  cheksiz kichik orttirmasi mos keladigan bo'lsagina,  $u=f(x)$  funksiya  $x=x_0$  nuqtada uzluksiz bo'ladi. Agar  $u=f(x)$  funksiya biror sohaning barcha nuqtalarida uzluksiz bo'lsa, uni *shu sohada uzluksiz* deb ataladi.

**2-misol .** Har qanday  $x \in R$  uchun  $u=\sin 5x$  funksiyaning uzluksizligi isbotlansin.

**Yechish:** Argumentning ixtiyoriy qiymatidagi  $\Delta x$  orttirma uchun funksiyaning orttirmasi

$$\Delta y = \sin(5x + \Delta x) - \sin 5x = 2 \cos\left(5x + \frac{5}{2} \Delta x\right) \cdot \sin \frac{5}{2} \Delta x \quad \text{mos keladi.}$$

$$\text{U holda:} \quad \lim_{\Delta x \rightarrow 0} \Delta y = 2 \lim_{\Delta x \rightarrow 0} \cos\left(5x + \frac{5}{2} \Delta x\right) \lim_{\Delta x \rightarrow 0} \sin \frac{5}{2} \Delta x = 0$$

Demak,  $u=\sin 5x$  funksiya son o'qining barcha qiymatlarida uzluksiz ekan.

Agar  $x_0$  nuqtadagi uzluksizlik shartlaridan hech bo‘lmaganda bittasi bajarilmasa,  $x_0$  ni *funksiyaning uzilish nuqtasi* deb ataladi. Xususan, agar  $u=f(x)$  funksiyaning  $x_0$  nuqtadagi chekli bir tomonli limitlari  $f(x_0-0)$  va  $f(x_0+0)$  mavjud bo‘lib,  $f(x_0-0) \neq f(x_0+0)$  bo‘lsa,  $x_0$  ni *1-tur uzilish nuqtasi* deyiladi. Agar  $x_0$  ni nuqtadagi bir tomonli  $f(x_0-0)$ ,  $f(x_0+0)$  limitlardan hech bo‘lmaganda birortasi mavjud bo‘lmasa yoki cheksizlikka teng bo‘lsa,  $x_0$  ni *2-tur uzilish nuqtasi* deb ataladi. Agar  $f(x_0-0) = f(x_0+0)$  bo‘lib,  $f(x)$  funksiya  $x_0$  nuqtada aniqlanmagan bo‘lsa, u holda  $x_0$  ni funksiyaning *chetlantiriladigan uzilish nuqtasi* deyiladi. Masalan,  $y = \frac{\sin x}{x}$  uchun,  $x=0$  chetlantiriladigan uzilish nuqtasidir.

## LIMITLAR NAZARIYASI BO‘LIMIGA TOPSHIRIQ VARIANTLARI

Ko‘rsatilgan limitlar hisoblansin.

### 1 – TOPSHIRIQ.

1.1.  $\lim_{x \rightarrow 2} \frac{x^2 - 5x + 6}{x^2 - 12x + 20}$ .

1.2.  $\lim_{x \rightarrow 0} \frac{x^3 - x^2 + 2x}{x^2 + x}$ .

1.3.  $\lim_{x \rightarrow 3} \frac{6 + x - x^2}{x^3 - 27}$ .

1.4.  $\lim_{x \rightarrow 1} \frac{2x^2 - x - 1}{3x^2 - x - 2}$ .

1.5.  $\lim_{x \rightarrow 2} \frac{2x^2 - 7x + 4}{x^2 - 5x + 6}$ .

1.6.  $\lim_{x \rightarrow 3} \frac{12 + x - x^2}{x^3 - 27}$ .

1.7.  $\lim_{x \rightarrow 1/3} \frac{3x^2 + 2x - 1}{27x^3 - 1}$ .

1.8.  $\lim_{x \rightarrow -1} \frac{x^2 - 4x - 5}{x^2 - 2x - 3}$ .

1.9.  $\lim_{x \rightarrow -1} \frac{3x^2 + 2x - 1}{-x^2 + x + 2}$ .

1.10.  $\lim_{x \rightarrow 3} \frac{3x^2 - 11x + 6}{2x^2 - 5x - 3}$ .

1.11.  $\lim_{x \rightarrow 2} \frac{x^3 - 8}{x^2 + x - 6}$ .

1.12.  $\lim_{x \rightarrow -1} \frac{x^2 - x - 2}{x^3 + 1}$ .

1.13.  $\lim_{x \rightarrow 4} \frac{x^2 - 16}{x^2 + x - 20}$ .

1.14.  $\lim_{x \rightarrow -3} \frac{4x^2 + 11x - 3}{x^2 + 2x - 3}$ .

1.15.  $\lim_{x \rightarrow 3} \frac{3x^2 - 7x - 6}{2x^2 - 7x + 3}$ .

1.16.  $\lim_{x \rightarrow -2} \frac{4x^2 + 7x - 2}{3x^2 + 8x + 4}$ .

1.17.  $\lim_{x \rightarrow -1} \frac{5x^2 + 4x - 1}{3x^2 + x - 2}$ .

1.18.  $\lim_{x \rightarrow -1} \frac{x^2 - 4x - 5}{3x^2 + 2x - 2}$ .

1.19.  $\lim_{x \rightarrow -1} \frac{7x^2 + 4x - 3}{2x^2 + 3x + 1}$ .

1.20.  $\lim_{x \rightarrow 4} \frac{3x^2 - 3x + 2}{x^2 - x - 12}$ .

1.21.  $\lim_{x \rightarrow 2} \frac{2x^2 - 9x + 10}{x^2 + 3x - 10}$ .

1.22.  $\lim_{x \rightarrow 1} \frac{4x^2 + x - 5}{x^2 - 2x + 1}$ .

1.23.  $\lim_{x \rightarrow 2} \frac{-5x^2 + 11x - 2}{3x^2 - x - 10}$ .

1.24.  $\lim_{x \rightarrow 7} \frac{x^2 - 5x - 14}{2x^2 - 9x - 35}$ .

1.25.  $\lim_{x \rightarrow 5} \frac{3x^2 - 6x - 45}{2x^2 - 3x - 35}$ .

1.26.  $\lim_{x \rightarrow -3} \frac{4x^2 + 3x + 15}{x^2 - 6x - 27}$ .

1.27.  $\lim_{x \rightarrow -5} \frac{x^2 - 2x - 35}{2x^2 + 11x + 5}$ .

1.28.  $\lim_{x \rightarrow -8} \frac{2x^2 + 15x - 8}{3x^2 + 25x + 8}$ .

1.29.  $\lim_{x \rightarrow 4} \frac{3x^2 - 2x - 40}{x^2 - 3x - 4}$ .

1.30.  $\lim_{x \rightarrow -3} \frac{2x^2 + 5x - 3}{3x^2 + 10x + 3}$ .

## 2 -TOPSHIRIQ.

$$2.1. \quad \lim_{x \rightarrow -3} \frac{2x^2 + 11x + 15}{3x^2 + 5x - 12}.$$

$$2.2. \quad \lim_{x \rightarrow 1} \frac{2x^2 + 5x - 10}{x^3 - 1}.$$

$$2.3. \quad \lim_{x \rightarrow 1} \frac{x^3 - 3x + 2}{x^2 - 4x + 3}.$$

$$2.4. \quad \lim_{x \rightarrow 2} \frac{3x^2 + 2x + 1}{x^3 - 8}.$$

$$2.5. \quad \lim_{x \rightarrow -1} \frac{x^4 - x^2 + x + 1}{x^4 + 1}.$$

$$2.6. \quad \lim_{x \rightarrow 1} \frac{2x^2 - 3x - 1}{x^4 - 1}.$$

$$2.7. \quad \lim_{x \rightarrow 2} \frac{x^2 - x + 3}{5x^2 + 3x - 3}.$$

$$2.8. \quad \lim_{x \rightarrow -2} \frac{x^2 + 2x}{x^2 + 4x + 4}.$$

$$2.9. \quad \lim_{x \rightarrow -1} \frac{x^2 - 1}{x^2 + 3x + 2}.$$

$$2.10. \quad \lim_{x \rightarrow -4} \frac{2x^2 + 7x - 4}{x^3 + 64}.$$

$$2.11. \quad \lim_{x \rightarrow -5} \frac{4x^2 + 19x - 5}{2x^2 + 11x + 5}.$$

$$2.12. \quad \lim_{x \rightarrow 1} \frac{x^3 - x^2 + x - 1}{x^3 + x - 2}.$$

$$2.13. \quad \lim_{x \rightarrow 1} \frac{x^2 - 2x + 1}{2x^2 - 7x + 5}.$$

$$2.14. \quad \lim_{x \rightarrow 2} \frac{x^3 - 8}{2x^2 - 9x + 10}.$$

$$2.15. \quad \lim_{x \rightarrow -2} \frac{9x^2 + 17x - 2}{x^2 + 2x}.$$

$$2.16. \quad \lim_{x \rightarrow 1} \frac{x^3 + x - 2}{x^3 - x^2 - x + 1}.$$

$$2.17. \quad \lim_{x \rightarrow 0} \frac{4x^3 - 2x^2 + 5x}{3x^2 + 7x}.$$

$$2.18. \quad \lim_{x \rightarrow 1} \frac{4x^4 - 5x^2 + 1}{x^2 - 1}.$$

$$2.19. \quad \lim_{x \rightarrow 3} \frac{3x^2 + 5x - 1}{x^2 - 5x + 6}.$$

$$2.20. \quad \lim_{x \rightarrow -5} \frac{x^2 - x - 30}{x^3 + 125}.$$

$$2.21. \quad \lim_{x \rightarrow 4} \frac{x^2 + 3x - 28}{x^3 - 64}.$$

$$2.22. \quad \lim_{x \rightarrow 1/2} \frac{8x^3 - 1}{x^3 - 1/4}.$$

$$2.23. \quad \lim_{x \rightarrow 4} \frac{x^2 + 3x - 28}{x^2 - 4x}.$$

$$2.24. \quad \lim_{x \rightarrow -2} \frac{3x^2 + 11x + 10}{x^2 - 5x + 14}.$$

$$2.25. \quad \lim_{x \rightarrow -2} \frac{x^2 - 4}{3x^2 + x - 10}.$$

$$2.26. \quad \lim_{x \rightarrow 0} \frac{3x^2 + x}{4x^2 - 5x + 1}.$$

$$2.27. \quad \lim_{x \rightarrow 6} \frac{2x^2 - 11x - 6}{3x^2 - 20x + 12}.$$

$$2.28. \quad \lim_{x \rightarrow -6} \frac{x^2 + 2x - 24}{2x^3 + 15x + 18}.$$

$$2.29. \quad \lim_{x \rightarrow 2} \frac{x^3 - 2x - 4}{x^2 - 11x + 18}.$$

$$2.30. \quad \lim_{x \rightarrow 4} \frac{x^3 - 64}{7x^2 - 27x - 4}.$$

### 3 -TOPSHIRIQ.

$$3.1. \quad \lim_{x \rightarrow \infty} \frac{3x^3 - 5x^2 + 2}{2x^3 + 5x^2 - x}.$$

$$3.2. \quad \lim_{x \rightarrow \infty} \frac{4x^3 + 7x}{2x^3 - 4x^2 + 5}.$$

$$3.3. \quad \lim_{x \rightarrow \infty} \frac{5x^4 - 3x^2 + 7}{x^4 + 2x^3 + 1}.$$

$$3.4. \quad \lim_{x \rightarrow \infty} \frac{7x^3 - 2x^2 + 4x}{2x^3 + 5}.$$

$$3.5. \quad \lim_{x \rightarrow \infty} \frac{x^3 - 4x^2 + 28x}{5x^3 + 3x^2 + x - 1}.$$

$$3.6. \quad \lim_{x \rightarrow \infty} \frac{3x^2 + 10x + 3}{2x^2 + 5x - 3}.$$

$$3.7. \quad \lim_{x \rightarrow \infty} \frac{-3x^4 + x^2 + x}{x^4 + 3x - 2}.$$

$$3.8. \quad \lim_{x \rightarrow \infty} \frac{2x^2 + 7x + 3}{5x^2 - 3x + 4}.$$

$$3.9. \quad \lim_{x \rightarrow \infty} \frac{-x^2 + 3x + 1}{3x^2 + x - 5}.$$

$$3.10. \quad \lim_{x \rightarrow \infty} \frac{x^3 - 3x^2 + 10}{7x^3 + 2x + 1}.$$

$$3.11. \quad \lim_{x \rightarrow \infty} \frac{4x^2 + 5x - 7}{2x^2 - x + 10}.$$

$$3.12. \quad \lim_{x \rightarrow \infty} \frac{3x^4 + 2x + 1}{x^4 - x^3 + 2x}.$$

$$3.13. \quad \lim_{x \rightarrow \infty} \frac{3x^2 + 2x + 9}{2x^2 - x + 4}.$$

$$3.14. \quad \lim_{x \rightarrow \infty} \frac{3x^2 + 5x - 7}{3x^2 + x + 1}.$$

$$3.15. \quad \lim_{x \rightarrow \infty} \frac{2x^3 + 7x - 2}{3x^3 - x - 4}.$$

$$3.16. \quad \lim_{x \rightarrow 0} \frac{18x^2 + 5x}{8 - 3x - 9x^2}.$$

$$3.17. \quad \lim_{x \rightarrow \infty} \frac{3x^4 - 6x^2 + 2}{x^4 + 4x - 3}.$$

$$3.18. \quad \lim_{x \rightarrow \infty} \frac{8x^2 + 4x - 5}{4x^2 - 3x + 2}.$$

$$3.19. \quad \lim_{x \rightarrow \infty} \frac{8x^4 - 4x^2 + 3}{2x^4 + 1}.$$

$$3.20. \quad \lim_{x \rightarrow \infty} \frac{3x^2 - 4x + 2}{6x^2 + 5x + 1}.$$

$$3.21. \quad \lim_{x \rightarrow \infty} \frac{7x^3 + 4x}{x^3 - 3x + 2}.$$

$$3.22. \quad \lim_{x \rightarrow \infty} \frac{1 + 4x - x^4}{x + 3x^2 + 2x^4}.$$

$$3.23. \quad \lim_{x \rightarrow \infty} \frac{2x^3 + 7x^2 - 2}{6x^3 - 4x + 3}.$$

$$3.24. \quad \lim_{x \rightarrow \infty} \frac{3x + 14x^2}{1 + 2x + 7x^2}.$$

$$3.25. \quad \lim_{x \rightarrow \infty} \frac{x - 2x^2 + 5x^4}{2 + 3x^2 + x^4}.$$

$$3.26. \quad \lim_{x \rightarrow \infty} \frac{3x^4 - 2x^2 - 7}{3x^4 + 3x + 5}.$$

$$3.27. \quad \lim_{x \rightarrow \infty} \frac{4 - 5x^2 - 3x^5}{x^5 + 6x + 8}.$$

$$3.28. \quad \lim_{x \rightarrow \infty} \frac{5x^3 - 7x^2 + 3}{2 + 2x - x^3}.$$

$$3.29. \quad \lim_{x \rightarrow \infty} \frac{4x^3 - 2x + 1}{2x^3 + 3x^2 + 2}.$$

$$3.30. \quad \lim_{x \rightarrow \infty} \frac{5x^2 - 3x + 1}{3x^2 + x - 5}.$$



## 4 - TOPSHIRIQ.

$$4.1. \quad \lim_{x \rightarrow -\infty} \frac{x^5 - 2x + 4}{2x^4 + 3x^2 + 1}.$$

$$4.2. \quad \lim_{x \rightarrow \infty} \frac{3x^4 + 2x - 5}{2x^2 + x + 7}.$$

$$4.3. \quad \lim_{x \rightarrow -\infty} \frac{3x^2 + 7x - 4}{x^5 + 2x - 1}.$$

$$4.4. \quad \lim_{x \rightarrow \infty} \frac{3x - x^6}{x^2 - 2x + 5}.$$

$$4.5. \quad \lim_{x \rightarrow \infty} \frac{2x^3 + 7x - 1}{3x^4 + 2x + 5}.$$

$$4.6. \quad \lim_{x \rightarrow -\infty} \frac{2x^3 + 7x^2 + 4}{x^4 + 5x - 1}.$$

$$4.7. \quad \lim_{x \rightarrow -\infty} \frac{3x^6 - 5x^2 + 2}{2x^3 + 4x - 5}.$$

$$4.8. \quad \lim_{x \rightarrow \infty} \frac{x^7 + 5x^2 - 4x}{3x^2 + 11x - 7}.$$

$$4.9. \quad \lim_{x \rightarrow -\infty} \frac{7x^2 5x + 9}{1 + 4x - x^3}.$$

$$4.10. \quad \lim_{x \rightarrow \infty} \frac{3x^4 + x^2 - 6}{2x^2 + 3x + 1}.$$

$$4.11. \quad \lim_{x \rightarrow -\infty} \frac{2x^2 + 5x + 7}{3x^4 - 2x^2 + x}.$$

$$4.12. \quad \lim_{x \rightarrow \infty} \frac{3x^3 + 4x^2 - 7x}{2x^2 + 7x - 3}.$$

$$4.13. \quad \lim_{x \rightarrow -1} \frac{5x^3 - 3x^2 + 7}{2x^4 + 3x^2 + 1}.$$

$$4.14. \quad \lim_{x \rightarrow \infty} \frac{5x^2 - 3x + 1}{1 + 2x - x^4}.$$

$$4.15. \quad \lim_{x \rightarrow -\infty} \frac{2x^3 + 3x^2 + 5}{3x^2 - 4x + 1}.$$

$$4.16. \quad \lim_{x \rightarrow \infty} \frac{6x^2 - 5x + 2}{4x^3 + 2x - 1}.$$

$$4.17. \quad \lim_{x \rightarrow -\infty} \frac{11x^3 + 3x}{2x^2 - 2x + 1}.$$

$$4.18. \quad \lim_{x \rightarrow \infty} \frac{8x^2 + 3x + 5}{4x^3 - 2x^2 - 1}.$$

$$4.19. \quad \lim_{x \rightarrow -\infty} \frac{6x^3 + 5x^2 - 3}{2x^2 - x + 7}.$$

$$4.20. \quad \lim_{x \rightarrow \infty} \frac{3x^2 + 4x - 7}{x^4 - 2x^3 + 1}.$$

$$4.21. \quad \lim_{x \rightarrow -\infty} \frac{8x^5 + 4x^3 + 3}{2x^3 + x - 7}.$$

$$4.22. \quad \lim_{x \rightarrow \infty} \frac{2x^2 - 7x + 1}{x^3 + 4x^2 - 3}.$$

$$4.23. \quad \lim_{x \rightarrow -\infty} \frac{5x^4 - 2x^2 + 3}{2x^2 + 3x - 7}.$$

$$4.24. \quad \lim_{x \rightarrow \infty} \frac{8x^3 + x^2 - 7}{2x^2 - 5x + 3}.$$

$$4.25. \quad \lim_{x \rightarrow -\infty} \frac{3x^4 + 2x^2 - 8}{8x^3 - 4x + 5}.$$

$$4.26. \quad \lim_{x \rightarrow \infty} \frac{3x^4 + 2x - 4}{3x^2 - 4x + 1}.$$

$$4.27. \quad \lim_{x \rightarrow -\infty} \frac{7x^3 - 2x + 4}{2x^2 + x - 5}.$$

$$4.28. \quad \lim_{x \rightarrow \infty} \frac{4x^3 + 5x^2 - 3x}{3x^2 + x + 10}.$$

$$4.29. \quad \lim_{x \rightarrow -\infty} \frac{2x^2 + 10x - 11}{3x^4 - 2x + 5}.$$

$$4.30. \quad \lim_{x \rightarrow \infty} \frac{7x^3 + 3x - 4}{2x^2 - 5x + 1}.$$

## 5 - TOPSHIRIQ.

$$5.1. \quad \lim_{x \rightarrow -\infty} \frac{2x^2 + 3x - 5}{7x^3 - 2x^2 + 1}.$$

$$5.2. \quad \lim_{x \rightarrow -\infty} \frac{3x^2 - 7x + 2}{x^4 + 2x - 4}.$$

$$5.3. \quad \lim_{x \rightarrow -\infty} \frac{7x^4 - 3x + 4}{3x^2 - 2x + 1}.$$

$$5.4. \quad \lim_{x \rightarrow -\infty} \frac{2x^2 - x + 7}{3x^4 - 5x^2 + 10}.$$

$$5.5. \quad \lim_{x \rightarrow -\infty} \frac{4x^3 - 2x^2 + x}{3x^2 - x}.$$

$$5.6. \quad \lim_{x \rightarrow -\infty} \frac{3x^4 - 2x + 1}{3x^2 + 2x - 5}.$$

$$5.7. \quad \lim_{x \rightarrow -\infty} \frac{2x^2 - 5x + 2}{x^4 + 3x^2 - 9}.$$

$$5.8. \quad \lim_{x \rightarrow -\infty} \frac{5x^2 - 4x + 2}{4x^3 + 2x - 5}.$$

$$5.9. \quad \lim_{x \rightarrow -\infty} \frac{2x^3 + 3x^2 + 2x}{x^2 + 7x + 1}.$$

$$5.10. \quad \lim_{x \rightarrow -\infty} \frac{3x^2 - 7x + 5}{4x^5 - 3x^3 + 2}.$$

$$5.11. \quad \lim_{x \rightarrow -\infty} \frac{7x^5 + 6x^4 - x^3}{2x^2 + 6x + 1}.$$

$$5.12. \quad \lim_{x \rightarrow -\infty} \frac{4 - 3x - 2x^2}{3x^4 + 5x}.$$

$$5.13. \quad \lim_{x \rightarrow -\infty} \frac{7 - 3x^4}{2x^3 + 3x^2 - 5}.$$

$$5.14. \quad \lim_{x \rightarrow -\infty} \frac{8x^4 + 7x^3 - 3}{3x^2 - 5x + 1}.$$

$$5.15. \quad \lim_{x \rightarrow -\infty} \frac{3x + 7}{2 - 3x + 4x^2}.$$

$$5.16. \quad \lim_{x \rightarrow -\infty} \frac{2x^3 - 3x + 1}{7x + 5}.$$

$$5.17. \quad \lim_{x \rightarrow -\infty} \frac{10x - 7}{3x^4 + 2x^3 + 1}.$$

$$5.18. \quad \lim_{x \rightarrow -\infty} \frac{5x^4 - 3x^2}{1 + 2x + 3x^2}.$$

$$5.19. \quad \lim_{x \rightarrow -\infty} \frac{5x + 3}{x^3 - 4x^2 - x}.$$

$$5.20. \quad \lim_{x \rightarrow -\infty} \frac{3x^4 + 5x}{2x^2 - 3x - 7}.$$

$$5.21. \quad \lim_{x \rightarrow -\infty} \frac{2x^2 - 5x + 3}{3x^4 - 2x^2 + x}.$$

$$5.22. \quad \lim_{x \rightarrow -\infty} \frac{2x^5 - x^3}{4x^2 + 3x - 6}.$$

$$5.23. \quad \lim_{x \rightarrow -\infty} \frac{3x + 1}{x^3 - 2x^2 + x}.$$

$$5.24. \quad \lim_{x \rightarrow -\infty} \frac{2 - x - 3x^2}{x^3 - 16}.$$

$$5.25. \quad \lim_{x \rightarrow -\infty} \frac{4x^2 - 10x + 7}{2x^3 - 3x}.$$

$$5.26. \quad \lim_{x \rightarrow -\infty} \frac{2x^3 - 3x + 1}{x^5 + 4x^3}.$$

$$5.27. \quad \lim_{x \rightarrow -\infty} \frac{2x - 13}{x^7 - 3x^5 - 4x}.$$

$$5.28. \quad \lim_{x \rightarrow -\infty} \frac{2x^2 - 3x + 1}{x^2 + 2x^2 + 5}.$$

$$5.29. \quad \lim_{x \rightarrow -\infty} \frac{x^3 - 81}{3x^2 + 4x + 2}.$$

$$5.30. \quad \lim_{x \rightarrow -\infty} \frac{7x + 4}{3x^3 - 5x + 1}.$$

## 6 - TOPSHIRIQ.

$$6.1. \quad \lim_{x \rightarrow 3} \frac{x^2 + x - 12}{\sqrt{x-2} - \sqrt{4-x}}.$$

$$6.2. \quad \lim_{x \rightarrow 4} \frac{\sqrt{x+12} - \sqrt{4-x}}{x^2 + 2x - 8}.$$

$$6.3. \quad \lim_{x \rightarrow 3} \frac{\sqrt{x+10} - \sqrt{4-x}}{2x^2 - x - 21}.$$

$$6.4. \quad \lim_{x \rightarrow 2} \frac{\sqrt{2-x} - \sqrt{x+6}}{x^2 - x - 6}.$$

$$6.5. \quad \lim_{x \rightarrow 1} \frac{\sqrt{3+2x} - \sqrt{x+4}}{3x^2 - 4x + 1}.$$

$$6.6. \quad \lim_{x \rightarrow 2} \frac{x^2 - 3x + 2}{\sqrt{5-x} - \sqrt{x+1}}.$$

$$6.7. \quad \lim_{x \rightarrow -1} \frac{3x^2 + 4x + 1}{\sqrt{x+3} - \sqrt{5+3x}}.$$

$$6.8. \quad \lim_{x \rightarrow 4} \frac{2x^2 - 9x + 4}{\sqrt{5-x} - \sqrt{x-3}}.$$

$$6.9. \quad \lim_{x \rightarrow 5} \frac{\sqrt{2x+1} - \sqrt{x+6}}{2x^2 - 7x - 15}.$$

$$6.10. \quad \lim_{x \rightarrow -5} \frac{\sqrt{3x+17} - \sqrt{2x+12}}{x^2 + 8x + 15}.$$

$$6.11. \quad \lim_{x \rightarrow 0} \frac{\sqrt{x^2+2} - \sqrt{2}}{\sqrt{x^2+1} - 1}.$$

$$6.12. \quad \lim_{x \rightarrow 0} \frac{\sqrt{7-x} - \sqrt{7+x}}{\sqrt{7x}}.$$

$$6.13. \quad \lim_{x \rightarrow 0} \frac{3x}{\sqrt{1+x} - \sqrt{1-x}}.$$

$$6.14. \quad \lim_{x \rightarrow 4} \frac{\sqrt{2x+1} - 3}{\sqrt{x-2} - \sqrt{2}}.$$

$$6.15. \quad \lim_{x \rightarrow -1} \frac{\sqrt{5+x} - 2}{\sqrt{8-x} - 3}.$$

$$6.16. \quad \lim_{x \rightarrow 5} \frac{\sqrt{x+4} - 3}{\sqrt{x-1} - 2}.$$

$$6.17. \quad \lim_{x \rightarrow 7} \frac{\sqrt{x-3} - 2}{\sqrt{x+2} - 3}.$$

$$6.18. \quad \lim_{x \rightarrow 3} \frac{\sqrt{4x-3} - 3}{x^2 - 9}.$$

$$6.19. \quad \lim_{x \rightarrow 3} \frac{\sqrt{5x+1} - 4}{x^2 + 2x - 15}.$$

$$6.20. \quad \lim_{x \rightarrow 0} \frac{2 - \sqrt{x^2 + 4}}{3x^2}.$$

$$6.21. \quad \lim_{x \rightarrow 0} \frac{\sqrt{x^2 + 4} - 2}{\sqrt{x^2 + 16} - 4}.$$

$$6.22. \quad \lim_{x \rightarrow 0} \frac{3x}{\sqrt{5-x} - \sqrt{5+x}}.$$

$$6.23. \quad \lim_{x \rightarrow 9} \frac{\sqrt{2x+7} - 5}{3 - \sqrt{x}}.$$

$$6.24. \quad \lim_{x \rightarrow 4} \frac{2 - \sqrt{x}}{\sqrt{6x+1} - 5}.$$

$$6.25. \quad \lim_{x \rightarrow 3} \frac{x^3 - 27}{\sqrt{3x} - x}.$$

$$6.26. \quad \lim_{x \rightarrow 0} \frac{\sqrt{1+3x^2} - 1}{x^3 + x^2}.$$

$$6.27. \quad \lim_{x \rightarrow -4} \frac{\sqrt{x+20} - 4}{x^3 + 64}.$$

$$6.28. \quad \lim_{x \rightarrow 1} \frac{3x^2 - 2}{\sqrt{8+x} - 3}.$$

$$6.29. \quad \lim_{x \rightarrow 0} \frac{\sqrt{9+x} - 3}{x^2 + x}.$$

$$6.30. \quad \lim_{x \rightarrow 2} \frac{\sqrt{4x+1} - 3}{x^3 - 8}.$$

## 7 - TOPSHIRIQ.

$$7.1. \quad \lim_{x \rightarrow \infty} \left( \frac{x+4}{x+8} \right)^{-3x}$$

$$7.2. \quad \lim_{x \rightarrow \infty} \left( \frac{x}{x+1} \right)^{2x-3}$$

$$7.3. \quad \lim_{x \rightarrow \infty} \left( \frac{2x}{1+2x} \right)^{-4x}$$

$$7.4. \quad \lim_{x \rightarrow \infty} \left( \frac{x-1}{x} \right)^{2-3x}$$

$$7.5. \quad \lim_{x \rightarrow \infty} \left( \frac{2x+5}{2x+1} \right)^{5x}$$

$$7.6. \quad \lim_{x \rightarrow \infty} \left( \frac{x+3}{x} \right)^{-5x}$$

$$7.7. \quad \lim_{x \rightarrow \infty} \left( \frac{x+2}{x+1} \right)^{1+2x}$$

$$7.8. \quad \lim_{x \rightarrow \infty} \left( \frac{x+3}{x-1} \right)^{x-4}$$

$$7.9. \quad \lim_{x \rightarrow \infty} \left( \frac{2x}{2x-3} \right)^{3x}$$

$$7.10. \quad \lim_{x \rightarrow \infty} \left( \frac{x-7}{x} \right)^{2x+1}$$

$$7.11. \quad \lim_{x \rightarrow \infty} \left( \frac{x-1}{x+4} \right)^{3x+2}$$

$$7.12. \quad \lim_{x \rightarrow \infty} \left( \frac{2x+1}{2x-1} \right)^{x+2}$$

$$7.13. \quad \lim_{x \rightarrow \infty} \left( \frac{x-2}{x+1} \right)^{2x-3}$$

$$7.14. \quad \lim_{x \rightarrow \infty} \left( \frac{x}{x-3} \right)^{x-5}$$

$$7.15. \quad \lim_{x \rightarrow \infty} \left( \frac{3x-4}{3x+2} \right)^{2x}$$

$$7.16. \quad \lim_{x \rightarrow \infty} \left( \frac{2x-1}{2x+4} \right)^{3x-1}$$

$$7.17. \quad \lim_{x \rightarrow \infty} \left( \frac{2x-4}{2x} \right)^{-3x}$$

$$7.18. \quad \lim_{x \rightarrow \infty} \left( \frac{x+5}{x} \right)^{3x+4}$$

$$7.19. \quad \lim_{x \rightarrow \infty} \left( \frac{x-7}{x+1} \right)^{4x-2}$$

$$7.20. \quad \lim_{x \rightarrow \infty} \left( \frac{x+2}{x} \right)^{3-2x}$$

$$7.21. \quad \lim_{x \rightarrow \infty} \left( \frac{2-3x}{5-3x} \right)^x$$

$$7.22. \quad \lim_{x \rightarrow \infty} \left( \frac{1-x}{2-x} \right)^{3x}$$

$$7.23. \quad \lim_{x \rightarrow \infty} \left( \frac{4x-1}{4x+1} \right)^{2x}$$

$$7.24. \quad \lim_{x \rightarrow \infty} \left( \frac{3x+4}{3x} \right)^{-2x}$$

$$7.25. \quad \lim_{x \rightarrow \infty} \left( \frac{2x-1}{2x+4} \right)^{-x}$$

$$7.26. \quad \lim_{x \rightarrow \infty} \left( \frac{3x+4}{3x+5} \right)^{x+1}$$

$$7.27. \quad \lim_{x \rightarrow \infty} \left( \frac{1+2x}{3+2x} \right)^{-x}$$

$$7.28. \quad \lim_{x \rightarrow \infty} \left( \frac{3x}{3x+2} \right)^{x-2}$$

$$7.29. \quad \lim_{x \rightarrow \infty} \left( \frac{x}{x-1} \right)^{3-2x}$$

$$7.30. \quad \lim_{x \rightarrow \infty} \left( \frac{4-2x}{1-2x} \right)^{x+1}$$

## 8 - TOPSHIRIQ

$$8.1. \lim_{x \rightarrow 0} \frac{1 - \cos 8x}{3x^2}.$$

$$8.2. \lim_{x \rightarrow 0} \frac{\sin 3x - \sin x}{5x}.$$

$$8.3. \lim_{x \rightarrow 0} \frac{\cos x - \cos 5x}{2x^2}.$$

$$8.4. \lim_{x \rightarrow 0} \frac{\operatorname{tg} 3x}{2 \sin x}.$$

$$8.5. \lim_{x \rightarrow 0} \frac{\operatorname{tg} x - \sin x}{3x^2}.$$

$$8.6. \lim_{x \rightarrow 0} \frac{\arcsin 5x}{\sin 3x}.$$

$$8.7. \lim_{x \rightarrow 1} (1-x) \operatorname{tg} \frac{\pi x}{2}.$$

$$8.8. \lim_{x \rightarrow \pi/2} \frac{1 - \sin x}{\pi - 2x}.$$

$$8.9. \lim_{x \rightarrow 0} \frac{\operatorname{tg} 2x - \sin 2x}{x^2}.$$

$$8.10. \lim_{x \rightarrow 0} \frac{1 - \cos^2 x}{x \operatorname{tg} x}.$$

$$8.11. \lim_{x \rightarrow 0} \left( \frac{1}{\operatorname{tg} x} - \frac{1}{\sin x} \right).$$

$$8.12. \lim_{x \rightarrow 0} \frac{\sin^2 3x - \sin^2 x}{x^2}.$$

$$8.13. \lim_{x \rightarrow 0} \frac{\sin 7x + \sin 3x}{x \sin x}.$$

$$8.14. \lim_{x \rightarrow 0} \frac{1 - \cos 5x}{2x^2}.$$

$$8.15. \lim_{x \rightarrow 0} \frac{\cos 2x - \cos 4x}{3x^2}.$$

$$8.16. \lim_{x \rightarrow 0} \frac{\operatorname{arctg} 2x}{\operatorname{tg} 3x}.$$

$$8.17. \lim_{x \rightarrow 0} \frac{\operatorname{tg} 3x - \sin 3x}{2x^2}.$$

$$8.18. \lim_{x \rightarrow \pi/4} \frac{1 - \sin 2x}{\pi - 4x}.$$

$$8.19. \lim_{x \rightarrow 0} \frac{\cos 4x - \cos^3 4x}{3x^2}.$$

$$8.20. \lim_{x \rightarrow 0} \left( \frac{1}{\sin 2x} - \frac{1}{\operatorname{tg} 2x} \right).$$

$$8.21. \lim_{x \rightarrow 0} \frac{\cos^2 x - \cos^2 2x}{x^2}.$$

$$8.22. \lim_{x \rightarrow 0} \frac{\arcsin 5x}{x^2 - x}.$$

$$8.23. \lim_{x \rightarrow 0} \frac{1 - \cos^2 2x}{x \arcsin x}.$$

$$8.24. \lim_{x \rightarrow 0} \frac{1 - \cos 4x}{x \sin x}.$$

$$8.25. \lim_{x \rightarrow 0} \frac{\cos 5x - \cos x}{4x^2}.$$

$$8.26. \lim_{x \rightarrow 0} \frac{\sin 5x + \sin x}{\arcsin x}.$$

$$8.27. \lim_{x \rightarrow \pi/2} \frac{1 - \sin x}{(\pi/2 - x)^2}.$$

$$8.28. \lim_{x \rightarrow \pi/2} (\pi/2 - x) \operatorname{tg} x.$$

$$8.29. \lim_{x \rightarrow 0} \frac{7x}{\sin x + \sin 7x}.$$

$$8.30. \lim_{x \rightarrow 0} \frac{\cos x - \cos^3 x}{5x^2}.$$

## NAMUNAVIY VARIANTNI YECHISH

Ko'rsatilgan limitlarni toping

1.  $\lim_{x \rightarrow -2} \frac{5x^2 + 13x + 6}{3x^2 + 2x - 8}$ .

**Yechish:**

$$\lim_{x \rightarrow -2} \frac{5x^2 + 13x + 6}{3x^2 + 2x - 8} = \lim_{x \rightarrow -2} \frac{(x+2)(5x+3)}{(x+2)(3x-4)} = \lim_{x \rightarrow -2} \frac{5x+3}{3x-4} = \frac{7}{10} = 0,7$$

2.  $\lim_{x \rightarrow 4} \frac{3x^2 - 10x - 8}{4x^2 + 6x - 64}$ .

**Yechish:**

$$\lim_{x \rightarrow 4} \frac{3x^2 - 10x - 8}{4x^2 + 6x - 64} = \frac{0}{24} = 0$$

3.  $\lim_{x \rightarrow \infty} \frac{7x^4 + 2x^3 + 5}{6x^4 + 3x^2 - 7x}$ .

**Yechish:**

$$\lim_{x \rightarrow \infty} \frac{7x^4 + 2x^3 + 5}{6x^4 + 3x^2 - 7x} = \lim_{x \rightarrow \infty} \frac{x^4(7 + 2/x + 5/x^4)}{x^4(6 + 3/x^2 - 7/x^3)} = \frac{7}{6}$$

4.  $\lim_{x \rightarrow \infty} \frac{10x - 3}{2x^3 + 4x + 3}$ .

**Yechish:**

$$\lim_{x \rightarrow \infty} \frac{10x - 3}{2x^3 + 4x + 3} = \lim_{x \rightarrow \infty} \frac{x(10 - 3/x)}{x^3(2 + 4/x^2 + 3/x^3)} = \lim_{x \rightarrow \infty} \frac{10 - 3/x}{x^2(2 + 4/x^2 + 3/x^3)} = \frac{10}{\infty} = 0.$$

5.  $\lim_{x \rightarrow \infty} \frac{2x^5 + 3x^3 - 4x}{3x^2 - 4x + 2}$ .

**Yechish:**

$$\lim_{x \rightarrow \infty} \frac{2x^5 + 3x^3 - 4x}{3x^2 - 4x + 2} = \lim_{x \rightarrow \infty} \frac{x^5(2 + 3/x^2 - 4/x^4)}{x^2(3 - 4/x + 2/x^2)} = \lim_{x \rightarrow \infty} \frac{x^3(2 + 3/x^2 - 4/x^4)}{3 - 4/x + 2/x^2} = \frac{-\infty}{3} = -\infty.$$

6.  $\lim_{x \rightarrow 4} \frac{\sqrt{21+x} - 5}{x^3 - 64}$ .

**Yechish:**

$$\lim_{x \rightarrow 4} \frac{\sqrt{21+x} - 5}{x^3 - 64} = \lim_{x \rightarrow 4} \frac{(\sqrt{21+x} - 5)(\sqrt{21+x} + 5)}{(x^3 - 64)(\sqrt{21+x} + 5)} = \lim_{x \rightarrow 4} \frac{21 + x - 25}{(x-4)(x^2 + 4x + 16)(\sqrt{21+x} + 5)} =$$

$$= \lim_{x \rightarrow 4} \frac{x-4}{(x^3-64)(\sqrt{21+x+5})} = \lim_{x \rightarrow 4} \frac{1}{(x^2-4x+16)(\sqrt{21+x+5})} = \frac{1}{480}.$$

$$7. \lim_{x \rightarrow \infty} \left( \frac{2x}{2x-3} \right)^{2-5x}.$$

**Yechish:**

$$\begin{aligned} \lim_{x \rightarrow \infty} \left( \frac{2x}{2x-3} \right)^{2-5x} &= \lim_{x \rightarrow \infty} \left( 1 + \frac{2x}{2x-3} - 1 \right)^{2-5x} = \lim_{x \rightarrow \infty} \left( 1 + \frac{2x-2x+3}{2x-3} \right)^{2-5x} = \lim_{x \rightarrow \infty} \left( 1 + \frac{3}{2x-3} \right)^{2-5x} = \\ &= \lim_{x \rightarrow \infty} \left( \left( 1 + \frac{3}{2x-3} \right)^{(2x-3)/3} \right)^{3(2-5x)/(2x-3)} = \lim_{x \rightarrow \infty} e^{3(2-5x)/(2x-3)} = e^{-15/2}. \end{aligned}$$

$$8. \lim_{x \rightarrow \pi} \frac{1 - \sin(x/2)}{\pi^2 - x^2}.$$

**Yechish:**

$$\begin{aligned} \lim_{x \rightarrow \pi} \frac{1 - \sin(x/2)}{\pi^2 - x^2} &= \lim_{x \rightarrow \pi} \frac{1 - \cos(\pi/2 - x/2)}{\pi^2 - x^2} = \lim_{x \rightarrow \pi} \frac{2 \sin^2((\pi-x)/4)}{(\pi-x)(\pi+x)} = \\ &= \lim_{x \rightarrow \pi} \frac{2 \sin((\pi-x)/4) \sin((\pi-x)/4)}{4 \cdot \frac{\pi-x}{4} (\pi+x)} = \frac{1}{2} \lim_{x \rightarrow \pi} \frac{\sin((\pi-x)/4)}{\pi+x} = \frac{1}{2} \frac{0}{2\pi} = 0. \end{aligned}$$

## V. BIR O‘ZGARUVCHILI FUNKSIYANING DIFFERENSIAL HISOBI VA UNING TADBIQLARI

### 5.1. HOSILA, UNING GEOMETRIK VA FIZIK MA’NOSI.

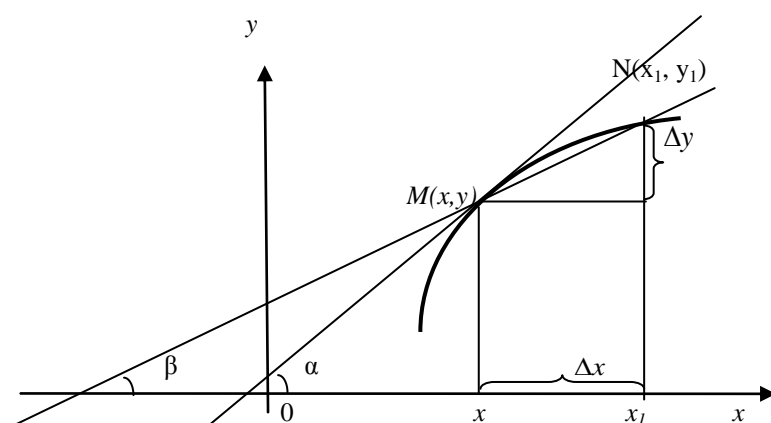
#### DIFFERENSIALLASH QOIDALARI VA FORMULALARI

Eslatib o‘tamizki,  $y = f(x)$  funksiyaning *orttirmasi* deb

$$\Delta y = f(x + \Delta x) - f(x)$$

ayirmaga aytiladi, bu yerda  $\Delta x$  argument  $x$  ning orttirmasi. 5.1 rasmdan ko‘rinib turibdiki

$$\frac{\Delta y}{\Delta x} = \operatorname{tg} \beta . \quad (5.1)$$



5.1. rasm

Funksiya orttirmasi  $\Delta y$  ning, argument orttirmasi  $\Delta x$  ga nisbatining  $\Delta x$  ixtiyoriy tarzda nolga intilgandagi limitiga,  $y = f(x)$  funksiyaning  $x$  nuqtadagi *hosilasi* deyiladi va quyidagilarning biri orqali belgilanadi:

$y', f'(x), \frac{dy}{dx}$ . Shunday qilib, ta'rifga ko'ra

$$y' = f'(x) = \frac{dy}{dx} = \lim_{\Delta x \rightarrow 0} \frac{\Delta y}{\Delta x} = \lim_{\Delta x \rightarrow 0} \frac{f(x + \Delta x) - f(x)}{\Delta x} . \quad (5.2)$$

Agar yuqoridagi (5.2) formulada limit mavjud bo‘lsa,  $f(x)$  funksiya  $x$  nuqtada *differensiallanuvchi*, hosila olish amalini esa *differensiallash* deyiladi.



(5.1) tenglik va hosila ta'rifidan, hosilaning  $x$  nuqtadagi qiymati  $f(x)$  funksiya grafigiga  $M(x,y)$  nuqtada o'tkazilgan urinmaning  $Ox$  o'qi musbat yo'nalishi bilan hosil qilgan burchagi tangensiga tengligi kelib chiqadi.

Osongina ko'rsatish mumkinki, fizik jihatdan qaraganda,  $y' = f'(x)$  hosilaning qiymati  $x$  argumentga nisbatan funksiya o'zgarishining tezligiga teng.

Agar  $C$  - o'zgarmas son bo'lsa va  $u = u(x), v = v(x)$  differensiallanuvchi funksiyalar bo'lsa, u holda quyidagi differensiallash formulalari o'rinli:

1)  $C' = 0$ ;

2)  $x' = 1$ ;

3)  $(u \pm v)' = u' \pm v'$ ;

4)  $(Cu)' = Cu'$ ;

5)  $(uv)' = u'v + uv'$ ;

6)

$$\left(\frac{u}{v}\right)' = \frac{u'v - uv'}{v^2}, \quad v \neq 0;$$

7)

$$\left(\frac{C}{v}\right)' = -\frac{Cv'}{v^2}, \quad v \neq 0;$$

8) agar  $y = f(u)$ ,  $u = \varphi(x)$ , ya'ni  $y = f(\varphi(x))$  murakkab funksiya differensiallanuvchi funksiyalardan tuzilgan bo'lsa, u holda

$$y_x' = y_u' u_x' \quad \text{yoki} \quad \frac{dy}{dx} = \frac{dy}{du} \frac{du}{dx}.$$

9) agar  $y = f(x)$  funksiyaning,  $x = g(y)$  va  $\frac{dg}{dy} = g'(y) \neq 0$

Differensiallanuvchi teskari funksiyasi mavjud bo'lsa, u holda

$$f'(x) = \frac{1}{g'(y)}.$$

Hosilaning ta'rifi va differensiallash qoidalariga asosan *asosiy elementar funksiyalarning hosilalari* jadvalini tuzish mumkin:

$$1) (u^\alpha)' = \alpha u^{\alpha-1} u' \quad (\alpha \in \mathbf{R});$$

$$2) (a^u)' = a^u \cdot \ln a \cdot u';$$

$$4) (\log_a u)' = \frac{u'}{u \cdot \ln a};$$

$$6) (\sin u)' = \cos u \cdot u';$$

$$8) (\operatorname{tgu})' = \frac{u'}{\cos^2 u};$$

$$10) (\arcsin u)' = \frac{u'}{\sqrt{1-u^2}};$$

$$12) (\operatorname{arctgu})' = \frac{u'}{1+u^2};$$

$$14) (\operatorname{shu})' = \operatorname{chu} \cdot u';$$

$$16) (\operatorname{thu})' = \frac{u'}{\operatorname{ch}^2 u};$$

$$3) (e^u)' = e^u \cdot u';$$

$$5) (\ln u)' = \frac{u'}{u};$$

$$7) (\cos u)' = -\sin u \cdot u';$$

$$9) (\operatorname{ctgu})' = -\frac{u'}{\sin^2 u};$$

$$11) (\arccos u)' = -\frac{u'}{\sqrt{1-u^2}};$$

$$13) (\operatorname{arcctgu})' = -\frac{u'}{1+u^2};$$

$$15) (\operatorname{chu})' = \operatorname{shu} \cdot u';$$

$$17) (\operatorname{cthu})' = -\frac{u'}{\operatorname{sh}^2 u}.$$

$y = f(x)$  egri chiziqqa  $M_0(x_0, f(x_0))$  nuqtada o'tkazilgan *urinma tenglamasi*

$$y - f(x_0) = f'(x_0)(x - x_0) \quad (f'(x_0) \neq 0).$$

$y = f(x)$  egri chiziqqa  $M_0(x_0, f(x_0))$  nuqtada o'tkazilgan *normal tenglamasi*

$$y - f(x_0) = -\frac{1}{f'(x_0)}(x - x_0) \quad (f'(x_0) \neq 0).$$

$f'(x_0) = 0$  da normal tenglamasi  $x = x_0$  ko'rinishda bo'ladi.

*Ikki egri chiziqning, ular kesishish nuqtasida hosil qilgan burchagi* deb, shu nuqtada ularga o'tkazilgan urinmalar orasidagi burchakka aytiladi.

**1-misol.** Hosila ta'rifidan foydalanib  $y = \frac{2x}{3x+1}$  funksiyaning hosilasini toping.

**Yechish:** Ta'rifga asosan ixtiyoriy  $\Delta x$  da:

$$\Delta y = \frac{2(x+\Delta x)}{3(x+\Delta x)+1} - \frac{2x}{3x+1} = \frac{6x^2 + 6x\Delta x + 2x + 2\Delta x - 6x^2 - 6x\Delta x - 2x}{(3(x+\Delta x)+1)(3x+1)} = \frac{2\Delta x}{(3(x+\Delta x)+1)(3x+1)}$$

$$\frac{\Delta y}{\Delta x} = \frac{2}{(3(x+\Delta x)+1)(3x+1)} \quad \text{ekanligidan} \quad y' = \lim_{\Delta x \rightarrow 0} \frac{\Delta y}{\Delta x} = \lim_{\Delta x \rightarrow 0} \frac{2}{(3(x+\Delta x)+1)(3x+1)} = \frac{2}{(3x+1)^2}$$

kelib chiqadi.

**2-misol.**  $y = |x|$  funksiyaning  $x=0$  nuqtadagi hosilasi qiymatini toping.

**Yechish:** Argumentning  $x=0$  nuqtadagi ixtiyoriy  $\Delta x$  orttirmasi uchun funksiya orttirmasi

$$\Delta y = |\Delta x| = \begin{cases} -\Delta x, \text{ agar } \Delta x < 0 \\ \Delta x, \text{ agar } \Delta x > 0 \end{cases} .$$

Hosilaning ta'rifiga ko'ra esa

$$y' = \lim_{\Delta x \rightarrow 0} \frac{\Delta y}{\Delta x} = \begin{cases} -1, \text{ agar } \Delta x < 0 \\ 1, \text{ agar } \Delta x > 0 \end{cases} .$$

Bu esa  $y = |x|$  funksiya  $x=0$  nuqtada hosilaga ega emasligini ko'rsatadi.

Shuni ta'kidlash lozimki, funksiya  $x=0$  nuqtada uzluksiz, chunki

$$\lim_{\Delta x \rightarrow 0} |\Delta y| = \lim_{\Delta x \rightarrow 0} |\Delta x| = 0$$

Shunday qilib, funksiya biror nuqtada uzluksiz ekanligidan, uning Differensiallanuvchi ekanligi kelib chiqmaydi. Osongina ko'rsatish mumkinki, funksiyaning Differensiallanuvchi bo'lgan barcha nuqtalarida uzluksiz bo'ladi.

## 5.2 LOGARIFMIK DIFFERENSIALLASH

$y = f(x)$  funksiyaning *logarifmik hosilasi* deb, bu funksiyaning logarifmidan olingan hosilaga aytiladi, ya'ni

$$(\ln f(x))' = \frac{f'(x)}{f(x)}$$

Funksiyani logarifmlash va differensiallashning ketma- ket qo'llanilishi *logarifmik differensiallash* deb ataladi. Ba'zi hollarda avval funksiyaning

logarifmlash, uning hosilasini topishni osonlashtiradi. Masalan,  $y = u^v$ , (bu yerda  $u = u(x), v = v(x)$ ) funksiyaning hosilasini topishda, avval logarifmlash quyidagi formulaga olib keladi:

$$y' = u^v \ln u \cdot v' + v u^{v-1} \cdot u'$$

**1-misol.**  $y = (\sin 2x)^{x^3}$  funksiyaning hosilasini toping.

**Yechish:** Berilgan funksiyaning logarifmlasak,

$$\ln y = x^3 \ln \sin 2x.$$

Tenglikning ikkala tomonini  $x$  bo'yicha differensiallab

$$(\ln y)' = (x^3)' \cdot \ln \sin 2x + x^3 (\ln \sin 2x)'$$

ni hosil qilamiz. Bu yerdan

$$\frac{y'}{y} = 3x^2 \cdot \ln \sin 2x + x^3 \frac{1}{\sin 2x} 2 \cos 2x \quad \text{yoki} \quad y' = y(3x^2 \cdot \ln \sin 2x + 2x^3 \operatorname{ctg} 2x),$$

$$y' = (\sin 2x)^{x^3} (3x^2 \cdot \ln \sin 2x + 2x^3 \operatorname{ctg} 2x).$$

Agar  $y$  va  $x$  o'zgaruvchilar orasidagi bog'lanish oshkormas ko'rinishda bo'lib,  $F(x, y) = 0$  tenglama bilan berilgan bo'lsa, u holda  $y' = y'_x$  hosilani topish uchun eng sodda hollarda  $y$  ni  $x$  ning funksiyasi deb qarab  $F(x, y) = 0$  tenglamaning ikkala tomonini differensiallab, hosil bo'lgan chiziqli tenglamadan  $y'$  ni topish mumkin.

**2-misol.** Agar  $x^3 + y^3 - 3xy = 0$  bo'lsa,  $y'$  toping.

**Yechish:**  $y$  ni  $x$  ning funksiyasi deb hisoblab, berilgan tenglamaning ikkala tomonini differensiallaymiz:

$$3x^2 + 3y^2 y' - 3y - 3xy' = 0.$$

Bu yerdan

$$y' = \frac{3x^2 - 3y}{3x - 3y^2}.$$

### 5.3. YUQORI TARTIBLI HOSILALAR

Biror  $u=f(x)$  funksiyaning ikkinchi tartibli hosilasi deb, uning birinchi tartibli hosilasidan olingan hosilaga aytiladi, ya'ni  $(y)'$  va uni  $y''$  va  $f''(x)$  yoki  $\frac{d^2y}{dx^2}$  kabi belgilarning biri orqali yoziladi. Agar moddiy nuqtaning to'g'ri chiziqli harakati  $S=S(t)$  funksiya bilan berilgan bo'lsa,  $S'=S'(t)$  va  $S''=S''(t)$  lar mos ravishda uning tezligi va tezlanishini ifodalaydi.

Agar  $u$  funksiyaning  $x$  argumentga bo'lgan bog'lanishi  $x=x(t)$ ,  $u=u(t)$  parametrik tenglamalar bilan berilgan bo'lsa, u holda:

$$\frac{dy}{dx} = \frac{y'(t)}{x'(t)}, \quad \frac{d^2y}{dx^2} = \frac{d}{dt} \left( \frac{y'(t)}{x'(t)} \right) \cdot \frac{1}{x'(t)}, \quad (5.3)$$

bu yerda shtrix  $t$  bo'yicha hosilani bildiradi.

$u=f(x)$  funksiyaning  $n$ -tartibli hosilasi deb uning  $(n-1)$ - tartibli hosilasidan olingan hosilaga aytiladi. Uni belgilash uchun quyidagi belgilarning biri ishlatiladi:  $y^{(n)}$ ,  $f^{(n)}(x)$ ,  $\frac{d^n y}{dx^n}$ . Demak,  $y^{(n)} = (y^{(n-1)})'$  ekan.

**1-misol.**  $y = \ln(x + \sqrt{x^2 + a^2})$  funksiyaning 2- tartibli hosilasi hisoblansin.

**Yechish:**

$$y' = \frac{(x + \sqrt{x^2 + a^2})'}{x + \sqrt{x^2 + a^2}} = \frac{1}{x + \sqrt{x^2 + a^2}} \cdot \left( 1 + \frac{x}{\sqrt{x^2 + a^2}} \right) = \frac{\sqrt{x^2 + a^2} + x}{(x + \sqrt{x^2 + a^2}) \cdot \sqrt{x^2 + a^2}} = \frac{1}{\sqrt{x^2 + a^2}},$$

$$y'' = -\frac{1}{2} (x^2 + a^2)^{-\frac{3}{2}} \cdot 2x = -\frac{x}{\sqrt{(x^2 + a^2)^3}}.$$

**2-misol.**  $y=(2x-1)^4$  funksiya uchun  $y'(1)$  va  $y'(-1)$  hamda  $y''(1)$ ,  $y''(-1)$  hisoblansin.

**Yechish:**  $y'=8(2x-1)^3$  bo'lganligidan  $y'(1)=8$ ,  $y'(-1)=-216$ ,  $y''=48(2x-1)^2$  dan esa,  $y''=(+1)=48$  va  $y''=(-1)=432$ .

**3-misol.**  $y = \sin x$  funksiyaning  $n$ - tartibli hosilasi hisoblansin.

**Yechish:**  $y' = \cos x = \sin\left(x + \frac{\pi}{2}\right),$

$$y'' = \cos\left(x + \frac{\pi}{2}\right) = \sin\left(x + 2 \cdot \frac{\pi}{2}\right),$$

$$y''' = \cos\left(x + 2 \cdot \frac{\pi}{2}\right) = \sin\left(x + 3 \cdot \frac{\pi}{2}\right),$$

.....

$$y^{(n)} = \cos\left(x + (n-1) \frac{\pi}{2}\right) = \sin\left(x + n \frac{\pi}{2}\right).$$

**4- misol.**  $x = \ln t$  va  $y = t^3 + 2t + 1$  parametrik tenglamalar bilan berilgan funksiyaning 2- tartibli hosilasi hisoblansin.

**Yechish:** (5.3) formulaga binoan,  $\frac{dy}{dx} = \frac{3t^2 + 2}{1/t} = 3t^3 + 2t,$

$$\frac{d^2y}{dx^2} = \frac{9t^2 + 2}{1/t} = 9t^3 + 2t.$$

#### 5.4. BIRINCHI VA YUQORI TARTIBLI DIFFERENSIALLAR HAMDA ULARNING TADBIQLARI

Biror  $y=f(x)$  funksiyaning ixtiyoriy  $x$  nuqtadagi 1-tartibli differensial deb, uning shu nuqtadagi orttirmasining,  $\Delta x = dx$  orttirmaga nisbatan chiziqli bo‘lgan qismiga aytiladi. Umuman, funksiyaning differensial  $du$  ni hisoblash uchun uning  $x$  nuqtadagi hosilasini  $dx$  ga ko‘paytiriladi.

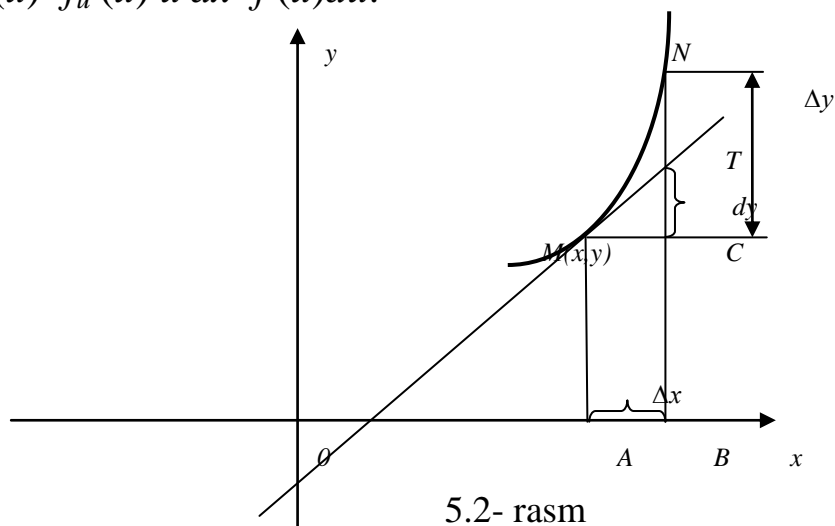
$dy = y' dx = f'(x) dx$ . Shu boisdan,  $y' = \frac{dy}{dx}$  tenglik har doim o‘rinlidir. 5.2-

rasmdan ko‘rinib turibdiki, agar  $MN$ ,  $y=f(x)$  funksiya grafigining yoyi bo‘lib,  $MT$  esa, uning  $M(x,y)$  nuqtasiga o‘tkazilgan urinmasi hamda  $AB = \Delta x = dx$  kabi bo‘ladigan bo‘lsa, u holda  $CT = dy$  va  $CN = \Delta y$  kabi bo‘ladi.

Funksiyaning  $dy$  differensial o‘zining  $\Delta y$  orttirmasidan,  $\Delta x$  ga nisbatan yuqori tartibdagi cheksiz kichik miqdorgagina farq qiladi.

Differensialning ta'rifidan hamda hosilani hisoblash qoidalariga ko'ra,  $u=u(x)$  va  $v=v(x)$  funksiyalar uchun quyidagilarni yozish mumkin:

- 1)  $dC=0$  ( $C=\text{const.}$ );
- 2)  $dx=\Delta x$  (bu yerda  $x$  erkli o'zgaruvchi);
- 3)  $d(u\pm v)=du\pm dv$ ;
- 4)  $d(uv)=udv+vdu$ ;
- 5)  $d(Cu)=Cdu$ ;
- 6)  $d(u/v)=(vdu-udv)/v^2$  ( $v\neq 0$ );
- 7)  $df(u)=f'_u(u) u'dx=f'(u)du$ .



5.2- rasm

**1-misol.**  $y=\sin^5 3x$  ning differensialini hisoblansin.

**Yechish:** Funksiyaning hosilasi  $y'=5\sin^4 3x \cdot \cos 3x \cdot 3$  bo'lganligidan, quyidagini hosil qilamiz  $dy=15\sin^4 3x \cdot \cos 3x dx$ .

$y=f(x)$  funksiyaning  $n$ -tartibli differensial deb, uning  $(n-1)$ - tartibli differensialidan hisoblangan differensialga aytiladi, ya'ni,  $d^n y = d(d^{n-1} y)$ . Ta'rifga binoan  $d^2 y = y'' dx^2$ ,  $d^3 y = y''' dx^3$ , ...,  $d^n y = y^{(n)} dx^n$  bo'ladi. ( $dx^n = (dx)^n$ ).

Agar  $y=f(u)$  va  $u=\varphi(x)$  bo'lsa, u holda:  $d^2 y = y''(du)^2 + y' d^2 u$ , bu yerda, differensiallash u o'zgaruvchiga nisbatan bajariladi.

**2-misol.**  $y=\ln(1+x^2)$  funksiya uchun  $d^2 y$  hisoblansin.

$$y' = \frac{2x}{1+x^2} \text{ va } y'' = \frac{2(1-x^2)}{(1+x^2)^2} \text{ bo'lganligidan, } d^2y = \frac{2(1-x^2)}{(1+x^2)^2} dx^2.$$

Yuqorida ta'kidlaganidek,  $\Delta y \approx dy$  yoki  $f(x+\Delta x) - f(x) \approx f'(x)dx$  deb yozish mumkin, bundan esa,  $f(x+\Delta x) \approx f(x) + f'(x)dx$  ni hosil qilamiz.

Ushbu formula, ko'pincha,  $f(x)$  funksiyaning qiymatini taqribiy hisoblash uchun qo'llaniladi (bu yerdagi  $\Delta x$  argument  $x$  ning kichik orttirmasidir).

**3-misol.** Agar kubning hajmi 27 birlikdan  $27,1\text{m}^3$  gacha ortgan bo'lsa, uning tomonlarining orttirmasi hisoblansin.

**Yechish:** Agar kubning hajmini  $x$  deb belgilasak, u holda uning tomonlari  $y = \sqrt[3]{x}$  ga teng bo'ladi. Masalaning shartiga ko'ra,  $x=27$ ,  $\Delta x = 0,1$  bo'lganligi uchun kub tomonlarining orttirmasi

$$\Delta y \approx dy = y'(x) \cdot \Delta x = \frac{1}{3\sqrt[3]{27^2}} \cdot 0,1 = \frac{0,1}{27} \approx 0,0037 \text{ ga teng bo'ladi.}$$

## 5.5. Lopital qoidalari.

**1-teorema (Roll).** Agar  $u=f(x)$  funksiya,  $[a;b]$  kesmada uzluksiz bo'lib, kesmaning ichidagi barcha nuqtalarda differentsiallanuvchi hamda  $f(a)=f(b)$  bo'lsa, u holda hech bo'lmaganda Shunday bir  $x=s$  nuqta ( $a < s < b$ ) mavjudki, har doim uning uchun  $f'(c)=0$  shart o'rinli bo'ladi.

**2- teorema (Lagranj).** Agar  $u=f(x)$  funksiya,  $[a;b]$  kesmada uzluksiz bo'lib, kesmaning ichidagi barcha nuqtalarda differentsiallanuvchi bo'lsa, u holda hech bo'lmaganda Shunday bir  $x=s$  nuqta ( $a < s < b$ ) mavjud bo'ladi, har doim uning uchun  $f(b)-f(a)=f'(c)(b-a)$  formula o'rinli bo'ladi.

Ushbu formulani chekli orttirmalar haqidagi Lagranj formulasi deb yuritiladi.



**3- teorema (Koshi).** Agar  $u=f(x)$  bilan  $u=\varphi(x)$  funksiyalar,  $[a; b]$  kesmada uzluksiz hamda shu kesma ichida differensiallanuvchi ( $\varphi'(x)\neq 0$ ) bo'lsalar, u holda hech bo'lmaganda Shunday bir  $x=s$  nuqta mavjud bo'ladiki ( $a<s<b$ ), har doim quyidagi tenglik o'rinli bo'ladi:

$$\frac{f(b)-f(a)}{\varphi(b)-\varphi(a)} = \frac{f'(c)}{\varphi'(c)}, \varphi'(c)\neq 0$$

**Lopital qoidasi** ( $\frac{0}{0}$  va  $\frac{\infty}{\infty}$  kabi aniqmasliklarni ochish). Agar  $u=f(x)$  bilan  $u=\varphi(x)$  funksiyalar, biror  $x=x_0$  nuqta atrofida Koshi teoremasining shartlarini qanoatlantirib,  $x\rightarrow x_0$  da 0 ga yoki  $\pm\infty$  ga intiladigan bo'lsalar hamda  $\lim_{x\rightarrow x_0} \frac{f'(x)}{\varphi'(x)}$  chekli limit mavjud bo'lsa, u holda  $\lim_{x\rightarrow x_0} \frac{f(x)}{\varphi(x)}$  chekli limit mavjud bo'ladi va bu limitlar o'zaro teng bo'ladilar, ya'ni:

$$\lim_{x\rightarrow x_0} \frac{f(x)}{\varphi(x)} = \lim_{x\rightarrow x_0} \frac{f'(x)}{\varphi'(x)}.$$

Ushbu qoida  $x_0=\pm\infty$  bo'lganda ham o'rinli bo'lib qolaveradi.

Agar  $\frac{f'(x)}{\varphi'(x)}$  nisbat uchun qaralayotgan nuqtada yana yuqoridagi aniqmasliklar yuz beradigan bo'lsa, u holda, agar  $f'(x)$  va  $\varphi'(x)$  lar uchun  $f(x)$  bilan  $\varphi(x)$  larga nisbatan yuqorida keltirilgan shartlar o'rinli bo'ladigan bo'lsa, ikkinchi tartibli hosilalarning nisbati uchun ham limitga o'tish mumkin va hokazo. Ta'kidlash lozimki, garchi funksiyalar nisbatining limiti mavjud bo'lsada, ammo hosilalar nisbatining hech qanday limiti mavjud bo'lmasligi ham mumkin.

**1-misol.**  $\lim_{x\rightarrow\infty} \frac{x+\sin x}{x+\cos x}$  ni hisoblansin.

**Yechish:** 
$$\lim_{x\rightarrow\infty} \frac{x+\sin x}{x+\cos x} = \lim_{x\rightarrow\infty} \frac{1+\frac{\sin x}{x}}{1+\frac{\cos x}{x}} = 1.$$

Ammo,  $\lim_{x \rightarrow \infty} \frac{(x + \sin x)'}{(x + \cos x)'} = \lim_{x \rightarrow \infty} \frac{1 + \cos x}{1 - \sin x}$  ning hech qanaqa limiti mavjud emas,

chunki,  $x \rightarrow \infty$  da, kasrning surat hamda maxraji  $[0;2]$  kesmadagi har qanday qiymatini qabul qilish mumkin, hosilalarning nisbati esa, ixtiyoriy manfiy bo'lmagan qiymatlarni qabul qiladi. Demak, bu holatda Lopital qoidasini qo'llash mumkin emas.

**2-misol.**  $\lim_{x \rightarrow 0} \frac{e^{3x} - 1}{\sin 5x}$  ni hisoblansin.

**Yechish:** Bu yerda Lopital qoidasining barcha shartlari bajarilmoqda.

Shuning uchun,

$$\lim_{x \rightarrow 0} \frac{e^{3x} - 1}{\sin 5x} = \lim_{x \rightarrow 0} \frac{3e^{3x}}{5 \cos 5x} = \frac{3}{5}.$$

Agar  $0 \cdot \infty$  yoki kabi aniqmaslikni ochish lozim bo'lsa, uni yoki  $\frac{0}{0}$  yoki

$\frac{\infty}{\infty}$  ga keltirib, so'ngra Lopital qoidasi qo'llaniladi.

**3-misol.**  $\lim_{x \rightarrow \infty} x^3 e^{-x}$  ni hisoblang.

**Yechish:** Bu yerda  $0 \cdot \infty$  kabi aniqmaslikni ochishga to'g'ri keladi, uni quyidagicha o'zgartiramiz:

$$\lim_{x \rightarrow \infty} x^3 e^{-x} = \lim_{x \rightarrow \infty} \frac{x^3}{e^x} = \left( \frac{\infty}{\infty} \right) = \lim_{x \rightarrow \infty} \frac{3x^2}{e^x} = \left( \frac{\infty}{\infty} \right) = \lim_{x \rightarrow \infty} \frac{6x}{e^x} = \left( \frac{\infty}{\infty} \right) = \lim_{x \rightarrow \infty} \frac{6}{e^x} = \frac{6}{e^\infty} = 0.$$

Agar  $\lim_{x \rightarrow x_0} f_1(x) = \infty$  va  $\lim_{x \rightarrow x_0} f_2(x) = \infty$  bo'lsa, u holda  $f_1(x) \cdot f_2(x)$  ning limiti  $\infty$

$\infty$  aniqmaslikka olib keladi. Ammo,  $f_1(x) \cdot f_2(x) = f_1(x) \left( 1 - \frac{f_2(x)}{f_1(x)} \right)$  deb yozsak,

hamda  $\lim_{x \rightarrow x_0} \frac{f_2(x)}{f_1(x)} = 1$  bo'lsa,  $0 \cdot \infty$  kabi aniqmaslikka kelamiz.

Endi  $f(x)^{\varphi(x)}$  kabi funksiyani qaraymiz.

**1.** Agar  $\lim_{x \rightarrow x_0} f(x) = 0$ ,  $\lim_{x \rightarrow x_0} \varphi(x) = 0$  bo'lsa,  $0^0$  aniqmaslik hosil bo'ladi.

**2.** Agar  $\lim_{x \rightarrow x_0} f(x) = 1$ ,  $\lim_{x \rightarrow x_0} \varphi(x) = 0$  bo'lsa,  $1^0$  aniqmaslikka ega bo'lamiz.

**3.** Agar  $\lim_{x \rightarrow x_0} f(x) = \infty$ ,  $\lim_{x \rightarrow x_0} \varphi(x) = 0$  bo'lsa,  $\infty^0$  aniqlanish hosil bo'ladi.

Bu xildagi aniqlanishlarni ochib chiqish uchun logarifmlash usuli deb ataluvchi usuldan foydalanamiz, ya'ni faraz qilaylik,  $\lim_{x \rightarrow x_0} f(x)^{\varphi(x)} = A$  bo'lsin.

Logarifmik funksiyaning uzluksiz ekanligidan,  $\lim_{x \rightarrow x_0} \ln y = \ln \left( \lim_{x \rightarrow x_0} y \right)$  ni yozish

mumkin. U holda,  $\ln A = \lim_{x \rightarrow x_0} (\varphi(x) \cdot \ln f(x))$ . Natijada, yuqoridagi

aniqlanishlarning barchasi  $0 \cdot \infty$  ga keltiriladi.

**4-misol.**  $\lim_{x \rightarrow 0} (e^x + x)^{\frac{1}{x}}$  ni hisoblansin.

**Yechish:** Hisoblanishi lozim bo'lgan limitni  $A$  deb belgilaymiz. U holda:

$$\ln A = \lim_{x \rightarrow 0} \left( \frac{1}{x} \cdot \ln(e^x + x) \right) = \lim_{x \rightarrow 0} \frac{\ln(e^x + x)}{x} = \lim_{x \rightarrow 0} \frac{e^x + 1}{e^x + x} = 2. \text{ Demak } A = e^2.$$

## 5.6. HOSILANING FUNKSIYA VA UNING GRAFIGINI

### TEKSHIRISHGA QO'LLANILISHI

Differensial hisobning muhim amaliy masalalaridan biri funksiya o'zgarishini tekshirishning umumiy usullarini ishlab chiqishdir.

Biror  $X$  oraliqda aniqlangan  $y=f(x)$  funksiya argument  $x$  ning shu oraliqdagi  $x_1 < x_2$  shartni qanoatlantiruvchi qiymatlari uchun  $f(x_1) < f(x_2)$  (yoki  $f(x_1) > f(x_2)$ ) tengsizlikni qanoatlantirsa, u holda, funksiyaning shu oraliqda o'suvchi (yoki kamayuvchi) deb ataladi.

*Funksiyaning o'sishi (kamayishi) belgilarini sanab o'tamiz:*

1. Agar  $[a;b]$  kesmada differensiallanuvchi bo'lgan  $y=f(x)$  funksiya o'suvchi (yoki kamayuvchi) bo'lsa, u holda kesmaning barcha nuqtalarida funksiyaning hosilasi manfiy (yoki musbat) bo'la olmaydi, ya'ni,  $f'(x) \geq 0$  (yoki  $f'(x) \leq 0$ ) dir.

2. Agar  $[a;b]$  kesmada uzluksiz hamda kesmaning ichida differensiallanuvchi bo'lgan funksiya musbat (yoki manfiy) hosilaga ega bo'lsa, u holda funksiya shu kesmada o'suvchi (yoki kamayuvchi) bo'ladi.

Shuningdek, agar  $y=f(x)$  funksiya biror  $X$  oraliqning ixtiyoriy  $x_1 < x_2$  qiymatlarida  $f(x_1) \leq f(x_2)$  (yoki  $f(x_1) \geq f(x_2)$ ) kabi shartni qanoatlantirsa, uni shu oraliqda *kamaymaydigan* (yoki *o'smaydigan*) funksiya deyiladi.

Funksiyaning kamaymaydigan yoki o'smaydigan oraliqlarini uning *monotonlik oraliqlari* deb yuritiladi. Funksiyaning aniqlanish sohasidagi monotonligining xarakteri, faqatgina uning birinchi tartibli hosilasining ishorasi o'zgaradigan nuqtalardagina o'zgarishi mumkin. Funksiyaning birinchi tartibli hosilasi nolga yoki uzilishga ega bo'ladigan nuqtalar, uning *kritik nuqtalari* deb ataladi.

**1-misol.**  $y=2x^2-\ln x$  funksiyaning kritik nuqtalari va monotonlik oraliqlari aniqlansin.

**Yechish:** Funksiya  $x>0$  qiymatlarda aniqlangan. Uning hosilasi,  $y' = 4x - \frac{1}{x} = \frac{4x^2 - 1}{x}$  bo'lib,  $x_0 = \frac{1}{2}$  da  $y'=0$  bo'lganligi uchun kritik nuqta orqali funksiyaning aniqlanish sohasini  $\left(0; \frac{1}{2}\right)$  va  $\left(\frac{1}{2}; +\infty\right)$  larga ajratamiz. Birinchi oraliqda  $y'<0$  bo'lib, ikkinchi oraliqda esa,  $y'>0$ . Demak, funksiya  $(0; 0,5)$  da kamayuvchi bo'lib,  $(0,5; +\infty)$  da esa o'suvchi bo'lar ekan.

Tarifga binoan,  $y=f(x)$  funksiya uchun har qanday yetarlicha kichik  $|\Delta x| \neq 0$  larda  $f(x_1+\Delta x) < f(x_1)$  kabi tengsizlik o'rinli bo'lsa, u holda  $x_1$  nuqtani funksiyaning *lokal maksimumi* deb ataladi. Aksincha, har qanday yetarlicha kichik  $|\Delta x| \neq 0$  lar uchun  $f(x_2+\Delta x) > f(x_2)$  shart bajarilsa,  $x_2$  ni funksiyaning *lokal minimumi* deb ataladi. Maksimum va minimum nuqtalar birgalikda funksiyaning *ekstremum nuqtalari* deyilib,

funksiyaning maksimumi bilan minimumi birgalikda uning *ekstremal qiymatlari* deb ataladi.

**1-teorema (lokal ekstremum mavjudligining zaruriy belgisi).** Agar  $x = x_0$  nuqtada  $y = f(x)$  funksiya ekstremumga yerishadigan bo'lsa, u holda, yoki  $f'(x_0) = 0$  bo'ladi, yoki  $f'(x_0)$  mavjud bo'lmaydi.

Differensiallanuvchi funksiyaning ekstremum nuqtalarida uning grafiga o'tkazilgan *urinmalar* har doim  $Ox$  o'qiga parallel bo'ladi.

**2-misol.**  $y = (x+1)^3$  funksiyaning ekstremumga tekshirilsin.

**Yechish:** Funksiyaning hosilasi  $u' = 3(x+1)^2$  bo'lib,  $x = -1$  da  $u' = 0$  bo'ladi. Ammo,  $x = -1$  da funksiya ekstremumga ega emas, chunki,  $x > -1$  da  $(x+1)^3 > 0$  bo'lib,  $x < -1$  da esa,  $(x+1)^3 < 0$  dir, hamda  $x = -1$  da  $(x+1)^3 = 0$ . Demak, funksiya hosilasining nolga aylanishi, uning ekstremumi mavjudligini taminlamas ekan.

**3-misol.**  $u = |x|$  funksiyaning ekstremumga tekshirilsin.

**Yechish:**  $y(0) = 0$  bo'lganligidan, hamda  $x \neq 0$  da  $y = |x| > 0$  ligi uchun  $x = 0$ , minimum nuqtadir. Lekin, §6.1 ning 2-misolida funksiyaning  $x = 0$  nuqtada hosilasi mavjud emasligi ko'rsatilgan edi.

Yuqoridagi misollardan ko'rinadiki, har qanday kritik nuqtalarda ham funksiya ekstremumga ega bo'lavermas ekan. Ammo, biror nuqtada funksiya ekstremumga yerishadigan bo'lsa, u nuqta har doim ham funksiyaning kritik nuqtasi bo'ladi.

Funksiyaning ekstremumini topish uchun quyidagicha ish yuritiladi: barcha kritik nuqtalar aniqlangandan so'ng, ularning har birida alohida-alohida funksiyaning ekstremumi mavjudligi yoki umuman ekstremum mavjud emasligi tekshiriladi.

## **2-teorema (lokal ekstremum mavjudlining birinchi yetarli sharti)**

Aytaylik,  $u=f(x)$  funksiya, biror  $x=x_0$  kritik nuqta yotadigan oraliqda uzluksiz bo'lib,  $u$  oraliqning barcha nuqtalarida differensiallanuvchi ( $x_0$  nuqtada differensiallanuvchi bo'lmasligi ham mumkin) bo'lsin. Agar  $x < x_0$  da  $f'(x) > 0$ ,  $x > x_0$  da esa,  $f'(x) < 0$  bo'ladigan bo'lsa, funksiya  $x=x_0$  da maksimumga erishadi. Aksincha, yani,  $x < x_0$  da  $f'(x) < 0$  va  $x > x_0$  da  $f'(x) > 0$  bo'lsa, funksiya  $x=x_0$  nuqtada minimumga yerishadi.

Teorema shartida keltirilgan tengsizliklar,  $x=x_0$  kritik nuqtaning yetarlicha kichik atrofida bajarilishi lozimligini yana bir bor takidlaymiz. Birinchi tartibli hosila yordamida funktsiyani ekstremumga tekshirish sxemasi jadval ko'rinishida yozilishi mumkin (6.1-jadvalga qaralsin).

**4-misol.**  $y = 2x + 3\sqrt[3]{x^2}$  funksiyaning ekstremumga tekshirilsin.

**Yechish:** Qaralayotgan funksiya barcha  $x \in \mathbb{R}$ lar uchun aniqlangan hamda uzluksiz.  $y' = 2 + \frac{2}{\sqrt[3]{x}} = \frac{2}{\sqrt[3]{x}}(\sqrt[3]{x} + 1)$  ekanligi uchun, kritik nuqtalar  $x_1 = -1$  bilan  $x_2 = 0$  lardir, chunki ularning birinchisida  $y' = 0$  bo'lib, ikkinchisida esa,  $y'$  uzilishga ega. Bu nuqtalar funktsiyaning aniqlanish sohasini  $(-\infty; -1)$ ,  $(-1; 0)$  va  $(0; +\infty)$  kabi oraliqlarga ajratadi. Bu oraliqlarda hosila o'z ishorasini saqlaydi.  $(-\infty; -1)$  da,  $y' > 0$ , ya'ni, funksiya o'suvchi;  $(-1; 0)$  da esa,  $y' < 0$  va funksiya kamayuvchi;  $(0; +\infty)$  da,  $y' > 0$  va funksiya o'suvchidir. Demak,  $x_1 = -1$  kritik nuqta funktsiyaning lokal maksimum nuqtasi bo'lib,  $y_{max} = y(-1) = 1$ ;  $x_2 = 0$  nuqta esa, lokal minimum nuqta bo'lib,  $y_{min} = y(0) = 0$ . (5.1-rasmga qaralsin).

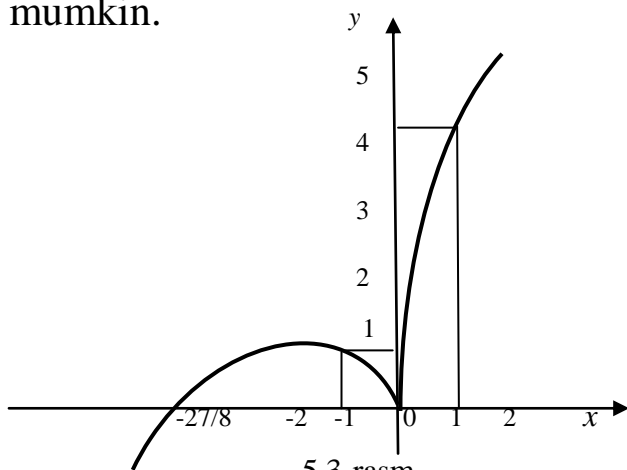
### 5.1- jadval

$f(x)$ ning $x_0$ kritik nuqta atrofidagi ishoralari			Kritik nuqtaning xaraktyeri
$x < x_0$	$x = x_0$	$x > x_0$	
+	$f(x_0)=0$ yoki mavjud emas	-	Maksimum nuqtasi
-	—     —	+	Minimum nuqtasi
+	—     —	+	Ekstremum mavjud emas (f-ya o'suvchi)
-	—     —	-	Ekstremum mavjud emas (f-ya kamayuvchi)

**3-teorema (lokal ekstremum mavjudligining ikkinchi yetarli sharti).**

Aytaylik,  $y=f(x)$  funksiya, biror  $x_0 \in X$  oraliqda ikki marta differentsiallanuvchi bo'lib,  $f'(x_0)=0$  bo'lsin. U holda, agar,  $f''(x_0) < 0$  shart bajarilsa, funksiya  $x=x_0$  nuqtada lokal maksimumga erishadi, aksincha,  $f''(x_0) > 0$  bo'lsa, lokal minimumga erishadi.

Agarda,  $f''(x_0)=0$  bo'lsa,  $x=x_0$  nuqtada ekstremum mavjud bo'lmasligi ham mumkin.



**5- misol.**  $y=x^2 e^{-x}$  funksiyaning ikkinchi tartibli hosila yordamida ekstremumga tekshirilsin.

**Yechish:** Birinchi hamda ikkinchi tartibli hosilalarni hisoblaymiz.

$$y' = 2xe^{-x} - x^2 e^{-x} = (2x - x^2) e^{-x}, \quad y'' = (2 - 2x) e^{-x} - (2x - x^2) e^{-x} = (x^2 - 4x + 2) e^{-x},$$

$y'=0$  dan,  $x_1=0$  va  $x_2=2$  kritik nuqtalarni aniqlaymiz. Ikkinchi tartibli hosilaning kritik nuqtalaridagi qiymatlari,  $y''(0)=2>0$  va  $y''(2)=-2e^{-2}<0$  bo'lganliklaridan,  $x_1=0$  nuqtada funksiya minimumga,  $x_2=2$  nuqtada esa, maksimumga ega bo'ladi;  $y_{min}=y(0)=0$ ,  $y_{max}=y(2)=4e^{-2}$ .

Qoidaga binoan,  $[a;b]$  kesmada uzluksiz bo'lgan  $y=f(x)$  funksiya o'zining eng kichik  $m$  va eng katta  $M$  qiymatlariga yoki  $(a;b)$  ochiq oraliqda yotuvchi kritik nuqtalarda yoki kesmaning chegaralarida erishishi mumkin.

**6-misol.**  $y=x^3-3x+3$  funksiyaning  $[-2;3]$  kesmadagi eng kichik va eng katta qiymatlari topilsin.

**Yechish:** Funksiyaning hosilasi  $y'=3x^2-3$  ekanligidan,  $x_1=-1$  bilan  $x_2=1$  lar funksiyaning kritik nuqtalaridir va ular  $(-2;3)$  oraliqda yotadi. Shuning uchun:  $y(-1)=5$ ,  $y(1)=1$ ,  $y(-2)=1$  va  $y(3)=21$  larni aniqlaymiz. Ushbu aniqlangan qiymatlarni o'zaro taqqoslab, funksiyaning eng kichik qiymati  $m=1$  ga va eng katta qiymati  $M=21$  ga teng ekanliklarini topamiz.

Aytaylik, egri chiziq  $(a;b)$  oraliqda o'zining  $u=f(x)$  funksiya bilan ifodalanadigan tenglamasi bilan berilgan bo'lsin. U holda, egri chiziqning barcha nuqtalari uning har qanday nuqtasiga o'tkazilgan urinmadan pastda joylashgan bo'lsa, uni  $(a;b)$  oraliqda *qavariq* deb aytiladi. Aksincha bo'lsa, ya'ni, yuqorida joylashsa, uni  $(a;b)$  oraliqda *botiq* deyiladi. Egri chiziqning biror  $M_0(x_0; f(x_0))$  nuqtasi, uning qavariqlik qismini botiqlik qismidan ajratgan bo'lsa, uni egri chiziqning *burilish nuqtasi* deb yuritiladi. Bu holda  $M_0$  nuqtada o'tkazilgan urinma mavjud deb faraz qilinadi.

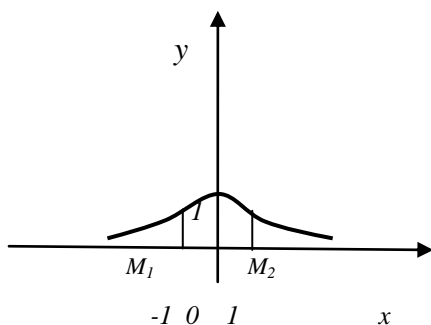
**4-teorema (funksiya grafigining qavariqligi (botiqligi) ning yetarli sharti)** Agar  $(a;b)$  oraliqning barcha nuqtalarida  $y=f(x)$  funksiyaning ikkinchi tartibli hosilasi manfiy (musbat) bo'lsa, ya'ni,  $f''(x)<0$  ( $f''(x)>0$ )



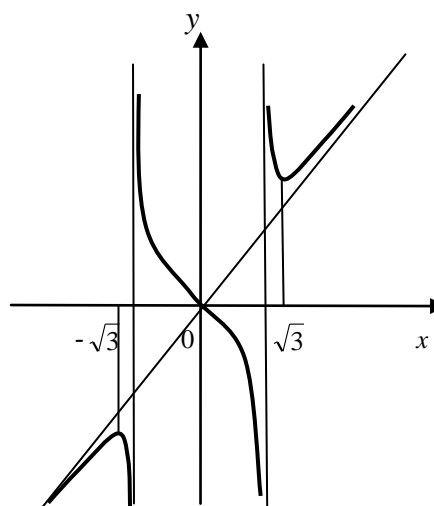
bo'lsa, u holda  $y=f(x)$  egri chiziq  $(a;b)$  oraliqda har doim qavariq (botiq) dir.

Egri chiziqning burilish nuqtasining chap va o'ng tomonida  $u''$  hosilaning ishoralari har xil bo'lganligi bois, bu nuqtada  $y''=0$  yoki  $y''=\infty$  dir.

**5-teorema (burilish nuqtasi mavjudligining yetarli sharti).** Agar  $x=x_0$  nuqtada  $f'(x_0)=0$  yoki  $f'(x_0)$  mavjud bo'lmasa, hamda  $f'(x)$  hosila  $x=x_0$  nuqtadan o'tganda ishorasini o'zgartiradigan bo'lsa, u holda absissasi  $x=x_0$  bo'lgan nuqta  $y=f(x)$  egri chiziqning burilish nuqtasidir.



5.4- rasm



5.5-rasm.

**7-Misol .**  $y = \frac{x^3}{x^2 - 1}$  egri chiziqning asimptotalari topilsin.

**Yechish:**  $\lim_{x \rightarrow \pm 1} \frac{x^3}{x^2 - 1} = \pm \infty$  bo'lganligidan, egri chiziq ikkita  $x = \pm 1$  vertikal

asimptotalarga ega. Og'ma asimptotalarni qidiramiz.

$$k = \lim_{x \rightarrow \pm \infty} \frac{y}{x} = \lim_{x \rightarrow \pm \infty} \frac{x^2}{x^2 - 1} = 1 \quad b = \lim_{x \rightarrow \pm \infty} (f(x) - kx) = \lim_{x \rightarrow \pm \infty} \left( \frac{x^3}{x^2 - 1} - x \right) = \lim_{x \rightarrow \pm \infty} \frac{x}{x^2 - 1} = 0$$

Demak, qaralayotgan egri chiziqning bitta  $u=x$  og'ma asimptotasi mavjud ekan.(6.5-rasm).

## 5.7. FUNKSIYANI TO‘LA TEKSHIRISH VA UNING GRAFIGINI

### YASASH SXEMASI

Funksiyani to‘la tekshirish va uning grafigini yasash uchun quyidagi sxemani tavsiya etish mumkin:

- 1) funksiyaning aniqlanish sohasini ko‘rsatish;
- 2) funksiyaning uzilish nuqtalari, uning grafigining koordinata o‘qlari bilan kesishish nuqtalari hamda vertikal asimptotalari (agar ular mavjud bo‘lsalar)ni aniqlash;
- 3) funksiyaning juft yoki toqligi, davriyligini aniqlash;
- 4) funksiyaning monotonlikka va ekstremumga tekshirish;
- 5) qavariqlik, botiqlik oraliqlari hamda burilish nuqtalarini aniqlash;
- 6) funksiya grafigining asimptotalarini topish;
- 7) boshqa kerakli qo‘shimcha hisoblashlarni bajarish;
- 8) funksiyaning grafigini yasash.

**Misol**  $y = \sqrt[3]{(x+3)x^2}$  funksiyaning to‘la tekshirib uning grafigini yasalsin.

**Yechish:** 1. Funksiya barcha  $x \in \mathbb{R}$  lar uchun aniqlangan.

2. Funksiyaning uzilish nuqtalari mavjud emas, grafik  $Ox$  o‘qini  $x=-3$  va  $x=0$  nuqtalarda kesib, koordinata boshidan o‘tadi.

3. Funksiya juft ham, toq ham, davriy ham emas.

4. Hosilani hisoblaymiz:  $f'(x) = \frac{x+2}{\sqrt[3]{x(x+3)^2}}$ .

Hosila,  $x_1=-2$  da 0 ga teng va  $x_2=-3$  bilan  $x_3=0$  nuqtalarda mavjud emas. Ushbu nuqtalar, funksiyaning aniqlanish sohasini  $(-\infty;-3)$ ,  $(-3;-2)$ ,  $(-2;0)$  va  $(0;+\infty)$  kabi oraliqlarga ajratadi. Ulardan,  $(-\infty;-3)$ ,  $(-3;-2)$  va  $(0;+\infty)$  oraliqlarda  $f'(x) > 0$  bo‘lib,  $(-2;0)$  oraliqda esa,  $f'(x) < 0$  dir. Bundan ko‘rinmoqdaki, funksiya  $(-\infty;-2)$  va  $(0;+\infty)$  oraliqlarda o‘svuvchi bo‘lib, (-

2;0) oraliqda esa, kamayuvchidir. Shuningdek  $x_1=-2$  maksimum nuqtasi bo‘lib,  $y_{\max} = \sqrt[3]{4}$  hamda  $x_3=0$  esa, minimum nuqtasidir va  $y_{\min}=y(0)=0$ ;  $x_2=-3$  nuqtada funksiya ekstremumga ega emas.

5. Ikkinchi tartibli hosilani topamiz: 
$$f''(x) = -\frac{2}{\sqrt[3]{x^4(x+3)^5}}$$

bu hosila argument  $x$  ning hech bir chekli qiymatida 0 ga teng bo‘la olmaydi. Shu sababli, ikkinchi tartibli hosila mavjud bo‘lmaydigan nuqtalargina ya’ni,  $x_2=-3$  bilan  $x_3=0$  nuqtalargina egri chiziq burilish nuqtalarining absissalari bo‘lishi mumkin. Ushbu nuqtalar orqali, funksiyaning aniqlanish sohasini  $(-\infty;-3)$ ,  $(-3;0)$  va  $(0;+\infty)$  kabi bo‘laklarga ajratib, ularning har birida  $f(x)$  ning ishoralarini aniqlaymiz:  $(-\infty;-3)$  oraliqda  $f''(x)>0$  bo‘lganligi uchun u oraliqda egri chiziq botiq bo‘lib,  $(-3;0)$  bilan  $(0;+\infty)$  oraliqlarda  $f''(x)<0$  bo‘lganligidan, egri chiziq u oraliqlarda qavariqdir.  $x_2=-3$  nuqtaning atrofida  $f''(x)$  ning ishoralari turli xil bo‘lganligi uchun  $M(-3;0)$  nuqta, egri chiziqning burilish nuqtasidir. Ammo,  $x_3=0$  nuqta atrofida  $f''(x)$  ning ishorasi bir xil bo‘lganligi sababli, u burilish nuqtasi bo‘la olmaydi.

6. Qaralayotgan funksiya cheksiz uzilish nuqtalariga ega bo‘lmaganligi bois, vertikal asimptotalari yo‘q. Og‘ma asimptotalar mavjudligini tekshiramiz:

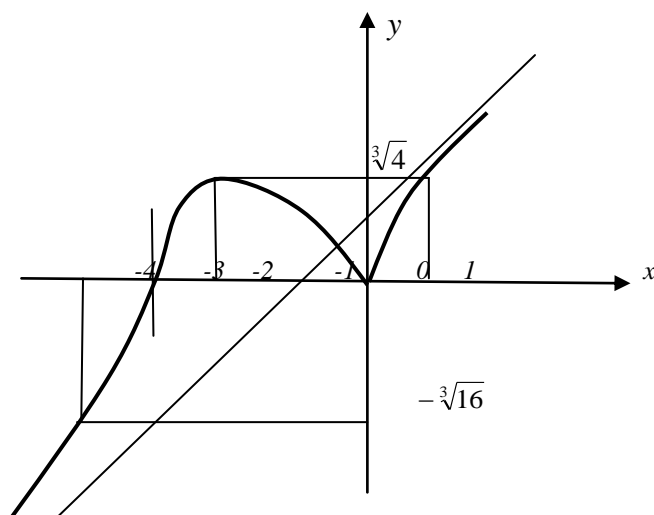
$$k = \lim_{x \rightarrow \pm\infty} \frac{y}{x} = \lim_{x \rightarrow \pm\infty} \frac{\sqrt[3]{(x+3)x^2}}{x} = \lim_{x \rightarrow \pm\infty} \sqrt[3]{1 + \frac{3}{x}} = 1,$$

$$\begin{aligned}
b &= \lim_{x \rightarrow \pm\infty} (y - kx) = \lim_{x \rightarrow \pm\infty} \left( \sqrt[3]{(x+3)x^2} - x \right) = \lim_{x \rightarrow \pm\infty} \frac{\left( \sqrt[3]{(x+3)x^2} - x \right) \left( \sqrt[3]{(x+3)^2 x^4} + x \sqrt[3]{(x+3)x^2 + x^2} \right)}{\left( \sqrt[3]{(x+3)^2 x^4} + x \sqrt[3]{(x+3)x^2 + x^2} \right)} = \\
&= \lim_{x \rightarrow \pm\infty} \frac{(x+3)x^2 - x^3}{\left( \sqrt[3]{(x+3)^2 x^4} + x \sqrt[3]{(x+3)x^2 + x^2} \right)} = \lim_{x \rightarrow \pm\infty} \frac{3x^2}{\left( \sqrt[3]{(x+3)^2 x^4} + x \sqrt[3]{(x+3)x^2 + x^2} \right)} = \\
&= \lim_{x \rightarrow \pm\infty} \frac{3}{\left( \sqrt[3]{\left(1 + \frac{3}{x}\right)^2} + \sqrt[3]{\left(1 + \frac{3}{x}\right) + 1} \right)} = 1,
\end{aligned}$$

Demak,  $y=x+1$  to'g'ri chiziq og'ma asimptota bo'lar ekan.

7. Funksiyaning grafigini chizishdan avval, grafik  $Ox$  o'qini  $x_2=-3$  va  $x_3=0$  nuqtalarda qanday  $\alpha$  burchak ostida kesib o'tishligini aniqlash maqsadga muvofiqdir. Bu nuqtalarda  $u'=tg\alpha=\infty$  ligi uchun  $\alpha = \frac{\pi}{2}$  ga teng bo'ladi. Agar  $x_3=0$  nuqta funksiyaning minimum nuqtasi bo'lganligi sababli, funksiyaning grafigi bu nuqta atrofida  $Ox$  o'qidan yuqorida joylashgan bo'ladi, hamda  $x_3=0$  nuqta funksiya grafigining "qaytishi" nuqtasidir.

8. Tekshirishlar natijasiga ko'ra, qaralayotgan funksiyaning grafigini yasaymiz. (5.6-rasm).



5.6-rasm.

**DIFFERENSIAL HISOB BO‘LIMIGA TOPSHIRIQ VARIANTLARI**  
**BERILGAN FUNKSIYALARNI DIFFERENSIYALLANG**

**1– TOPSHIRIQ**

1.  $y = 2x^5 - \frac{4}{x^3} + \frac{1}{x} + 3\sqrt{x}$ .

2.  $y = \frac{3}{x} + \sqrt[5]{x^2} - 4x^3 + \frac{2}{x^4}$ .

3.  $y = 3x^4 + \sqrt[3]{x^5} - \frac{2}{x} - \frac{4}{x^2}$ .

4.  $y = 7\sqrt{x} - \frac{2}{x^5} - 3x^3 + \frac{4}{x}$ .

5.  $y = 7x + \frac{5}{x^2} - \sqrt[7]{x^4} + \frac{6}{x}$ .

6.  $y = 5x^2 - \sqrt[3]{x^4} + \frac{4}{x^3} - \frac{5}{x}$ .

7.  $y = 3x^5 - \frac{3}{x} - \sqrt{x^3} + \frac{10}{x^5}$ .

8.  $y = \sqrt[3]{x^7} + \frac{3}{x} - 4x^6 + \frac{4}{x^5}$ .

9.  $y = 8x^2 + \sqrt[3]{x^4} - \frac{4}{x} - \frac{2}{x^3}$ .

10.  $y = 4x^6 + \frac{5}{x} - \sqrt[3]{x^7} - \frac{7}{x^4}$ .

11.  $y = 2\sqrt{x^3} - \frac{7}{x} + 3x^2 - \frac{2}{x^5}$ .

12.  $y = 4x^3 - \frac{3}{x} - \sqrt[5]{x^2} + \frac{6}{x^2}$ .

13.  $y = 5x^3 - \frac{8}{x^2} + 4\sqrt{x} + \frac{1}{x}$ .

14.  $y = \frac{9}{x^3} + \sqrt[3]{x^4} - \frac{2}{x} + 5x^4$ .

15.  $y = \frac{4}{x^5} - \frac{9}{x} + \sqrt[5]{x^2} - 7x^3$ .

16.  $y = \frac{8}{x^3} + \frac{3}{x} - 4\sqrt{x^3} + 2x^7$ .

17.  $y = 5x^2 - \frac{4}{x} - \sqrt[3]{x^7} - 2x^6$ .

18.  $y = 10x^2 + 3\sqrt{x^5} - \frac{4}{x} - \frac{5}{x^4}$ .

19.  $y = \sqrt{x^5} - \frac{3}{x} + \frac{4}{x^3} - 3x^2$ .

20.  $y = 9x^3 + \frac{5}{x} - \frac{7}{x^4} + \sqrt[3]{x^7}$ .

21.  $y = 3\sqrt{x} + \frac{4}{x^5} + \sqrt[3]{x^2} - \frac{7}{x}$ .

22.  $y = \sqrt{x^3} + \frac{2}{x} - \frac{4}{x^5} - 5x^3$ .

23.  $y = 7x^2 + \frac{3}{x} - \sqrt[5]{x^4} + \frac{8}{x^3}$ .

24.  $y = 8x^3 - \frac{4}{x} - \frac{7}{x^4} + \sqrt[7]{x^2}$ .

25.  $y = 8x - \frac{5}{x^4} + \frac{1}{x} - \sqrt[5]{x^4}$ .

26.  $y = \sqrt[4]{x^3} - \frac{5}{x} + \frac{4}{x^5} + 3x$ .

27.  $y = 4x^3 + \frac{3}{x} - \sqrt[3]{x^5} - \frac{2}{x^4}$ .

28.  $y = 4x^5 - \frac{5}{x} - \sqrt{x^3} + \frac{2}{x^3}$ .

29.  $y = \frac{7}{x} + \frac{4}{x^3} - \sqrt[5]{x^3} - 2x^6$ .

30.  $y = \frac{6}{x^4} - \frac{3}{x} + 3x^3 - \sqrt{x^7}$ .

## 2– TOPSHIRIQ

$$1. y = \sqrt[3]{3x^4 + 2x - 5} + \frac{4}{(x-2)^5}.$$

$$2. y = \sqrt[3]{(x-3)^4} - \frac{3}{2x^3 - 3x + 1}.$$

$$3. y = \sqrt{(x-4)^5} + \frac{5}{(2x^2 + 4x - 1)^2}.$$

$$4. y = \sqrt[5]{7x^2 - 3x + 5} - \frac{5}{(x-1)^3}.$$

$$5. y = \sqrt[4]{3x^2 - x + 5} - \frac{34}{(x-5)^4}.$$

$$6. y = \sqrt{3x^4 - 2x^3 + x} - \frac{4}{(x+2)^3}.$$

$$7. y = \sqrt[3]{(x-7)^5} + \frac{5}{4x^2 + 3x - 5}.$$

$$8. y = \sqrt[5]{(x+4)^6} - \frac{2}{2x^2 - 3x + 7}.$$

$$9. y = \frac{3}{(x-4)^7} - \sqrt{5x^2 - 4x + 3}.$$

$$10. y = \sqrt[3]{4x^2 - 3x - 4} - \frac{2}{(x-3)^5}.$$

$$11. y = \frac{7}{(x-1)^3} + \sqrt{8x - 3 + x^2}.$$

$$12. y = \sqrt[3]{4x^2 - 3x - 4} - \frac{2}{(x-3)^5}.$$

$$13. y = \sqrt[3]{5x^4 - 2x - 1} + \frac{8}{(x-5)^2}.$$

$$14. y = \frac{3}{(x+2)^5} - \sqrt[7]{5x - 7x^2 - 3}.$$

$$15. y = \sqrt[4]{(x-1)^5} - \frac{4}{7x^2 - 3x + 2}.$$

$$16. y = \sqrt[5]{(x-2)^6} - \frac{3}{7x^3 - x^2 - 4}.$$

$$17. y = \frac{3}{(x+4)^2} - \sqrt[3]{4 + 3x - x^4}.$$

$$18. y = \frac{2}{(x-1)^3} - \frac{8}{6x^2 + 3x - 7}.$$

$$19. y = \sqrt{1 + 5x - 2x^2} + \frac{3}{(x-3)^4}.$$

$$20. y = \sqrt[3]{5 + 4x - x^2} - \frac{5}{(x+1)^3}.$$

$$21. y = \sqrt[4]{5x^2 - 4x + 1} - \frac{7}{(x-5)^2}.$$

$$22. y = \sqrt[5]{3 - 7x + x^2} - \frac{4}{(x-7)^5}.$$

$$23. y = \sqrt{(x-3)^7} + \frac{9}{7x^2 - 5x - 8}.$$

$$24. y = \sqrt[3]{(x-8)^4} - \frac{2}{1 + 3x - 4x^2}.$$

$$25. y = \frac{3}{4x - 3x^2 + 1} - \sqrt{(x+1)^5}.$$

$$26. y = \frac{3}{x-4} + \sqrt[6]{(2x^2 - 3x + 1)^5}.$$

$$27. y = \frac{4}{(x-7)^3} - \sqrt[3]{(3x^2 - x + 1)^4}.$$

$$28. y = \sqrt{(x-4)^7} - \frac{10}{(3x^2 - 5x + 1)}.$$

$$29. y = \frac{7}{(x+2)^5} - \sqrt{8 - 5x + 2x^2}.$$

$$30. y = \sqrt[3]{(x-1)^5} + \frac{5}{2x^2 - 4x + 7}.$$

### 3– TOPSHIRIQ

1.  $y = \sin^3 2x \cdot \cos 8x^5$ .
2.  $y = \cos^5 3x \cdot \operatorname{tg}(4x+1)^3$ .
3.  $y = \operatorname{tg}^4 x \cdot \arcsin 4x^5$ .
4.  $y = \arcsin^3 2x \cdot \operatorname{ctg} 7x^4$ .
5.  $y = \operatorname{ctg} 3x \cdot \arccos 3x^2$ .
6.  $y = \arccos^2 4x \cdot \ln(x-3)$ .
7.  $y = \ln^5 x \cdot \operatorname{arctg} 7x^4$ .
8.  $y = \operatorname{arctg}^3 4x \cdot 3^{\sin x}$ .
9.  $y = 2^{\cos x} \cdot \operatorname{arctg} 5x^3$ .
10.  $y = 4^{-x} \cdot \ln^5(x+2)$ .
11.  $y = 3^{\operatorname{tg} x} \cdot \arcsin 7x^4$ .
12.  $y = 5^{x^2} \cdot \arccos 2x^5$ .
13.  $y = \sin^4 3x \cdot \operatorname{arctg} 2x^3$ .
14.  $y = \cos^3 4x \cdot \operatorname{arctg} \sqrt{x}$ .
15.  $y = \operatorname{tg}^3 2x \cdot \arcsin x^5$ .
16.  $y = \operatorname{ctg}^7 x \cdot \arccos 2x^3$ .
17.  $y = e^{-\sin x} \operatorname{tg} 7x^6$ .
18.  $y = e^{\cos x} \operatorname{ctg} 8x^3$ .
19.  $y = \cos^5 x \cdot \arccos 4x$ .
20.  $y = \sin^3 7x \cdot \operatorname{arctg} 5x^2$ .
21.  $y = \sin^2 3x \cdot \operatorname{arctg} 3x^5$ .
22.  $y = \cos^5 \sqrt{x} \cdot \operatorname{arctg} x^4$ .
23.  $y = \operatorname{tg}^6 2x \cdot \cos 7x^2$ .
24.  $y = \operatorname{ctg}^3 4x \cdot \arcsin \sqrt{x}$ .

25.  $y = \operatorname{ctg} \frac{1}{x} \cdot \arccos x^4$ .
26.  $y = \operatorname{tg} \sqrt{x} \cdot \operatorname{arctg} 3x^5$ .
27.  $y = \operatorname{tg}^3 2x \cdot \arccos 2x^3$ .
28.  $y = 2^{\operatorname{tg} x} \operatorname{arctg}^5 3x$ .
29.  $y = \sin^5 3x \cdot \operatorname{arctg} \sqrt{x}$ .
30.  $y = \cos^4 3x \cdot \arcsin 3x^2$ .

### 4– TOPSHIRIQ

1.  $y = \operatorname{arctg}^2 5x \cdot \ln(x-4)$ .
2.  $y = \operatorname{arctg}^3 2x \cdot \ln(x+5)$ .
3.  $y = \arccos^4 x \cdot \ln(x^2 + x - 1)$ .
4.  $y = \sqrt{\arccos 2x} \cdot 3^{-x}$ .
5.  $y = \operatorname{tg}^4 3x \cdot \operatorname{arctg} 7x^2$ .
6.  $y = 5^{-x^2} \arcsin 3x^3$ .
7.  $y = \operatorname{arctg}^5 x \cdot \log_2(x-3)$ .
8.  $y = \log_3(x+5) \cdot \arccos 3x$ .
9.  $y = e^{-x} \cdot \arcsin^2 5x$ .
10.  $y = \log_4(x-1) \cdot \arcsin^4 x$ .
11.  $y = (x-4)^5 \cdot \operatorname{arctg} 3x^2$ .
12.  $y = \operatorname{ctg}^3 4x \cdot \operatorname{arctg} 2x^3$ .
13.  $y = e^{-\cos x} \cdot \operatorname{arctg} 7x^5$ .
14.  $y = (x+1) \arccos 3x^4$ .
15.  $y = 2^{\sin x} \operatorname{arctg} x^4$ .
16.  $y = 3^{-x^3} \operatorname{arctg} 2x^5$ .
17.  $y = 3^{\cos x} \arcsin^2 3x$ .

18.  $y = \ln(x-10) \cdot \operatorname{arccos}^2 4x.$
19.  $y = \lg(x-2) \cdot \arcsin^5 x.$
20.  $y = \log_3(x+1) \cdot \operatorname{arctg}^5 7x.$
21.  $y = \ln(x+9) \cdot \operatorname{arctg}^3 2x.$
22.  $y = \lg(x+2) \cdot \arcsin^2 3x.$
23.  $y = 4^{-\sin x} \operatorname{arctg} 3x.$
24.  $y = 2^{\cos x} \operatorname{arctg}^3 x.$
25.  $y = \lg(x-3) \cdot \arcsin^2 5x.$
26.  $y = \log_2(x+3) \cdot \arccos^2 x.$
27.  $y = 2^{-x} \operatorname{arctg}^3 4x.$
28.  $y = \ln(x-4) \cdot \operatorname{arctg}^4 3x.$
29.  $y = \lg(x+3) \cdot \operatorname{arctg}^2 5x.$
30.  $y = \log_5(x+1) \cdot \operatorname{arctg}^2 x^3.$

### 5– TOPSHIRIQ

1.  $y = \operatorname{tg}^4 3x \cdot \arcsin 2x^3.$
2.  $y = (x-2)^4 \arcsin 5x^4.$
3.  $y = 2^{-x^3} \operatorname{arctg} 7x^4.$
4.  $y = (x+6)^5 \operatorname{arctg} 3x^5.$
5.  $y = 3^{\cos x} \ln(x^2 - 3x + 7).$
6.  $y = \log_2(x-7) \cdot \operatorname{arctg} \sqrt{x}.$
7.  $y = \arccos^3 5x \cdot \operatorname{tg} x^4.$
8.  $y = (x-5)^7 \operatorname{arctg} 7x^3.$
9.  $y = \arccos x^2 \cdot \operatorname{ctg} 7x^3.$
10.  $y = 5^{-x^2} \arccos 5x^4.$
11.  $y = \operatorname{arctg}^4 x \cdot \cos 7x^4.$

12.  $y = 4(x-7)^6 \arcsin 3x^5.$
13.  $y = (x+5)^4 \arccos^3 5x.$
14.  $y = 2^{-\sin x} \arcsin^3 2x.$
15.  $y = (x+2)^7 \arccos \sqrt{x}.$
16.  $y = (x-7)^5 \arcsin 7x^4.$
17.  $y = \ln(x-3) \cdot \arccos 3x^4.$
18.  $y = \log_2(x-4) \cdot \operatorname{arctg}^3 4x.$
19.  $y = (x-4)^4 \operatorname{arctg}^2 7x.$
20.  $y = \sqrt[3]{x-3} \arccos^4 2x.$
21.  $y = \sqrt[3]{x-4} \arcsin^4 5x.$
22.  $y = (x-3)^5 \arccos 3x^6.$
23.  $y = \sqrt{(x+3)^5} \arcsin 2x^3.$
24.  $y = \sqrt[3]{(x+1)^2} \arccos 3x.$
25.  $y = \operatorname{tg}^3 x \cdot \operatorname{arctg} 3x.$
26.  $y = \sqrt{(x-2)^3} \operatorname{arctg} (7x-1).$
27.  $y = \sqrt[5]{(x+4)^2} \arcsin 7x^2.$
28.  $y = \arcsin^3 4x \cdot \operatorname{ctg} 3x.$
29.  $y = e^{-\cos x} \arcsin 2x.$
30.  $y = \sqrt{(x+5)^3} \arccos^4 x.$



## 6– TOPSHIRIQ

1.  $y = (x - 3)^4 \arccos 5x^3$ .

2.  $y = (3x - 4)^4 \arccos 3x^2$ .

3.  $y = sh^3 4x \cdot \arccos \sqrt{x}$ .

4.  $y = th^2 \sqrt{x} \cdot \text{arctg} 3x^2$ .

5.  $y = cth^3 5x \cdot \arcsin 3x^2$ .

6.  $y = ch \frac{1}{x} \cdot \text{arctg}(7x + 2)$ .

7.  $y = ch^3 4x \cdot \arccos 4x^2$ .

8.  $y = sh^3 3x \cdot \text{arctg} 5x^2$ .

9.  $y = th^5 3x \cdot \arcsin \sqrt{x}$ .

10.  $y = cth^2 (x + 1) \cdot \arccos \frac{1}{x}$ .

11.  $y = sh^4 2x \cdot \arccos x^2$ .

12.  $y = ch^3 (3x + 2) \cdot \text{arctg} 3x$ .

13.  $y = th^3 4x \cdot \text{arctg} 3x^4$ .

14.  $y = cth^4 7x \cdot \arcsin \sqrt{x}$ .

15.  $y = sh^3 2x \cdot \arcsin 7x^2$ .

16.  $y = th^5 4x \cdot \arccos 3x^4$ .

17.  $y = ch^2 5x \cdot \text{arctg} \sqrt{x}$ .

18.  $y = cth^4 2x \cdot \text{arctg} x^3$ .

19.  $y = sh^4 5x \cdot \arccos 3x^2$ .

20.  $y = ch^3 9x \cdot \text{arctg}(5x - 1)$ .

21.  $y = th^4 x \cdot \text{arctg} \frac{1}{x}$ .

22.  $y = cth^3 4x \cdot \arcsin(3x + 1)$ .

23.  $y = ch^2 5x \cdot \text{arctg} x^4$ .

24.  $y = th^4 7x \cdot \arccos x^3$ .

25.  $y = cth 4x^5 \cdot \arccos 2x$ .

26.  $y = cth 3x \cdot \arcsin^4 2x$ .

27.  $y = th^5 3x \cdot \text{arctg} \sqrt{x}$ .

28.  $y = sh^4 3x \cdot \arccos 5x^4$ .

29.  $y = cth^2 4x \cdot \arcsin x^3$ .

30.  $y = th^3 5x \cdot \text{arctg}(2x - 5)$ .

## 7– TOPSHIRIQ

1.  $y = \frac{e^{\arccos^3 x}}{\sqrt{x+5}}$ .

2.  $y = \frac{(x-4)^2}{e^{\text{arctg} x}}$ .

3.  $y = \frac{e^{-x^3}}{\sqrt{x^2+5x-1}}$ .

4.  $y = \frac{e^{-\text{ctg} 5x}}{(3x^2-4x+2)}$ .

5.  $y = \frac{\sqrt{7x^3-5x+2}}{e^{\cos x}}$ .

6.  $y = \frac{e^{\text{tg} 3x}}{\sqrt{3x^2-x+4}}$ .

7.  $y = \frac{e^{\sin x}}{(x-5)^7}$ .

8.  $y = \frac{\sqrt[3]{2x^2-3x+1}}{e^{-x}}$ .

9.  $y = \frac{\sqrt{x^3+4x-5}}{e^{x^3}}$ .

10.  $y = \frac{e^{\text{ctg} 5x}}{(x+4)^3}$ .

$$11. y = \frac{\sqrt{3+2x-x^2}}{e^x}.$$

$$12. y = \frac{e^{3x}}{\sqrt{3x^2-4x-7}}.$$

$$13. y = \frac{e^{-\sin 2x}}{(x+5)^4}.$$

$$14. y = \frac{e^{\cos 5x}}{\sqrt{x^2-5x-2}}.$$

$$15. y = \frac{(2x+5)^3}{e^{tgx}}.$$

$$16. y = \frac{e^{-tg 3x}}{4x^2-3x+5}.$$

$$17. y = \frac{e^{-\sin 4x}}{(2x-5)^6}.$$

$$18. y = \frac{3x^2-5x+10}{e^{-x^4}}.$$

$$19. y = \frac{e^{-x}}{(2x^2-x+4)^2}.$$

$$20. y = \frac{e^{4x}}{(3x+5)^3}.$$

$$21. y = \frac{e^{ctg 5x}}{(3x-5)^4}.$$

$$22. y = \frac{(2x-3)^7}{e^{-2x}}.$$

$$23. y = \frac{(3x+1)^4}{e^{4x}}.$$

$$24. y = \frac{5x^2+4x-2}{e^{-x}}.$$

$$25. y = \frac{\sqrt{5x^2-x+1}}{e^{3x}}.$$

$$26. y = \frac{e^{-x^2}}{(2x-5)^7}.$$

$$27. y = \frac{e^{\cos 3x}}{(2x+4)^5}.$$

$$28. y = \frac{e^{\sin 5x}}{(3x-2)^2}.$$

$$29. y = \frac{\sqrt{x^2-3x-7}}{e^{-x^3}}.$$

$$30. y = \frac{e^{-tgx}}{4x^2+7x-5}.$$

## 8–TOPSHIRIQ

$$1. y = \frac{\log_5(3x-7)}{ctg 7x^3}.$$

$$2. y = \frac{\ln(5x-3)}{4tg 3x^4}.$$

$$3. y = \frac{\ln(7x+2)}{5 \cos 42x}.$$

$$4. y = \frac{\sin^3 5x}{\ln(2x-3)}.$$

$$5. y = \frac{\cos^2 3x}{\lg(3x-4)}.$$

$$6. y = \frac{tg^3 2x}{\lg(5x+1)}.$$

$$7. y = \frac{\log_3(4x+5)}{2ctg \sqrt{x}}.$$

$$8. y = \frac{\ln(7x-3)}{3tg^2 4x}.$$

$$9. y = \frac{\lg(11x+3)}{\cos^2 5x}.$$

$$10. y = \frac{ctg^2 5x}{\ln(7x-2)}.$$

$$11. y = \frac{tg^2(x-2)}{\lg(x+3)}.$$

$$12. y = \frac{\sin^3(5x+1)}{\lg(3x-2)}.$$

$$13. y = \frac{\cos^4(7x-1)}{\lg(x+5)}.$$

$$14. y = \frac{\sin^3(4x+3)}{\ln(7x+1)}.$$

$$15. y = \frac{ctg^3(2x-3)}{\log_3(x+2)}.$$

$$16. y = \frac{\lg^3 x}{\sin 5x^2}.$$

$$17. y = \frac{\ln^2(x+1)}{\cos 3x^4}.$$

$$18. y = \frac{\log_2(7x-5)}{tg \sqrt{x}}.$$

$$19. y = \frac{\log_3(4x-2)}{ctg 2x}.$$

$$20. y = \frac{\ln^3(x-5)}{tg\left(\frac{1}{x}\right)}.$$

$$21. y = \frac{\lg(x+2)}{\sin 2x^5}.$$

$$22. y = \frac{tg^3 7x}{\ln(3x+2)}.$$

$$23. y = \frac{ctg \sqrt{x-2}}{\lg(3x+5)}.$$

$$24. y = \frac{tg(3x-5)}{\ln^2(x+3)}.$$

$$25. y = \frac{\cos^2 x}{\lg(x^2-2x+1)}.$$

$$26. y = \frac{\log_2(3x+7)}{tg 3x}.$$

$$27. y = \frac{\ln^3 x}{ctg(x-3)}.$$

$$28. y = \frac{tg^4 5x}{\ln(x+7)}.$$

$$29. y = \frac{\log_3(x+4)}{\cos^5 x}.$$

$$30. y = \frac{tg^4 3x}{\lg(x^2-x+4)}.$$

## 9– TOPSHIRIQ

$$1. y = \frac{arcctg^4 5x}{sh\sqrt{x}}.$$

$$2. y = \frac{arctg^3 2x}{ch\left(\frac{1}{x}\right)}.$$

$$3. y = \frac{ar \cos 3x^4}{th^2 x}.$$

$$4. y = \frac{\arcsin 5x^3}{ch\sqrt{x}}.$$

$$5. y = \frac{cth^3(x+1)}{\arccos 2x}.$$

$$6. y = \frac{th 3x^5}{arctg^2 3x}.$$

$$7. y = \frac{\arccos^7 2x}{thx^5}.$$

$$8. y = \frac{\arcsin^3 4x}{sh(3x+1)}.$$

$$9. y = \frac{th^4(2x+5)}{\arccos 3x}.$$

$$10. y = \frac{\sqrt[3]{arctg 2x}}{sh^2 x}.$$

$$11. y = \frac{\arcsin^2 4x}{th(5x-3)}.$$

$$12. y = \frac{ch^2(4x+2)}{arctgx^3}.$$

$$13. y = \frac{\arcsin 4x^5}{th^3 x}.$$

$$14. \quad y = \frac{\operatorname{arctg}^3(2x+1)}{\operatorname{ch}\sqrt{x}}.$$

$$15. \quad y = \frac{\arccos 4x^3}{\operatorname{sh}^4 x}.$$

$$16. \quad y = \frac{\operatorname{cth}^2(x-2)}{\arccos 3x}.$$

$$17. \quad y = \frac{\operatorname{th}^3(2x+2)}{\arcsin 5x}.$$

$$18. \quad y = \frac{\operatorname{cth}^2(3x-1)}{\arccos x^2}.$$

$$19. \quad y = \frac{\operatorname{sh}^5 x}{\arccos 4x}.$$

$$20. \quad y = \frac{\sqrt{\operatorname{ch}^3 x}}{\operatorname{arctg} 5x}.$$

$$21. \quad y = \frac{\operatorname{th}^2(x+3)}{\operatorname{arcctg} \sqrt{x}}.$$

$$22. \quad y = \frac{\arcsin^2 3x}{\operatorname{ch}(x-5)}.$$

$$23. \quad y = \frac{\operatorname{arcctg}^3 x}{\operatorname{sh}(2x-5)}.$$

$$24. \quad y = \frac{\arccos^3 5x}{\operatorname{th}(x-2)}.$$

$$25. \quad y = \frac{\sqrt{\arccos 3x}}{\operatorname{sh}^2 x}.$$

$$26. \quad y = \frac{\arcsin^2 3x}{\sqrt{\operatorname{th} x}}.$$

$$27. \quad y = \frac{\operatorname{arctg}^2 5x}{\sqrt[3]{\operatorname{cth} x}}.$$

$$28. \quad y = \frac{\operatorname{arctg}^2 5x}{\operatorname{th}(x+3)}.$$

$$29. \quad y = \frac{\sqrt{\operatorname{sh}^3 x}}{\operatorname{arctg} 5x}.$$

$$30. \quad y = \frac{\sqrt[5]{\operatorname{ch} 3x}}{\operatorname{arctg}(x+2)}.$$

### 10–TOPSHIRIQ

$$1. \quad y = \frac{9\operatorname{arctg}(x+7)}{(x-1)^2}.$$

$$2. \quad y = \frac{8\operatorname{arctg}(2x+3)}{(x+1)^3}.$$

$$3. \quad y = \frac{7\arccos(4x-1)}{(x+2)^4}.$$

$$4. \quad y = \frac{6\arcsin(x+5)}{(x-2)^5}.$$

$$5. \quad y = \frac{3\operatorname{arcctg}(2x-5)}{(x+1)^4}.$$

$$6. \quad y = \frac{2\operatorname{arctg}(3x+2)}{(x-3)^2}.$$

$$7. \quad y = \frac{4\arccos 3x}{(x+2)^5}.$$

$$8. \quad y = \frac{\arcsin(3x+8)}{(x-7)^3}.$$

$$9. \quad y = \frac{7\operatorname{arctg}(4x+1)}{(x-4)^2}.$$

$$10. \quad y = \frac{3\arcsin(2x-7)}{(x+2)^4}.$$

$$11. \quad y = \frac{2\lg(4x+5)}{(x+6)^4}.$$

$$12. \quad y = \frac{5\ln(5x+7)}{(x-7)^2}.$$

$$13. \quad y = \frac{4\log_3(3x+1)}{(x+1)^2}.$$

$$14. \quad y = \frac{7\log_4(2x-5)}{(x-1)^5}.$$

$$15. \quad y = \frac{\ln(7x+2)}{(x-6)^4}.$$

$$16. \quad y = \frac{4 \lg(3x+7)}{(x+1)^7}.$$

$$17. \quad y = \frac{5 \log_2(x^2+1)}{(x-3)^4}.$$

$$18. \quad y = \frac{6 \log_3(2x+9)}{(x+4)^2}.$$

$$19. \quad y = \frac{3 \log_2(5x-4)}{(x-3)^5}.$$

$$20. \quad y = \frac{7 \log_5(x^2+x)}{(x+3)^3}.$$

$$21. \quad y = \frac{\log_7(2x^2+5)}{(x-4)^2}.$$

$$22. \quad y = \frac{2 \ln(3x-10)}{(x+5)^7}.$$

$$23. \quad y = \frac{8 \lg(4x+5)}{(x-1)^5}.$$

$$24. \quad y = \frac{2 \log_3(4x-7)}{(x+3)^4}.$$

$$25. \quad y = \frac{3 \log_4(2x+9)}{(x-7)^2}.$$

$$26. \quad y = \frac{\lg(x^2+2x)}{(x+8)^4}.$$

$$27. \quad y = \frac{3 \ln(x^2+5)}{(x-7)^3}.$$

$$28. \quad y = \frac{4 \log_2(3x-5)}{(x-2)^2}.$$

$$29. \quad y = \frac{2 \ln(2x^2+3)}{(x-7)^4}.$$

$$30. \quad y = \frac{4 \lg(3x+7)}{(x-5)^3}.$$

$$1. \quad y = \sqrt{\frac{2x+1}{2x-1}} \log_2(x-3x^2).$$

$$2. \quad y = \sqrt[3]{\frac{2x-5}{2x+3}} \lg(4x+7).$$

$$3. \quad y = \sqrt[4]{\frac{x+3}{x-3}} \ln(5x^2-2x+1).$$

$$4. \quad y = \sqrt[5]{\frac{x+1}{x-1}} \log_3(x^2+x+4).$$

$$5. \quad y = \sqrt[6]{\frac{7x-4}{7x+4}} \log_5(3x^2+2x).$$

$$6. \quad y = \sqrt[7]{\frac{2x-3}{2x+1}} \lg(7x-10).$$

$$7. \quad y = \sqrt[8]{\frac{5x+1}{5x-1}} \ln(3x-x^2).$$

$$8. \quad y = \sqrt[9]{\frac{x+3}{x-3}} \log_5(2x-3).$$

$$9. \quad y = \sqrt{\frac{6x+5}{6x-5}} \lg(4x+7).$$

$$10. \quad y = \sqrt[3]{\frac{4x-1}{4x+1}} \ln(2x^3-3).$$

$$11. \quad y = \sqrt[4]{\frac{x+6}{x-6}} \sin(3x^2+1).$$

$$12. \quad y = \sqrt[5]{\frac{x-7}{x+7}} \cos(2x^3+x).$$

$$13. \quad y = \sqrt[6]{\frac{x-9}{x+9}} \operatorname{tg}(3x^2-4x+1).$$

$$14. \quad y = \sqrt[7]{\frac{x-4}{x+4}} \operatorname{ctg}(2x+5).$$

$$15. \quad y = \sqrt[8]{\frac{x-2}{x+2}} \sin(4x^2-7x+2).$$

$$16. \quad y = \sqrt[9]{\frac{x-3}{x+3}} \cos(x^2-3x+2).$$

## 11–TOPSHIRIQ

$$17. \quad y = \sqrt{\frac{3x-2}{3x+2}} \operatorname{tg}(2x^2 - 9).$$

$$18. \quad y = \sqrt{\frac{2x+3}{2x-3}} \operatorname{ctg}(3x^2 + 5).$$

$$19. \quad y = \sqrt[4]{\frac{x+5}{x-5}} \sin(3x^2 - x + 4).$$

$$20. \quad y = \sqrt[5]{\frac{x-6}{x+6}} \cos(7x + 2).$$

$$21. \quad y = \sqrt[6]{\frac{x-7}{x+7}} \arcsin(2x + 3).$$

$$22. \quad y = \sqrt[7]{\frac{x-8}{x+8}} \arccos(3x - 5).$$

$$23. \quad y = \sqrt[8]{\frac{x-4}{x+4}} \operatorname{arctg}(5x + 1).$$

$$24. \quad y = \sqrt[9]{\frac{x-1}{x+1}} \operatorname{arctg}(7x + 2).$$

$$25. \quad y = \sqrt{\frac{7x-4}{7x+4}} \arcsin(x^2 + 1).$$

$$26. \quad y = \sqrt[3]{\frac{8x-3}{8x+3}} \arccos(x^2 - 5).$$

$$27. \quad y = \sqrt[4]{\frac{2x-5}{2x+5}} \operatorname{arctg}(3x + 2).$$

$$28. \quad y = \sqrt[5]{\frac{3x-4}{3x+4}} \operatorname{arctg}(2x + 5).$$

$$29. \quad y = \sqrt[6]{\frac{x^2-1}{x^2+1}} \arcsin 2x.$$

$$30. \quad y = \sqrt[7]{\frac{x^2+3}{x^2-3}} \arccos 4x.$$

$$2. \quad y = (\cos(x + 2))^{\ln x}.$$

$$3. \quad y = (\sin 3x)^{\arccos x}.$$

$$4. \quad y = (\operatorname{th} 5x)^{\arcsin(x+1)}.$$

$$5. \quad y = (\operatorname{sh}(x + 2))^{\arcsin 2x}.$$

$$6. \quad y = (\cos 5x)^{\operatorname{arctg} \sqrt{x}}.$$

$$7. \quad y = (\sqrt{3x+2})^{\operatorname{arctg} 3x}.$$

$$8. \quad y = (\ln(x + 3))^{\sin \sqrt{x}}.$$

$$9. \quad y = (\log_2(x + 4))^{\operatorname{ctg} 7x}.$$

$$10. \quad y = (\operatorname{sh} 3x)^{\operatorname{arctg}(x+2)}.$$

$$11. \quad y = (\operatorname{ch} 3x)^{\operatorname{ctg} \frac{1}{x}}.$$

$$12. \quad y = (\arcsin 5x)^{\operatorname{tg} \sqrt{x}}.$$

$$13. \quad y = (\arccos 5x)^{\ln x}.$$

$$14. \quad y = (\operatorname{arctg} 2x)^{\sin x}.$$

$$15. \quad y = (\ln(x + 7))^{\operatorname{ctg} 2x}.$$

$$16. \quad y = (\operatorname{ctg}(7x + 4))^{\sqrt{x+3}}.$$

$$17. \quad y = (\operatorname{th} \sqrt{x+1})^{\operatorname{arctg} 2x}.$$

$$18. \quad y = (\operatorname{cth} \frac{1}{x})^{\arcsin 7x}.$$

$$19. \quad y = (\cos(x + 5))^{\arcsin 3x}.$$

$$20. \quad y = (\sqrt{x+5})^{\arccos 3x}.$$

$$21. \quad y = (\sin 4x)^{\operatorname{arctg} \frac{1}{x}}.$$

$$22. \quad y = (\operatorname{tg} 3x^4)^{\sqrt{x+3}}.$$

$$23. \quad y = (\operatorname{ctg} 2x^3)^{\sin \sqrt{x}}.$$

$$24. \quad y = (\operatorname{tg} 7x^5)^{\sqrt{x+2}}.$$

$$25. \quad y = (\arccos x)^{\sqrt{\cos x}}.$$

## 12– TOPSHIRIQ

$$1. \quad y = (\operatorname{cth} 3x)^{\arcsin x}.$$

$$26. \quad y = (\operatorname{ctg} 7x)^{\operatorname{sh}(x+3)}.$$

$$27. \quad y = (\operatorname{sh} 5x)^{\operatorname{arctg}(x+2)}.$$

$$28. \quad y = (\operatorname{arctg} x)^{\operatorname{th}(3x+1)}.$$

$$29. \quad y = (\operatorname{cth} \sqrt{x})^{\sin(x+3)}.$$

$$30. \quad y = (\operatorname{sh} 3x)^{\operatorname{arctg} 2x}.$$

### 13– TOPSHIRIQ

$$1. \quad y = (\arccos(x+2))^{\operatorname{tg} 3x}.$$

$$2. \quad y = (\arcsin 2x)^{\operatorname{ctg}(x+1)}.$$

$$3. \quad y = (\operatorname{arctg}(x+7))^{\cos 2x}.$$

$$4. \quad y = (\operatorname{arctg}(x-3))^{\sin 4x}.$$

$$5. \quad y = (\operatorname{ctg}(3x-2))^{\arcsin 3x}.$$

$$6. \quad y = (\operatorname{tg}(4x-3))^{\arccos 2x}.$$

$$7. \quad y = (\cos(2x-5))^{\operatorname{arctg} 5x}.$$

$$8. \quad y = (\sin(7x+4))^{\operatorname{arctg} x}.$$

$$9. \quad y = (\arcsin 2x)^{\ln(x+3)}.$$

$$10. \quad y = (\arccos 3x)^{\lg(5x-1)}.$$

$$11. \quad y = (\operatorname{arctg} 5x)^{\log_2(x+4)}.$$

$$12. \quad y = (\operatorname{arctg} 7x)^{\lg(x+1)}.$$

$$13. \quad y = (\log_4(2x+3))^{\arcsin x}.$$

$$14. \quad y = (\log_5(3x+2))^{\arccos x}.$$

$$15. \quad y = (\lg(7x-5))^{\operatorname{arctg} 2x}.$$

$$16. \quad y = (\ln(5x-4))^{\operatorname{arctg} x}.$$

$$17. \quad y = (\log_2(6x+5))^{\arcsin 2x}.$$

$$18. \quad y = (\lg(4x-3))^{\arccos 4x}.$$

$$19. \quad y = (\ln(7x-3))^{\operatorname{arctg} 5x}.$$

$$20. \quad y = (\log_5(2x+5))^{\operatorname{arctg} x}.$$

$$21. \quad y = (\sin(8x-7))^{\operatorname{th}(x+3)}.$$

$$22. \quad y = (\cos(3x+8))^{\operatorname{th}(x-7)}.$$

$$23. \quad y = (\operatorname{tg}(9x+2))^{\operatorname{ch}(2x-1)}.$$

$$24. \quad y = (\operatorname{ctg}(7x+5))^{\operatorname{sh} 3x}.$$

$$25. \quad y = (\operatorname{sh}(3x-7))^{\cos(x+4)}.$$

$$26. \quad y = (\operatorname{ch}(2x-3))^{\operatorname{tg}(x+5)}.$$

$$27. \quad y = (\operatorname{th}(7x-5))^{\sin(x+2)}.$$

$$28. \quad y = (\operatorname{ch}(3x+2))^{\cos(x+4)}.$$

$$29. \quad y = (\ln(7x+4))^{\operatorname{tg} x}.$$

$$30. \quad y = (\lg(8x+3))^{\operatorname{tg} 5x}.$$

### 14– TOPSHIRIQ

$$1. \quad y = \frac{\sqrt{x+7}(x-3)^4}{(x+2)^5}.$$

$$2. \quad y = \frac{(x-3)^5(x+2)^3}{\sqrt{(x-1)^3}}.$$

$$3. \quad y = \frac{(x-2)^3 \sqrt{(x+1)^5}}{(x-4)^2}.$$

$$4. \quad y = \frac{(x+3) \sqrt[3]{(x-2)^2}}{(x+1)^7}.$$

$$5. \quad y = \frac{(x+2)^7(x-3)^3}{\sqrt{(x+1)^5}}.$$

$$6. \quad y = \frac{(x-1)^4(x+2)^5}{\sqrt[3]{(x-4)^2}}.$$

$$7. y = \frac{(x-3)^2 \sqrt{x+4}}{(x+2)^7}.$$

$$8. y = \frac{(x-7)^{10} \sqrt{3x-1}}{(x+3)^5}.$$

$$9. y = \frac{(x+1)^8 (x-3)^2}{\sqrt{(x+2)^5}}.$$

$$10. y = \frac{(x+2)(x-7)^4}{\sqrt[3]{(x-1)^4}}.$$

$$11. y = \frac{\sqrt[5]{(x+4)^3}}{(x-1)^2 (x+3)^5}.$$

$$12. y = \frac{\sqrt[3]{(x-1)^7}}{(x+1)^5 (x-5)^3}.$$

$$13. y = \frac{\sqrt{(x+2)^3 (x-1)^4}}{(x+2)^7}.$$

$$14. y = \frac{\sqrt[3]{(x-2)^5 (x+3)^2}}{(x-7)^3}.$$

$$15. y = \frac{\sqrt[4]{x-8} (x+2)^6}{(x-1)^5}.$$

$$16. y = \frac{\sqrt[5]{x+1} (x-3)^7}{(x+8)^3}.$$

$$17. y = \frac{\sqrt[7]{(x-2)^4}}{(x+1)^2 (x-6)^5}.$$

$$18. y = \frac{\sqrt[5]{(x+1)^2}}{(x-3)^4 (x-4)^3}.$$

$$19. y = \frac{\sqrt{x^2+2x-3}}{(x+3)^7 (x-4)^2}.$$

$$20. y = \frac{\sqrt[3]{(x-2)^4}}{(x-5)(x+1)^7}.$$

$$21. y = \frac{(x+4)^3 (x-2)^3}{\sqrt[5]{(x-2)^2}}.$$

$$22. y = \frac{(x-1)^6 (x+2)^3}{\sqrt[5]{(x+3)^2}}.$$

$$23. y = \frac{(x-1)^4 (x-7)^2}{\sqrt[3]{(x+2)^5}}.$$

$$24. y = \frac{(x+7)^2 (x-3)^5}{\sqrt{x^2+3x-1}}.$$

$$25. y = \frac{\sqrt[3]{x-3} (x+7)^5}{(x-4)^2}.$$

$$26. y = \frac{\sqrt{x+10} (x-8)^3}{(x-1)^5}.$$

$$27. y = \frac{\sqrt[5]{(x-2)^3 (x-1)}}{(x+3)^4}.$$

$$28. y = \frac{\sqrt[4]{(x+1)^3 (x-2)^5}}{(x-3)^2}.$$

$$29. y = \frac{\sqrt[6]{(x-1)^5}}{(x+2)^4 (x-5)^7}.$$

$$y = \frac{\sqrt[5]{(x+2)^3}}{(x-1)^4 (x-3)^5}.$$



## NAMUNAVIY VARIANTNI YECHISH

Berilgan funksiyalarni differensiyalang

$$1. y = 9x^5 - \frac{4}{x^3} + \sqrt[3]{x^7} - 3x + 4.$$

$$\text{Yechish: } y' = 9 \cdot 5x^4 - 4(-3)x^{-4} + \frac{7}{3}x^{\frac{4}{3}} - 3 = 45x^4 + \frac{12}{x^4} + \frac{7}{3}\sqrt[3]{x^4} - 3.$$

$$2. y = \sqrt[4]{(2x^2 - 3x + 1)^3} - \frac{6}{(x+1)^3}.$$

$$\text{Yechish: } y' = \frac{3}{4}(2x^2 - 3x + 1)^{-\frac{1}{4}}(4x - 3) - 6(-3)(x+1)^{-4} = \frac{3}{4} \frac{4x - 3}{\sqrt[4]{2x^2 - 3x + 1}} + \frac{18}{(x+1)^4}.$$

$$3. y = \operatorname{tg}^5(x+2) \cdot \arccos 3x^2.$$

$$\text{Yechish: } y' = 5\operatorname{tg}^4(x+2) \cdot \frac{1}{\cos^2(x+2)} \arccos 3x^2 + \operatorname{tg}^5(x+2) \cdot \left( \frac{1}{\sqrt{1-9x^4}} \right) \cdot 6x =$$

$$= \frac{5\operatorname{tg}^4(x+2) \cdot \arccos 3x^2}{\cos^2(x+2)} + \frac{\operatorname{tg}^5(x+2) \cdot 6x}{\sqrt{1-9x^4}}$$

$$4. y = \arcsin^5 4x \cdot \log_2(x-5).$$

$$\text{Yechish } y' = 5\arcsin^4 4x \cdot \frac{1}{\sqrt{1-16x^2}} \cdot 4\log_2(x-5) + \arcsin^5 4x \cdot \frac{1}{(x-5)\ln 2} =$$

$$= \frac{20\arcsin^4 4x \cdot \log_2(x-5)}{\sqrt{1-16x^2}} + \frac{\arcsin^5 4x}{(x-5)\ln 2}.$$

$$5. y = 3^{-x^4} \operatorname{ctg} 7x^3.$$

**Yechish:**

$$y' = 3^{-x^4} \ln 3 \cdot (-4x^3) \operatorname{ctg} 7x^3 + 3^{-x^4} \left( \frac{1}{-\sin^2 7x^3} \right) \cdot 21x^2 = -4\ln 3 \cdot 3^{-x^4} \operatorname{ctg} 7x^3 - \frac{21x^3 \cdot 3^{-x^4}}{\sin^2 7x^3}.$$

$$6. y = \operatorname{cth}^2 3x \cdot \operatorname{arctg} \sqrt{x}.$$

$$\text{Yechish: } y' = 2\operatorname{cth} 3x \cdot \left( -\frac{1}{\operatorname{sh}^2 3x} \right) \cdot 3\operatorname{arctg} \sqrt{x} + \operatorname{cth}^2 3x \times \frac{1}{1+x} \cdot \frac{1}{2\sqrt{x}} =$$

$$= -\frac{6\operatorname{cth} 3x \cdot \operatorname{arctg} \sqrt{x}}{\operatorname{sh}^2 3x} + \frac{\operatorname{cth}^2 3x}{(1+x)2\sqrt{x}}.$$

$$7. y = \sqrt{3x^2 - 7x + \frac{5}{e^{-x^4}}}.$$

$$\begin{aligned} \text{Yechish: } y' &= \left( \sqrt{3x^2 - 7x + \frac{5}{e^{-x^4}}} \right)' = \frac{(6x-7)e^{x^4}}{2\sqrt{3x^2 - 7x + 5}} + \sqrt{3x^2 - 7x + 5} \cdot e^{x^4} \cdot 4x^3 = \\ &= \frac{(6x-7)e^{x^4}}{2\sqrt{3x^2 - 7x + 5}} + 4x^3 e^{x^4} \sqrt{3x^2 - 7x + 5}. \end{aligned}$$

$$8. y = \frac{(\lg(x^2 - 3x + 5))}{\operatorname{arccotg}^2 5x}.$$

**Yechish:**

$$\begin{aligned} y' &= \left( \frac{2x-3}{(x^2 - 3x + 5)\ln 10} \operatorname{arccotg}^2 5x - \lg(x^2 - 3x + 5) \times 2 \cdot \operatorname{arccotg} 5x \cdot \left( -\frac{1}{1+25x^2} \right) \cdot 5 \right) * \\ * \operatorname{arccotg}^4 5x &= \left( \frac{(2x-3)\operatorname{arccotg}^2 5x}{(x^2 - 3x + 5)\ln 10} + \frac{10\lg(x^2 - 3x + 5) \cdot \operatorname{arccotg} 5x}{1+25x^2} \right) \cdot \operatorname{arccotg}^{-4} 5x. \end{aligned}$$

$$9. y = \sqrt{\frac{\arcsin 3x}{\operatorname{sh}^2 x}}.$$

$$\begin{aligned} \text{Yechish: } y' &= \frac{\frac{1}{2\sqrt{\arcsin 3x}} \cdot \frac{1}{\sqrt{1-9x^2}} \cdot 3\operatorname{sh}^2 x - 2\operatorname{sh}x\operatorname{ch}x\sqrt{\arcsin 3x}}{\operatorname{sh}^4 x} = \\ &= \frac{\frac{3\operatorname{sh}^2 x}{2\sqrt{\arcsin 3x}\sqrt{1-9x^2}} - \operatorname{ch}2x\sqrt{\arcsin 3x}}{\operatorname{sh}^4 x} \end{aligned}$$

$$10. y = \frac{(3\ln(x^2 - 5))}{(x+3)^7}.$$

$$\begin{aligned} \text{Yechish: } y' &= 3 \frac{\frac{1}{x^2 - 5} \cdot 2x(x+3)^7 - 7(x+3)^6 \ln(x^2 - 5)}{(x+3)^{14}} = \\ &= 3 \frac{\frac{2x(x+3)}{x^2 - 5} - 7 \cdot \ln(x^2 - 5)}{(x+3)^8} \end{aligned}$$

$$11. y = \sqrt[7]{\frac{(x+5)}{(x-5)}} \operatorname{ctg}(3x-4).$$

$$\text{Yechish: } y' = \frac{1}{7} \left( \frac{x+5}{x-5} \right)^{-\frac{6}{7}} \frac{x-5-(x+5)}{(x-5)^2} \operatorname{ctg}(3x-4) - \frac{1}{\sin^2(3x-4)} \cdot 3 \sqrt[7]{\frac{x+5}{x-5}} =$$

$$= -\frac{10 \operatorname{ctg}(3x-4)}{7 \sqrt[7]{(x+5)^6}} - \frac{3}{\sin^2(3x-4)} \sqrt[7]{\frac{x+5}{x-5}}.$$

$$12. \quad y = (th\sqrt{x+2})^{\ln(3x+2)}.$$

**Yechish:** Berilgan funksiyani logarifmlaymiz:

$\ln y = \ln(3x+2) \ln(th\sqrt{x+2})$ . Bu tenglikni differensialasak

$$\frac{1}{y} y' = \frac{3}{3x+2} \ln(th\sqrt{x+2}) + \ln(3x+2) \cdot \frac{1}{th\sqrt{x+2} ch^2 \sqrt{x+2}} \frac{1}{2\sqrt{x+2}}.$$

Oxirgi tenglikdan  $y'$  ni topamiz

$$y' = (th\sqrt{x+2})^{\ln(3x+2)} \left( \frac{3 \ln(th\sqrt{x+2})}{3x+2} + \frac{\ln(3x+2)}{2\sqrt{x+2} sh\sqrt{x+2} ch\sqrt{x+2}} \right).$$

$$13. \quad y = (\sin 7x)^{\operatorname{arctg}(3x-5)}$$

**Yechish:** Berilgan funksiyani logarifmlaymiz:  $\ln y = \operatorname{arctg}(3x-5) \cdot \ln(\sin 7x)$

Bu tenglikni differensialasak,

$$\frac{1}{y} y' = \frac{3}{1+(3x-5)^2} \ln(\sin 7x) + 7 \frac{\cos 7x}{\sin 7x} \operatorname{arctg}(3x-5)$$

Bu yerdan

$$y' = (\sin 7x)^{\operatorname{arctg}(3x-5)} \left( \frac{3 \cdot \ln(\sin 7x)}{1+(3x-5)^2} + 7 \operatorname{ctg} 7x \cdot \operatorname{arctg}(3x-5) \right)$$

$$14. \quad y = \sqrt[7]{(x+5)^6} / ((x-1)^2(x+3)^5).$$

**Yechish:** Logarifmik differensialash usulini qo'llab ketma-ket

topamiz:

$$\ln y = \frac{6}{7} \ln(x+5) - 2 \ln(x-1) - 5 \ln(x+3)$$

$$\frac{1}{y} y' = \frac{6}{7} \frac{1}{x+5} - 2 \frac{1}{x-1} - 5 \frac{1}{x+3}$$

$$y' = \frac{\sqrt[7]{(x+5)^6}}{(x-1)^2(x+3)^5} \left( \frac{6}{7(x+5)} - \frac{2}{x-1} - \frac{5}{x+3} \right)$$

## FOYDALANILGAN ADABIYOTLAR

- 1. Axmedov A.B., Shamsiyev D.N., Shamsiyev R.N., Pirmatov Sh.T.** Oliy matematika. 1-qism. Darslik. – T.: Fan va texnologiya, 2018. 392 b.
- 2. Xolmuradov E., Yusupov A.I.** Oliy matematika. 1-qism. O‘quv qo‘llanma. T.: Noshir, 2013. 385 b.
- 3. Abdukarimov A.** Limitlar nazariyasidan uslubiy ko‘rsatma (topshiriqlarning variantlari bilan) – Toshkent: TDAI, 2006. 72 b.
- 4. Abdukarimov A.** Chiziqli va vektorlar algebrasi. Uslubiy ko‘rsatma (topshiriqlarning variantlari bilan) – T: TDAI, 2007. 73 b.
- 5. Зайцев, В.П.** Математика для студентов – заочников: Часть 1: учебное пособие / В.П.Зайцев. –Барнаул: Изд-во АлтГТУ, 2015. 103 с.
- 6. Шилкина, Е.И.** Высшая математика: Часть 1. Учеб.-практ. Пособие / Е.И. Шилкина, М.П. Дымков, В.А. Рабцевич: Мн.: -БГЭУ, 2014. 194 с.
- 7. Сборник задач по высшей математике / К.Н. Лунгу[и др.].** – М.: Айрис Пресс, 2007. 576 с.
- 8. Шипачёв, В.С.** Курс высшей математики / В.С. Шипачёв. – М.: Проспект, 2004. 600 с.

## MUNDARIJA

<b>I. CHIZIQLI ALGEBRA.....</b>	<b>3</b>
1.1. Matritsa va ular ustida amallar.....	3
1.2. Determinantlar.....	7
1.3. Teskari matritsa.....	12
1.4. Chizikli algebraik tenglamalar tizimi.....	13
1.5. Topshiriq variantlari.....	20
<b>II. VEKTORLAR ALGEBRASI.....</b>	<b>51</b>
2.1. Vektor tushunchasi. Vektorning uzunligi.....	51
2.2. Vektorlar ustida amallar.....	52
2.3. Ikki vektorning skalyar ko‘paytmasi.....	54
2.4. Ikki vektorning vektor ko‘paytmasi.....	56
2.5. Uch vektorning aralash ko‘paytmasi.....	59
2.6. Topshiriq variantlari.....	62
<b>III. ANALITIK GEOMETRIYA.....</b>	<b>71</b>
3.1 Tekislikda to‘g‘ri chiziq.....	71
3.2 Tekislik.....	77
3.3 Fazoda to‘g‘ri chiziq.....	82
3.4 To‘g‘ri chiziq bilan tekislik.....	89
3.5 Topshiriq variantlari.....	93
<b>IV. MATEMATIK ANALIZGA KIRISH .....</b>	<b>104</b>
4.1. KETMA-KETLIKLAR VA FUNKSIYALARNING LIMITLARI.....	104
4.2. CHEKSIZ KICHIK FUNKSIYALARNI TAQQOSLASH. FUNKSIYANING UZLUKSIZLIGI.....	107
4.3. TOPSHIRIQ VARIANTLARI.....	110

<b>V. BIR O‘ZGARUVCHILI FUNKSIYANING DIFFERENSIAL HISOBI VA UNING TADBIQLARI.....</b>	<b>120</b>
5.1. HOSILA, UNING GEOMETRIK VA FIZIK MA’NOSI. DIFFERENSIALLASH QOIDALARI VA FORMULALARI.....	120
5.2. LOGARIFMIK DIFFERENSIALLASH .....	123
5.3. YUQORI TARTIBLI HOSILALAR.....	125
5.4. BIRINCHI VA YUQORI TARTIBLI DIFFERENSIALLAR HAMDA ULARNING TADBIQLARI.....	126
5.5. Lopital qoidalari.....	128
5.6. HOSILANING FUNKSIYA VA UNING GRAFIGINI TEKSHIRISHGA QO‘LLANILISHI.....	131
5.7. FUNKSIYANI TO‘LA TEKSHIRISH VA UNING GRAFIGINI YASASH SXEMASI.....	138
5.8. TOPSHIRIQ VARIANTLARI.....	141
<b>VI. FOYDALANILGAN ADABIYOTLAR.....</b>	<b>156</b>